



Staff Selection Commission
(Government Of India)

REGISTRATION NUMBER : 1601002392
EXAM DATE : 4-September-2016
EXAM NAME : SSC Examination 2016
TOTAL MARKS : 200

CANDIDATE NAME : JASPREET SINGH
EXAM START TIME : 16:15:00
EXAM DURATION : 01:15 Hrs
TOTAL NO OF QUESTIONS : 100

Question 1. Select the related word/letters/numbers from the given alternatives:

दिये गये विकल्पों में से संबंधित शब्द/अक्षरों/संख्या को चुनिए।

Jailor : Prison :: Curator : ?

जेलर : जेल :: क्यूरेटर : ?

Options:

- 1) Cell
कोठरी
- 2) Museum
संग्रहालय
- 3) Warden
संरक्षक
- 4) Cure
इलाज

Correct Answer: Museum

संग्रहालय

Candidate Answer: [NOT ANSWERED]

Question 2. Select the related word/letters/numbers from the given alternatives:

दिये गये विकल्पों में से संबंधित शब्द/अक्षरों/संख्या को चुनिए।

FED : IHG :: ? : ?

Options:

- 1) ACB : GUV
- 2) TSR : WVU
- 3) VUK : LMO
- 4) DEF : IGH

Correct Answer: TSR : WVU

Candidate Answer: TSR : WVU

Question 3. Select the related word/letters/numbers from the given alternatives:

दिये गये विकल्पों में से संबंधित शब्द/अक्षरों/संख्या को चुनिए।

9 : 25 :: 49 : ?

Options:

- 1) 36
- 2) 54
- 3) 64
- 4) 81

Correct Answer: 81

Candidate Answer: 81

Question 4.

For the following questions

Find the odd word/letters/number from the given alternatives.

दिए गए विकल्पों में से विषम शब्द/अक्षर/संख्या युग्म चुनिये।

Options:

- 1) Teacher
अध्यापक
- 2) Lawyer
वकील
- 3) Doctor
डॉक्टर
- 4) Manager
प्रबंधक

Correct Answer: Manager

प्रबंधक

Candidate Answer: Manager

प्रबंधक

Question 5.

For the following questions

Find the odd word/letters/number from the given alternatives.

इस प्रश्न में दिए गए विकल्पों में से विषम संख्या/अक्षर/संख्या युग्म चुनिए।

Options:

- 1) DEB
- 2) RTP
- 3) HIF
- 4) NOL

Correct Answer: RTP

Candidate Answer: RTP

Question 6.

For the following questions

Find the odd word/letters/number pair from the given alternatives.

दिए गए विकल्पों में से विषम शब्द/अक्षर/संख्या युग्म चुनिये।

Options:

- 1) 6 , 612
- 2) 5 , 521
- 3) 4 , 46
- 4) 7 , 543

Correct Answer: 7 , 543

Candidate Answer: 7 , 543

Question 7. Arrange the following words as per order in the dictionary.

निम्नलिखित शब्दों को शब्दकोश में दिए गये क्रम के अनुसार लिखिए।

1. Defect 2. Defence 3. Deerstalker 4. Defensive

Options:

- 1) 2 , 3 , 1 , 4
- 2) 1, 3, 2, 4
- 3) 4, 3, 1, 2
- 4) 3, 1, 2, 4

Correct Answer: 3, 1, 2, 4

Candidate Answer: 3, 1, 2, 4

Question 8. A series is given, with one term missing. Choose the correct alternative from the given ones that will complete the series.

दी गई श्रृंखला में एक पद लुप्त है। दिए गए विकल्पों में से सही विकल्प चुनिए जो श्रृंखला को पूरा करेगा।

AZ , CX , FU , ?

Options:

1) IR

2) IV

3) JQ

4) KP

Correct Answer: JQ

Candidate Answer: JQ

Question 9. A series is given, with one term missing. Choose the correct alternative from the given ones that will complete the series.

दी गई श्रृंखला में एक पद लुप्त है। दिए गए विकल्पों में से सही विकल्प चुनिए जो श्रृंखला को पूरा करेगा।

5, 10, 30, ?, 600, 3600

Options:

1) 120

2) 100

3) 90

4) 60

Correct Answer: 120

Candidate Answer: 120

Question 10. A person while buying a dress on sale spends Rs. 45 and saves Rs. 5, what is the percentage of his savings?

एक व्यक्ति 'सेल' में वस्त्र खरीदते समय Rs. 45 खर्च करता है और Rs. 5 की बचत करता है। उसकी बचत का प्रतिशत क्या है ?

Options:

1) 5%

2) 10%

3) 15%

4) 20%

Correct Answer: 10%

Candidate Answer: 10%

Question 11. 2 litre of pure alcohol is added to 6 litre, 40% alcohol solution. The percentage of water in the solution is _____ .

2 ली. शुद्ध ऐल्कोहॉल को 6 ली., 40% ऐल्कोहॉल घोल में मिलाया जाता है। घोल में जल का प्रतिशत बताइये ?

Options:

1) 65%

2) 45%

3) 55%

4) 60%

Correct Answer: 45%

Candidate Answer: [NOT ANSWERED]

Question 12. From the given alternative words, select the word which can be formed using the letters of the given word:

निम्नलिखित विकल्पों में से वह शब्द चुनिए जो दिए गए शब्द के अक्षरों का प्रयोग करके बनाया जा सकता है

COMMUNICATION

Options:

1) AMMUNITION

2) MONITOR

3) COUNTRY

4) UNIFICATION

Correct Answer: AMMUNITION

Candidate Answer: AMMUNITION

Question 13. If 'HARBOUR' is written as 'IBSCPVS', how is 'HABITAT' written in that code?

यदि 'HARBOUR' को 'IBSCPVS' के रूप में लिखा जाता है, तो 'HABITAT' को उसी कोड में कैसे लिखा जाएगा ?

Options:

1) GZHSZS

2) IBCJUBU

3) IBAHSZS

4) IBCJBUU

Correct Answer: IBCJUBU

Candidate Answer: IBCJBUU

Question 14.If '-' means 'x', 'x' means '+', '+' means '÷' and '÷' means '-', then what will be the value of $40 \times 12 + 3 - 6 \div 60 = ?$

यदि '-' का आशय 'x' से हो, 'x' का आशय '+' से हो, '+' का आशय '÷' से हो और '÷' का आशय '-' से हो, तो $40 \times 12 + 3 - 6 \div 60 =$ का मान क्या होगा ?

Options:

- 1) 4
- 2) 7
- 3) 16
- 4) 44

Correct Answer: 4

Candidate Answer: 4

Question 15.If $25 + 5 \div 2 = 40$, and $35 + 5 \div 2 = 60$, then $45 + 5 \div 2 = ?$

यदि $25 + 5 \div 2 = 40$, और $35 + 5 \div 2 = 60$, तो $45 + 5 \div 2 = ?$

Options:

- 1) 90
- 2) 70
- 3) 60
- 4) 80

Correct Answer: 80

Candidate Answer: 80

Question 16.Select the missing numbers from the given alternatives

दिए गये विकल्पों में से लुप्त संख्या चुनिए।


8 21 34
27 ? 53

Options:

- 1) 35
- 2) 40
- 3) 17
- 4) 23

Correct Answer: 40

Candidate Answer: 40



Question 17.A driver left his village and drove North for 20 km after which he stopped for breakfast. Then he turned left and drove another 30 km, when he stopped for lunch. After some rest, he again turned left and drove 20 km before stopping for evening tea. Once more he turned left and drove 30 km to reach the town where he had supper. After evening tea, in which direction did he drive?

एक ड्राइवर अपने गाँव से चला और 20 कि.मी. उत्तर की ओर जाने के बाद जलपान के लिए रुका। फिर वह बाएं मुड़ गया और 30 कि.मी. और चलने के बाद भोजन के लिए रुका। कुछ और विश्राम के बाद वह फिर बाएं मुड़ा और शाम की चाय के लिए रुकने से पहले 20 कि.मी. और चला। वह एक बार फिर बाएं मुड़ा और 30 कि.मी. चलकर उस कस्बे में पहुँच गया जहाँ उसने रात्रि-भोज किया। शाम की चाय के बाद वह किस दिशा में चला था?

Options:

- 1) West
पश्चिम
- 2) East
पूर्व
- 3) North
उत्तर
- 4) South
दक्षिण

Correct Answer: East

पूर्व

Candidate Answer: North

उत्तर

Question 18. Consider the given statement/s to be true and decide which of the given conclusions/assumptions can definitely be drawn from the given statement.

Statements: 1. Some managers are young.

2. All boys are young.

Conclusions: I. Some boys are managers.

II. Some managers are boys.

निम्नलिखित प्रश्न में एक या दो वक्तव्य दिये गये हैं, जिसके आगे दो निष्कर्ष/मान्यताएं, I और II निकाले गये हैं। आपको विचार करना है कि वक्तव्य सत्य है चाहे वह सामान्यतः शर्त तथ्यों से भिन्न प्रतीत होता हो। आपको निर्णय करना है कि दिए गए वक्तव्य में से कौन-सा निश्चित रूप से सही निष्कर्ष/मान्यता निकाला जा सकता है ?

कथन : 1. - कुछ प्रबंधक युवा हैं।

2. - सभी लड़के युवा हैं।

निष्कर्ष: I- कुछ लड़के प्रबंधक हैं।

II- कुछ प्रबंधक लड़के हैं।

Options:

1) Only conclusion I follows

केवल निष्कर्ष I सही है।

2) Only conclusion II follows

केवल निष्कर्ष II सही है।

3) Neither conclusion I nor conclusion II follows

न निष्कर्ष I सही है और न निष्कर्ष II

4) Both conclusion I and conclusion II follow

निष्कर्ष I और निष्कर्ष II दोनों सही हैं।

Correct Answer: Neither conclusion I nor conclusion II follows

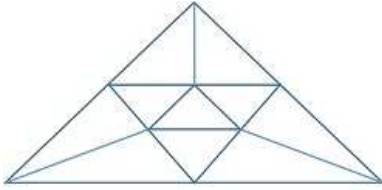
न निष्कर्ष I सही है और न निष्कर्ष II

Candidate Answer: Neither conclusion I nor conclusion II follows

न निष्कर्ष I सही है और न निष्कर्ष II

Question 19. How many triangles are there in the given figure?

दिए गये चित्र में कितने त्रिभुज हैं ?



Options:

1) 10

2) 13

3) 15


4) 16

Correct Answer: 15

Candidate Answer: 16

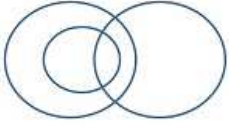
Question 20. Which of the following diagrams represent the relationship among males, fathers, advocates ?

निम्नलिखित में से कौन से आरेख पुरुषों, पिताओं और ऐडवोकेटों में संबंध दर्शाते हैं?



Options:

1)



2)



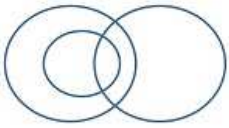
3)



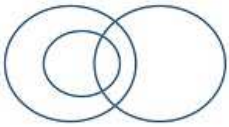
4)



Correct Answer:

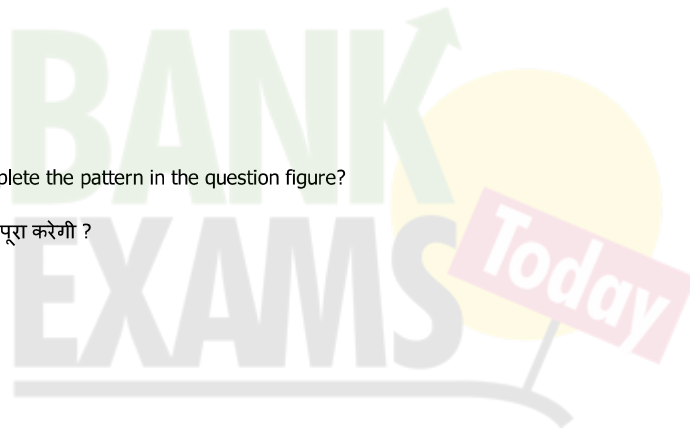



Candidate Answer:



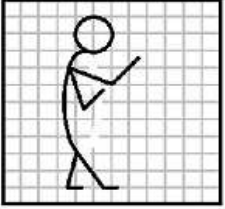
Question 21. Which answer figure will complete the pattern in the question figure?

कौन-सी उत्तर आकृति प्रश्न आकृति के पैटर्न को पूरा करेगी ?

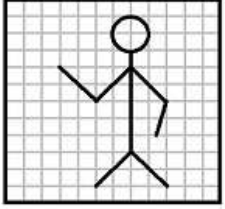


Options:

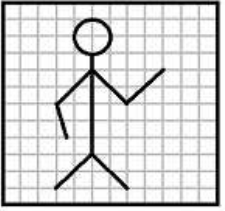
1)



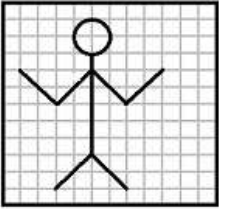
2)



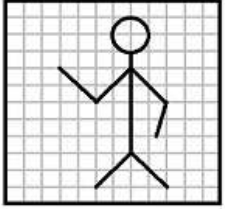
3)




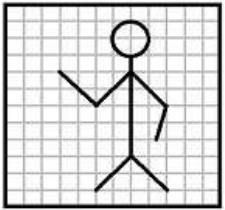
4)



Correct Answer:

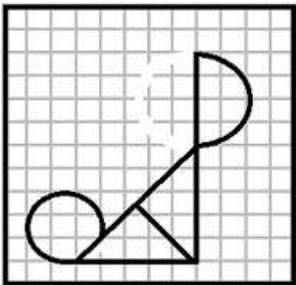


Candidate Answer:



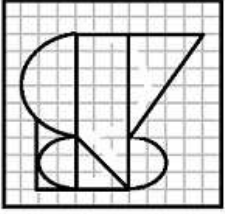
Question 22. From the given answer figures, select the one in which the question figure is hidden/embedded

दी गई उत्तर आकृतियों में से उस उत्तर आकृति को चुनिए जिसमें प्रश्न आकृति निहित है।




Options:

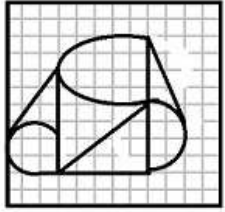
1)



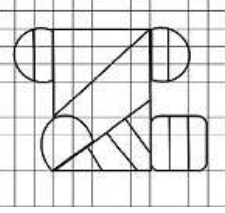
2)



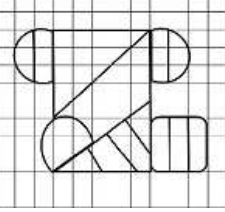
3)




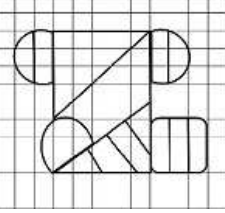
4)



Correct Answer:

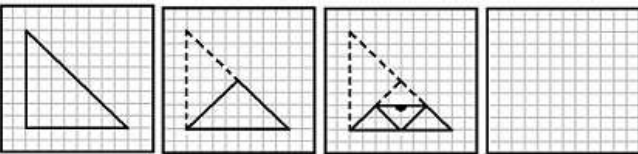


Candidate Answer:



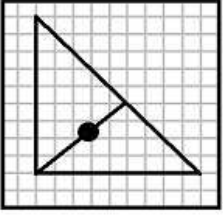
Question 23. A piece of paper is folded and cut as shown below in the question figures. From the given answer figures, indicate how it will appear when opened.

नीचे प्रश्न आकृतियों में दिखाए अनुसार कागज को मोड़कर काटने तथा खोलने के बाद वह किस उत्तर आकृति जैसा दिखाई देगा ?

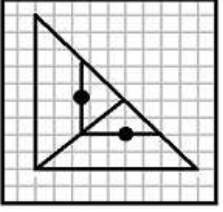


Options:

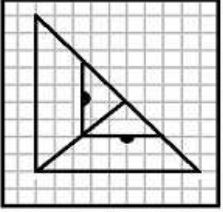
1)



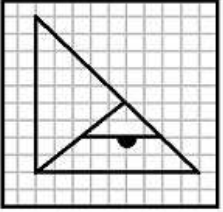
2)



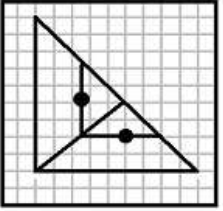
3)




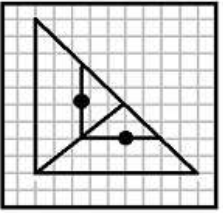
4)



Correct Answer:



Candidate Answer:



Question 24.If a mirror is placed on the line MN, then which of the answer figures is the right image of the given figure?

यदि एक दर्पण को MN रेखा पर रखा जाये तो दी गई उत्तर आकृतियों में से कौन-सी आकृति प्रश्न आकृति का सही प्रतिबिम्ब होगी ?



Options:

- 1) ABMUMI
- 2) BMUMIA
- 3) MUMIAB
- 4) MUMBAI

Correct Answer: MUMBAI

Candidate Answer: MUMBAI

Question 25. In the question, a word is represented by only one set of numbers as given in any one of the alternatives. The sets of numbers given in the alternatives are represented by two classes of alphabets as in two matrices given below. The columns and rows of Matrix I are numbered from 0 to 4 and that of Matrix II are numbered from 5 to 9. A letter from these matrices can be represented first by its row and next by its column, e.g., L can be represented by 12, 24, etc., and 'R' can be represented by 55, 67, etc.

Similarly you have to identify the set for the word 'TONE'

निम्नलिखित प्रश्न में विकल्पों में दिए गए संख्या-समूह, अक्षरों के दो वर्गों द्वारा दर्शाए गए हैं, जैसे कि नीचे दिए गए दो आव्यूहों में हैं। आव्यूह I के सतम्भ और पंक्ति की संख्या 0 से 4 तक दी गई है, और आव्यूह II के 5 से 9 तक, इन आव्यूहों से एक अक्षर को पहले उसकी पंक्ति और बाद में स्तम्भ संख्या द्वारा दर्शाया जा सकता है। उदाहरण के लिए 'L' को 12, 24 आदि द्वारा दर्शाया जा सकता है तथा 'R' को 55, 67 आदि द्वारा दर्शाया जा सकता है। इसी तरह से आपको दिए हुए शब्द 'TONE' के लिए समूह को पहचानना है।

| MATRIX I | | | | | | MATRIX II | | | | | |
|----------|---|---|---|---|---|-----------|---|---|---|---|---|
| | 0 | 1 | 2 | 3 | 4 | | 5 | 6 | 7 | 8 | 9 |
| 0 | L | E | O | S | C | 5 | R | K | U | N | T |
| 1 | S | C | L | E | O | 6 | N | T | R | K | U |
| 2 | E | O | S | C | L | 7 | K | U | N | T | R |
| 3 | C | L | E | O | S | 8 | T | R | K | U | N |
| 4 | O | S | C | L | E | 9 | U | N | T | R | K |

Options:

1) 85 , 40 , 58 , 75

2) 66 , 21 , 77 , 56

3) 97 , 33 , 65 , 44

4) 78 , 57 , 89 , 32

Correct Answer: 97 , 33 , 65 , 44

Candidate Answer: 97 , 33 , 65 , 44

Question 26. Which of the following taxes is levied by the State Government only?

निम्नलिखित में कौनसा कर केवल राज्य सरकार द्वारा लगाया जाता है ?

Options:

1) Wealth tax

संपत्ति कर

2) Entertainment tax

मनोरंजन कर

3) Income tax

आय कर

4) Gift tax

उपहार कर

Correct Answer: Entertainment tax

मनोरंजन कर

Candidate Answer: Entertainment tax

मनोरंजन कर

Question 27. HDI is an aggregate measure of progress in which of the three dimensions?

एच. डी. आई. किन तीन क्षेत्रों में विकास का मापक है ?

Options:

1) Health, Education, Income

स्वास्थ्य, शिक्षा, आमदनी

2) Food Security, Employment, Income

खाद्य सुरक्षा, रोजगार, आमदनी

3) Agriculture, Industry, Services

कृषि, उद्योग, सेवाएं

4) Height, Weight, Colour

ऊंचाई, भार, रंग

Correct Answer: Health, Education, Income

स्वास्थ्य, शिक्षा, आमदनी

Candidate Answer: Height, Weight, Colour

ऊंचाई, भार, रंग

Question 28. The Working Committee of National Congress sanctioned the resolution named 'Quit India' at

राष्ट्रीय कांग्रेस कार्यकारी समिती ने "भारत छोड़ो" नामक आन्दोलन का अनुमोदन कहाँ किया था?

Options:

- 1) Wardha
वर्धा
- 2) Nagpur
नागपुर
- 3) Mumbai
मुंबई
- 4) Delhi
दिल्ली

Correct Answer: Wardha

वर्धा

Candidate Answer: [NOT ANSWERED]

Question 29. Preservation of historical articles is done in science of _____

ऐतिहासिक लेखों का संरक्षण विज्ञान की किस शाखा के अन्तर्गत आता है?

Options:

- 1) Iconography
प्रतिमा विज्ञान
- 2) Numismatic
मुद्रा शास्त्र
- 3) Museology
म्यूजियोलॉजी
- 4) Epigraphy
ऐपिग्राफी

Correct Answer: Museology

म्यूजियोलॉजी

Candidate Answer: [NOT ANSWERED]

Question 30. "Alfalfa" is the name of a _____

अल्फाल्फा एक प्रकार का _____ का नाम है।

Options:

- 1) Mineral
खनिज
- 2) Tribe
जाती
- 3) Grass
घास
- 4) Town
शहर

Correct Answer: Grass

घास

Candidate Answer: [NOT ANSWERED]

Question 31. The chemical that is used to ripen mangoes is

उस रसायन का नाम बताइए जो आम को पकाने के काम आता है।

Options:

- 1) Calcium sulphide
कैल्शियम सल्फाइड
- 2) Calcium carbide
कैल्शियम कार्बाइड
- 3) Calcium carbonate
कैल्शियम कार्बोनेट
- 4) Calcium chloride
कैल्शियम क्लोराइड

Correct Answer: Calcium carbide


कैल्शियम कार्बाइड

Candidate Answer: Calcium sulphide

कैल्शियम सल्फाइड

Question 32. The term 'Smasher' is associated with which sport?

"स्मैशर" शब्द निम्नलिखित में से किस खेल के साथ जुड़ा हुआ है ?



Options:

- 1) Hockey
हॉकी
- 2) Boxing
बाक्सिंग
- 3) Volley Ball
वालीबॉल
- 4) Cricket
क्रिकेट

Correct Answer: Volley Ball

वालीबॉल

Candidate Answer: Volley Ball

वालीबॉल

Question 33. _____ involves traversing the entire file system, marking everything that can be accessed.

निम्नलिखित में से किसमें, जो भी फाइल / फोल्डर एक्सेस किया जा सकता है उसे मार्क करते हुए, पूरे फाइल सिस्टम से गुजरना पड़ता है?

Options:

- 1) Index pointer
इंडेक्स पॉइंटर
- 2) Garbage collection
कचरा एकत्रिकरण
- 3) File system
फाइल सिस्टम
- 4) Stack pointer
स्टैक पॉइंटर

Correct Answer: Garbage collection

कचरा एकत्रिकरण

Candidate Answer: [NOT ANSWERED]

Question 34. Nylon threads are made of

नायलॉन धागा किससे बना होता है?

Options:


- 1) Polyester polymer
पॉलीएस्टर पॉलीमर
- 2) Polyamide polymer
पॉलीएमाइड पॉलीमर
- 3) Polyvinyl polymer
पॉलीविनाइल पॉलीमर
- 4) Polysaccharide
पॉलीसैकेराइड

Correct Answer: Polyamide polymer

पॉलीएमाइड पॉलीमर

Candidate Answer: Polyester polymer

पॉलीएस्टर पॉलीमर



Question 35. The longest railway line in the world connects _____

विश्व की सबसे लंबी रेल लाइन किन शहरों को जोड़ती है ?

Options:

- 1) New York and Seattle
न्यूयॉर्क तथा सिएटल
- 2) Leningrad and Vladivostok
लेनिनग्राड तथा व्लादिवोस्तोक
- 3) Trivandrum and Guwahati
तिरुवनंतपुरम तथा गुवाहाटी
- 4) Perth and Sydney
पर्थ तथा सिडनी

Correct Answer: Leningrad and Vladivostok

लेनिनग्राड तथा व्लादिवोस्तोक

Candidate Answer: [NOT ANSWERED]

Question 36. How many Constitutional Amendments to the Constitution of India have been made so far?

भारत के संविधान में अब तक कितने संशोधन बनाए जा चुके हैं ?

Options:

1) 122

2) 121

3) 120

4) 119

Correct Answer: 122

Candidate Answer: [NOT ANSWERED]

Question 37. The Chairman of the National Disaster Management Authority (NDMA) is

राष्ट्रीय आपदा प्रबन्धन प्राधिकरण का अध्यक्ष कौन है ?

Options:

1) National Security Advisor

राष्ट्रीय सुरक्षा सलाहकार

2) Prime Minister of India

भारत के प्रधान मंत्री

3) Chief of DRDO

डी.आर.डी.ओ. का अध्यक्ष

4) Home Minister of India

भारत के गृह मंत्री

Correct Answer: Prime Minister of India

भारत के प्रधान मंत्री

Candidate Answer: Prime Minister of India

भारत के प्रधान मंत्री

Question 38. When the offices of the President and Vice-President fall vacant simultaneously, who acts as President?

जब राष्ट्रपति तथा उप-राष्ट्रपति के पद पर कोई भी कार्यरत न हो तब उनके रिक्त स्थान पर "राष्ट्रपति" के रूप में कौन कार्यरत होगा ?

Options:

1) Prime Minister of India

भारत के प्रधान मंत्री

2) The Chief Justice of India

भारत का मुख्य न्यायाधीश

3) The Speaker of Lok Sabha

लोकसभा अध्यक्ष

4) The Comptroller and Auditor General of India

भारत का नियंत्रक एवं महालेखा परीक्षक

Correct Answer: The Chief Justice of India

भारत का मुख्य न्यायाधीश

Candidate Answer: The Chief Justice of India

भारत का मुख्य न्यायाधीश

Question 39. Goitre is caused by the deficiency of _____

घेंघा नामक रोग किसकी कमी के कारण उत्पन्न होता है ?

Options:

1) Zinc

ज़िंक

2) Calcium

कैल्शियम

3) Iodine

आयोडीन

4) Chlorine

क्लोरीन

Correct Answer: Iodine

आयोडीन

Candidate Answer: Iodine

आयोडीन

Question 40. For photoelectric effect to take place, the metal used as the cathode should have _____

प्रकाश-वैद्युत प्रभाव उत्पन्न करने के लिए जिस धातु का प्रयोग कैथोड की तरह से किया जाना है उसका

Options:

- 1) high melting point
उच्च गलनांक होना चाहिए
- 2) low melting point
निम्न गलनांक होना चाहिए
- 3) Low work function
निम्न क्रियाशीलता होनी चाहिए
- 4) low resistance
निम्न प्रतिरोधकता

Correct Answer: Low work function

निम्न क्रियाशीलता होनी चाहिए

Candidate Answer: [NOT ANSWERED]

Question 41. The Speaker of the Lok Sabha can be removed from his office by _____

लोकसभा के अध्यक्ष को उसके पद से किसके द्वारा हटाया जा सकता है ?

Options:

- 1) The President
राष्ट्रपति
- 2) The Prime Minister
प्रधानमंत्री
- 3) a resolution passed by both Houses of Parliament
संसद के दोनों सदनो द्वारा पारित प्रस्ताव के द्वारा
- 4) a resolution passed by the Lok Sabha
लोकसभा द्वारा पारित प्रस्ताव द्वारा

Correct Answer: a resolution passed by the Lok Sabha

लोकसभा द्वारा पारित प्रस्ताव द्वारा

Candidate Answer: a resolution passed by the Lok Sabha

लोकसभा द्वारा पारित प्रस्ताव द्वारा

Question 42. What does Section 124A of Indian Penal Code deal with?

भारतीय दंड संहिता के अनुच्छेद 124 A के अन्तर्गत क्या आता है ?

Options:

- 1) Atrocity against women
महिलाओं के खिलाफ अत्याचार
- 2) Sedition
राजद्रोह
- 3) Crime for demanding dowry
दहेज की मांग से संबंधित अपराध
- 4) Atrocity against SC / ST
अनुसूचित जाति/ अनुसूचित जनजाति के प्रति अत्याचार

Correct Answer: Sedition

राजद्रोह

Candidate Answer: [NOT ANSWERED]

Question 43. Which instrument is used for photographing the Sun?

सूर्य की फोटोग्राफी के लिए किस उपकरण का प्रयोग किया जाता है ?

Options:

- 1) Galvanometer
गैल्वेनोमीटर
- 2) Potentiometer
पोटेंशियोमीटर
- 3) Spectrophotometer
स्पेक्ट्रोफोटोमीटर
- 4) Spectroheliograph
स्पेक्ट्रो हीलियोग्राफ

Correct Answer: Spectroheliograph

स्पेक्ट्रो हीलियोग्राफ

Candidate Answer: Spectroheliograph

स्पेक्ट्रो हीलियोग्राफ

Question 44. Which country won 2016 Men's Hockey Champions Trophy ?

वर्ष 2016 की पुरुष हॉकी चैंपियनशिप ट्रॉफी किस देश ने जीती ?

Options:

- 1) India
भारत
- 2) Germany
जर्मनी
- 3) Belgium
बेल्जियम
- 4) Australia
ऑस्ट्रेलिया

Correct Answer: Australia

ऑस्ट्रेलिया

Candidate Answer: [NOT ANSWERED]

Question 45. Which of the following countries is not a member of G-8?

निम्नलिखित में से कौनसा देश जी-8 का सदस्य नहीं है?

Options:

- 1) USA
यू.एस.ए.
- 2) UK
यू.के.
- 3) Germany
जर्मनी
- 4) Russia
रूस

Correct Answer: Russia

रूस

Candidate Answer: [NOT ANSWERED]

Question 46. The main protein found in milk is _____

दूध में पाया जानेवाला मुख्य प्रोटीन कौनसा है ?

Options:

- 1) Albumin
एल्बुमिन
- 2) Globulin
ग्लोब्युलिन
- 3) Globin
ग्लोबिन
- 4) Casein
कैसीन

Correct Answer: Casein

कैसीन

Candidate Answer: [NOT ANSWERED]

Question 47. Which organ gets affected in Weil's disease?

वील्स रोग में कौन सा अंग प्रभावित होता है?

Options:

- 1) Liver
लीवर
- 2) Lung
फेफड़ा
- 3) Heart
हृदय
- 4) Kidney
किडनी


Correct Answer: Kidney

किडनी

Candidate Answer: [NOT ANSWERED]

Question 48. Which of the following was the Official slogan for the 2016 Rio Olympic and Para Olympic Games?

निम्नलिखित में कौनसा अधिकारिक नारा वर्ष 2016 के रियो ओलंपिक तथा पैरा ओलंपिक खेलों के लिए रखा गया है?



Options:

1) Welcome Home

वेलकम होम

2) A New World

ए न्यू वर्ल्ड

3) Love & Save Nature

लव एन्ड सेव नेचर

4) Inspire a Generation

इन्स्पायर ए जनरेशन

Correct Answer: A New World

ए न्यू वर्ल्ड

Candidate Answer: A New World

ए न्यू वर्ल्ड

Question 49. The Daily Weather Map of India is prepared and printed at _____

भारत का "दैनिक मौसम मानचित्र" कहाँ तैयार तथा छापा (प्रिंट) जाता है ?

Options:

1) Kolkata

कोलकाता

2) Mumbai

मुंबई

3) New Delhi

नई दिल्ली

4) Pune

पुणे

Correct Answer: Pune

पुणे

Candidate Answer: [NOT ANSWERED]

Question 50. The capital of the Mauryan Kingdom was located at _____

मौर्य साम्राज्य की राजधानी कहाँ स्थित थी ?

Options:

1) Pataliputra

पाटलिपुत्र

2) Vaishali

वैशाली

3) Lumbini

लुम्बिनी

4) Gaya

गया

Correct Answer: Pataliputra

पाटलिपुत्र

Candidate Answer: Lumbini

लुम्बिनी

Question 51. A canteen requires 56 kgs of rice for seven days . The quantity of rice required for the months of April and May together is

किसी कैन्टीन को 7 दिन के लिए 56 कि.ग्रा. चावल की आवश्यकता है। उसे अप्रैल और मई माह के लिए मिलाकर कुल कितने कि.ग्रा. चावल की आवश्यकता होगी ?

Options:

1) 468 kg

468 कि.ग्रा.

2) 488 kg

488 कि.ग्रा.

3) 498 kg

498 कि.ग्रा.

4) 508 kg

508 कि.ग्रा.

Correct Answer: 488 kg

488 कि.ग्रा.

Candidate Answer: 488 kg

488 कि.ग्रा.

Question 52. A shopkeeper earns a profit of 15% after selling a book at 20% discount on the printed price . The ratio of the cost price and printed price of the book is

एक पुस्तक के अंकित मूल्य पर 20% छूट देने पर एक दुकानदार को 15% का लाभ होता है। पुस्तक के क्रय मूल्य और अंकित मूल्य का अनुपात बताइये ?

Options:

- 1) 20:23
- 2) 23:20
- 3) 16:23
- 4) 23:16

Correct Answer: 16:23**Candidate Answer:** 16:23

Question 53. A car travels 80 km in 2 hours and a train travels 180 km in 3 hours. The ratio of speed of the car to the train is

एक कार 2 घण्टे में 80 कि.मी. की यात्रा करती है और एक रेलगाड़ी 3 घण्टे में 180 कि.मी. की यात्रा करती है। कार की रेलगाड़ी से चाल का अनुपात क्या है ?

Options:

- 1) 2:3
- 2) 3:2
- 3) 3:4
- 4) 4:3

Correct Answer: 2:3**Candidate Answer:** 2:3

Question 54. A shopkeeper offers 2.5% discount on cash purchases. What cash amount would Rohit pay for a cycle, the marked price of which is ₹ 3600 ?

एक दुकानदार नकद खरीद पर 2.5% का छूट देता है। एक साईकिल, जिसका अंकित मूल्य 3600 ₹ है, को खरीदने के लिए रोहित को कितनी राशि का भुगतान करना होगा ?

Options:

- 1) Rs. 3490
- 2) Rs. 3500
- 3) Rs. 3510
- 4) Rs. 3520

Correct Answer: Rs. 3510**Candidate Answer:** Rs. 3510

Question 55. Due to a price hike of 20%, 4 kg less sugar is available for ₹ 120. What is the initial price per kg of sugar ?

चीनी की कीमत में 20% की वृद्धि होने पर 120 रु में 4 कि.ग्रा. चीनी कम मिलती है। चीनी का प्रति किग्रा. प्रारम्भिक मूल्य क्या था ?

Options:

- 1) ₹ 5 / kg
- 2) ₹ 4 / kg
- 3) ₹ 6 / kg
- 4) ₹ 5.5 / kg

Correct Answer: ₹ 5 / kg

₹ 5 / किग्रा.

Candidate Answer: ₹ 6 / kg

₹ 6 / किग्रा.

Question 56. A man walks 1 km on 1st day, 2 km on 2nd day, 3 km on 3rd day and so on. The total distance the man covers in 10 days is

एक व्यक्ति पहले दिन 1 कि.मी. चलता है, दूसरे दिन 2 कि.मी. चलता है, तीसरे दिन 3 कि.मी. चलता है और इसी प्रकार आगे भी चलता रहता है। बताइए कि 10 दिन में वह कितनी दूरी तय करेगा?

Options:

- 1) 40 km
- 2) 50 Km
- 3) 55 Km
- 4) 58 Km

Correct Answer: 55 Km

55 कि.मी.

Candidate Answer: 55 Km

55 कि.मी.

Question 57. The rate of simple interest for which a sum of money becomes 5 times in 8 years is

साधारण ब्याज की वह दर ज्ञात कीजिए जिस पर कोई धनराशि 8 वर्ष में 5 गुना हो जाती है ?

Options:

- 1) 30%
- 2) 40%
- 3) 50%
- 4) 55%

Correct Answer: 50%

Candidate Answer: 50%

Question 58.If $a^2 + b^2 + c^2 = 83$ and $a + b + c = 15$ then the value of $ab + bc + ca$ is

यदि $a^2 + b^2 + c^2 = 83$ और $a + b + c = 15$ हो, तो $ab + bc + ca$ का मान ज्ञात कीजिए ?

Options:

- 1) 69
- 2) 70
- 3) 71
- 4) 72

Correct Answer: 71

Candidate Answer: [NOT ANSWERED]

Question 59.If $(\sqrt{3} + 1)^2 = x + \sqrt{3}y$, then the value of $x + y$ is

यदि $(\sqrt{3} + 1)^2 = x + \sqrt{3}y$ हो तो

$x + y$ का मान ज्ञात कीजिए ?

Options:

- 1) 2
- 2) 4
- 3) 6
- 4) 8

Correct Answer: 6

Candidate Answer: 6

Question 60.T is a point on the common tangents at P of two circles and if TA and TB are respectively the other tangents at A and B to the two circles drawn from the point T then

दो वृत्तों के P पर समान स्पर्शी रेखाओं पर T एक बिन्दु है और T बिन्दु से खींचे गए दो वृत्तों के A और B पर TA और TB क्रमशः अन्य स्पर्शी रेखाएँ हैं, तब

Options:

- 1) $TA = 2 TB$
- 2) $TA = TB$
- 3) $TA = 1/2 TB$
- 4) $3TA = TB$

Correct Answer: $TA = TB$

Candidate Answer: $TA = TB$

Question 61.In a triangle XYZ, which of the following conditions is true

XYZ त्रिकोण में निम्नलिखित में से कौन सी स्थिति सही है ?

Options:

- 1) $XY - YZ > ZX$
- 2) $XY + YZ < ZX$
- 3) $XY - YZ < XZ$
- 4) $XY + ZX < YZ$

Correct Answer: $XY - YZ < XZ$

Candidate Answer: $XY - YZ < XZ$

Question 62.If $\sin(3x - 20^\circ) = \cos(3y + 20^\circ)$, then find the value of $(x + y)$.

यदि $\sin(3x - 20^\circ) = \cos(3y + 20^\circ)$ तो $(x + y)$ का मान ज्ञात कीजिए ?

Options:

- 1) 90°
- 2) 60°
- 3) 120°
- 4) 30°

Correct Answer: 30°

Candidate Answer: [NOT ANSWERED]

Question 63.If $1/2$ is added to a number and the sum is multiplied by 3, the result is 21. Then the number is

यदि किसी संख्या में $1/2$ जोड़ दिया जाए और फिर उस योगफल को 3 से गुना किया जाए तो उत्तर 21 प्राप्त होता है। संख्या बताइये ?

Options:

- 1) 6.5
- 2) 5.5
- 3) 4.5
- 4) -6.5

Correct Answer: 6.5

Candidate Answer: 6.5

Question 64.The average temperature for Monday, Tuesday, Wednesday and Thursday was 48° . The average temperature for Tuesday, Wednesday, Thursday and Friday was 52° , If the temperature on Monday was 42° , then the temperature on Friday was (in degrees)

सोमवार, मंगलवार, बुधवार और बृहस्पतिवार का औसत तापमान 48° था। मंगलवार, बुधवार, बृहस्पतिवार और शुक्रवार का औसत तापमान 52° था। यदि सोमवार को तापमान 42° हो तो शुक्रवार का तापमान (डिग्री में) बताइए ?

Options:

- 1) 58
- 2) 56
- 3) 52
- 4) 50

Correct Answer: 58

Candidate Answer: 58

Question 65.If $m - n = 2$, $mn = 15$, $(m , n > 0)$ then the value of $(m^2 - n^2) (m^3 - n^3)$ is

यदि $m - n = 2$, $mn = 15$, $(m , n > 0)$ हो तो $(m^2 - n^2) (m^3 - n^3)$ का मान बताइए ।

Options:

- 1) 1856
- 2) 1658
- 3) 1586
- 4) 1568

Correct Answer: 1568

Candidate Answer: 1568

Question 66.If $P = 9$, $Q = \sqrt{17}$ then the value of $(p^2 - q^2)^{-1/3}$ is equal to

यदि $P = 9$, $Q = \sqrt{17}$ हो तो $(p^2 - q^2)^{-1/3}$ का मान किसके बराबर होगा ?

Options:

- 1) 4
- 2) $1/4$
- 3) 3
- 4) $1/3$

Correct Answer: $1/4$

Candidate Answer: $1/4$

Question 67.If angles of measure $(5y + 62^\circ)$ and $(22^\circ + y)$ are supplementary , then value of y is

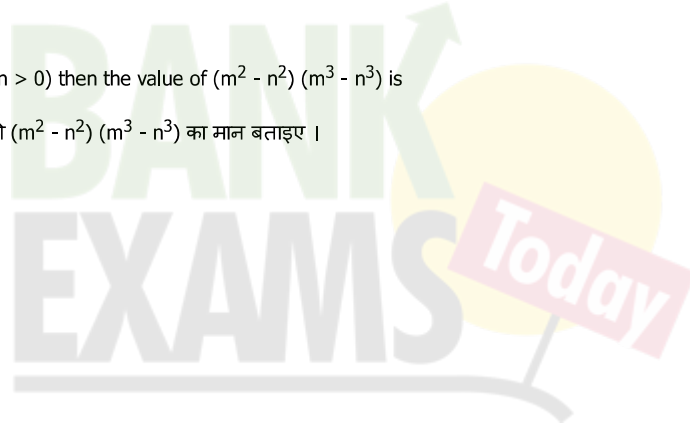
यदि कोण $(5y + 62^\circ)$ और $(22^\circ + y)$ संपूरक हो तो y का मान ज्ञात कीजिए ?

Options:

- 1) 16°
- 2) 32°
- 3) 8°
- 4) 1°

Correct Answer: 16°

Candidate Answer: 16°



Question 68. From the circumcentre I of the triangle ABC, perpendicular ID is drawn on BC. If $\angle BAC = 60^\circ$, then the value of $\angle BID$ is

त्रिभुज ABC के परिकेन्द्र I से BC पर लम्ब ID खींचा जाता है। यदि $\angle BAC = 60^\circ$ हो, तो $\angle BID$ का मान ज्ञात कीजिए ?

Options:

- 1) 60°
- 2) 80°
- 3) 75°
- 4) 45°

Correct Answer: 60°

Candidate Answer: 60°

Question 69.

If $\frac{\cos \alpha}{\cos \beta} = m$ and $\frac{\cos \alpha}{\sin \beta} = n$,
then the value of $(m^2 + n^2) \cos^2 \beta$ is

यदि $\frac{\cos \alpha}{\cos \beta} = m$ और $\frac{\cos \alpha}{\sin \beta} = n$ हो तो $(m^2 + n^2) \cos^2 \beta$ का मान ज्ञात कीजिए ?

Options:

- 1) n^2
- 2) m^2
- 3) mn

4) 1

Correct Answer: n^2

Candidate Answer: n^2

Question 70. The ratio of the weights of two spheres is 8 : 27 and the ratio of weights per 1 cc of materials of two is 8 : 1. The ratio of the radii of the spheres is

दो गोलकों के वजन का अनुपात 8 : 27 है और दोनों की सामग्री के प्रति 1 घन से.मी. वजन का अनुपात 8 : 1 है। गोलकों की त्रिज्या का अनुपात ज्ञात कीजिए ?

Options:

- 1) 2:3
- 2) 1:3
- 3) 3:1
- 4) 3:2

Correct Answer: 1:3

Candidate Answer: [NOT ANSWERED]

Question 71. On a ground, there is a vertical tower with a flagpole on its top. At a point 9 m away from the foot of the tower, the angles of elevation of the top and bottom of the flagpole are 60° and 30° respectively. The height of the flagpole is

भूमि पर किसी स्थान पर एक मीनार है जिसके शीर्ष पर एक ध्वज का खंभा लगा है। मीनार के तल से 9 मी. की दूरी पर किसी बिन्दु पर ध्वज के खम्भे के शीर्ष और तल के उन्नयन कोण क्रमशः 60° और 30° हैं। ध्वज के खम्भे की ऊँचाई बताइए ?

Options:

- 1) $5\sqrt{3}$ m
 $5\sqrt{3}$ मी.
- 2) $6\sqrt{3}$ m
 $6\sqrt{3}$ मी.
- 3) $6\sqrt{2}$ m
 $6\sqrt{2}$ मी.
- 4) $6\sqrt{5}$ m
 $6\sqrt{5}$ मी.

Correct Answer: $6\sqrt{3}$ m

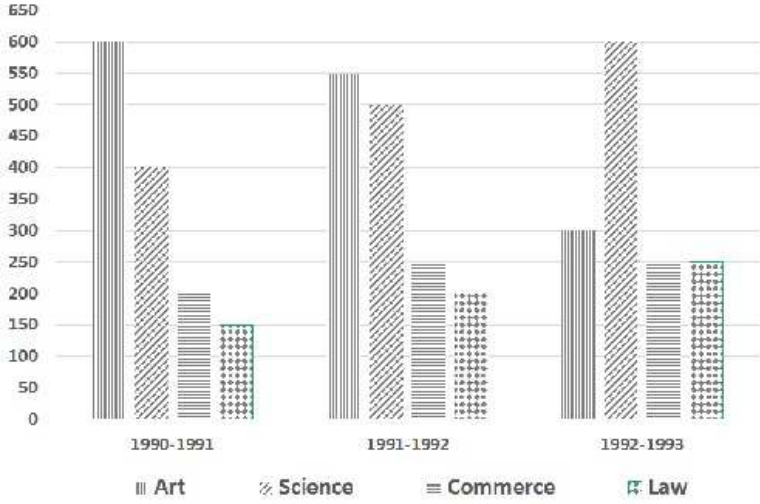
$6\sqrt{3}$ मी.

Candidate Answer: $6\sqrt{3}$ m

$6\sqrt{3}$ मी.

Question 72. Shown below is the multiple bar diagram depicting the changes in the students strength of a college in four faculties from 1990 -91 to 1992 - 93. (scale 1 cm = 100)

नीचे एक बहुल बार चार्ट दिया गया है। जिसमें किसी कालिज में चार संकायों में वर्ष 1990-1991 से 1992-1993 तक विद्यार्थियों की संख्या में होने वाले परिवर्तन दर्शाए गए हैं। (माप 1 से.मी. =100) बहुविध बार चार्ट का अध्ययन करें एवं प्रश्नों के उत्तर दीजिए।



A regular decrease in student's strength was in the faculty of

किस संकाय में विद्यार्थियों की संख्या में नियमित रूप से कमी हो रही है ?

Options:

1) Arts

कला

2) Science

विज्ञान

3) Commerce

वाणिज्य

4) Law


विधि

Correct Answer: Arts

कला

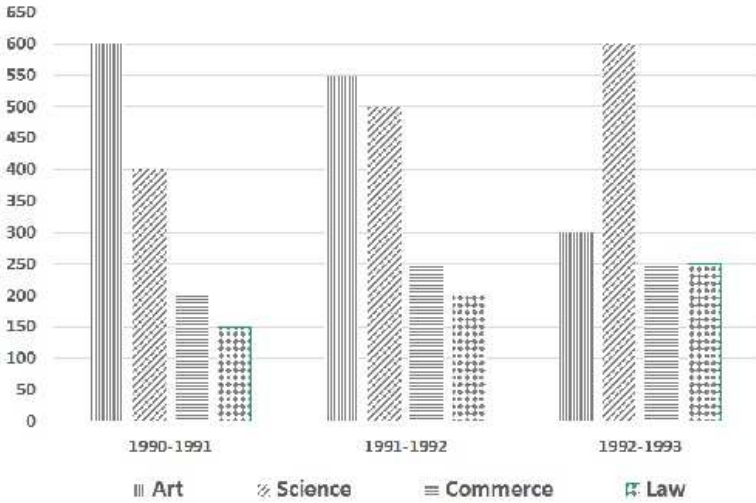
Candidate Answer: Arts

कला



Question 73. Shown below is the multiple bar diagram depicting the changes in the students strength of a college in four faculties from 1990 -91 to 1992 - 93. (scale 1 cm = 100)

नीचे एक बहुल बार चार्ट दिया गया है। जिसमें किसी कालिज में चार संकायों में वर्ष 1990-1991 से 1992-1993 तक विद्यार्थियों की संख्या में होने वाले परिवर्तन दर्शाए गए हैं। (माप 1 से.मी. =100) बहुविध बार चार्ट का अध्ययन करें एवं प्रश्नों के उत्तर दीजिए।



How much percent was the increase in science students in 1992 - 93 over 1990 - 91 ?

वर्ष 1990-1991 की तुलना में वर्ष 1992-1993 में विज्ञान के विद्यार्थियों की संख्या में कितने प्रतिशत वृद्धि हुई है ?

Options:

- 1) 50%
- 2) 150%
- 3) 66.6%

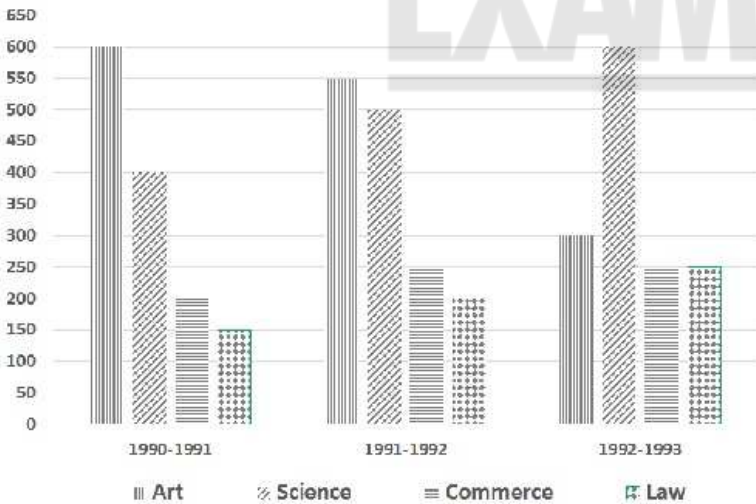
4) 75%

Correct Answer: 50%

Candidate Answer: 50%

Question 74. Shown below is the multiple bar diagram depicting the changes in the students strength of a college in four faculties from 1990 -91 to 1992 - 93. (scale 1 cm = 100)

नीचे एक बहुल बार चार्ट दिया गया है। जिसमें किसी कालिज में चार संकायों में वर्ष 1990-1991 से 1992-1993 तक विद्यार्थियों की संख्या में होने वाले परिवर्तन दर्शाए गए हैं। (माप 1 से.मी. =100) बहुविध बार चार्ट का अध्ययन करें एवं प्रश्नों के उत्तर दीजिए।



Ratio of the number of commerce students to the number of law students from 1990 - 91 to 1992 - 93 is

वर्ष 1990-1991 से 1992-1993 तक वाणिज्य के विद्यार्थियों का विधि के विद्यार्थियों से क्या अनुपात है ?

Options:

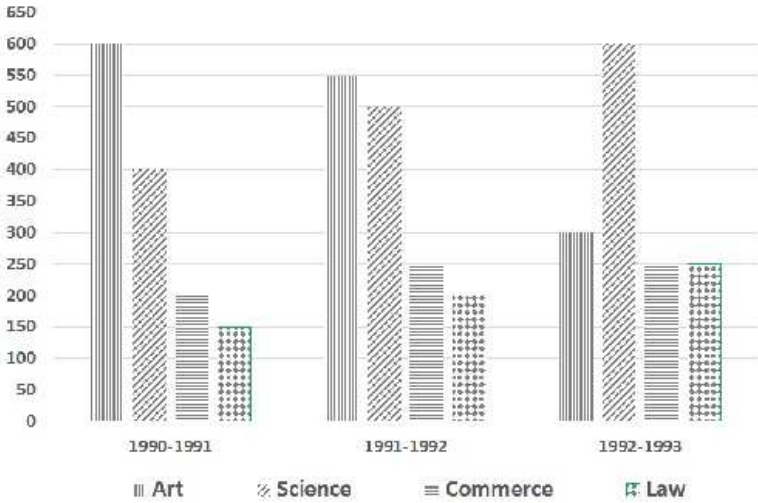
- 1) 6:7
- 2) 7:6
- 3) 14:1
- 4) 2:8

Correct Answer: 7:6

Candidate Answer: 7:6

Question 75. Shown below is the multiple bar diagram depicting the changes in the students strength of a college in four faculties from 1990 -91 to 1992 - 93. (scale 1 cm = 100)

नीचे एक बहुल बार चार्ट दिया गया है। जिसमें किसी कालिज में चार संकायों में वर्ष 1990-1991 से 1992-1993 तक विद्यार्थियों की संख्या में होने वाले परिवर्तन दर्शाए गए हैं। (माप 1 से.मी. =100) बहुविध बार चार्ट का अध्ययन करें एवं प्रश्नों के उत्तर दीजिए।



During which year the strength of arts faculty was minimum ?

किस वर्ष कला संकाय के विद्यार्थियों की संख्या न्यूनतम रही ?

Options:

- 1) 1990 - 91
- 2) 1991 - 92
- 3) 1992 - 93
- 4) 1993 - 94

Correct Answer: 1992 - 93

Candidate Answer: 1990 - 91

Question 76. In the following question, out of the four alternatives, choose the word which best expresses the meaning of the given word and click the button corresponding to it.

JUBILANT

Options:

- 1) SOMBRE
- 2) DEJECTED
- 3) JOCLULAR
- 4) REJOICING

Correct Answer: REJOICING

Candidate Answer: [NOT ANSWERED]

Question 77. In the following question, out of the four alternatives, choose the word which is opposite in meaning to the given word and click the button corresponding to it.

COURAGE

Options:

- 1) BRAVERY
- 2) WEAKNESS
- 3) COWARDICE
- 4) FEAR

Correct Answer: COWARDICE

Candidate Answer: COWARDICE

Question 78. Four words are given, out of which only one word is spelt correctly. Choose the correctly spelt word and click the button corresponding to it.

Options:

- 1) Commensurate
- 2) Commensarate
- 3) Commansurate
- 4) Comansurate

Correct Answer: Commensurate

Candidate Answer: Commensurate

Question 79. In the following questions, one part of the sentence may have an error. Find out which part of the sentence has an error and click the button corresponding to it. If the sentence is free from error, click the "No error" option.

He was not able to concentrate (A) / because of the continual music (B) / being played next door. (C) / No Error (D)

Options:

- 1) A
- 2) B
- 3) C
- 4) D

Correct Answer: B

Candidate Answer: [NOT ANSWERED]

Question 80. In the following questions, one part of the sentence may have an error. Find out which part of the sentence has an error and click the button corresponding to it. If the sentence is free from error, click the "No error" option.

Still (A) / waters (B) / run deep. (C) / No Error (D)

Options:

- 1) A
- 2) B
- 3) C
- 4) D

Correct Answer: D

Candidate Answer: B

Question 81. In the following questions, one part of the sentence may have an error. Find out which part of the sentence has an error and click the button corresponding to it. If the sentence is free from error, click the "No error" option.

The job is (A) / under the direct (B) / of Mrs Jones. (C) / No Error (D)

Options:

- 1) A
- 2) B
- 3) C
- 4) D

Correct Answer: B

Candidate Answer: [NOT ANSWERED]

Question 82. The sentences given with blanks are to be filled with an appropriate word(s). Four alternatives are suggested for each question. For each question, choose the correct alternative and click the button corresponding to it.

Pour the juice _____ the glass.

Options:

- 1) in
- 2) into
- 3) onto
- 4) on

Correct Answer: into

Candidate Answer: into

Question 83. The sentences given with blanks are to be filled with an appropriate word(s). Four alternatives are suggested for each question. For each question, choose the correct alternative and click the button corresponding to it.

I have been _____ this problem since noon.

Options:

- 1) working into
- 2) working on
- 3) working for
- 4) with after

Correct Answer: working on

Candidate Answer: working on

Question 84. The sentences given with blanks are to be filled with an appropriate word(s). Four alternatives are suggested for each question. For each question, choose the correct alternative and click the button corresponding to it.

Sushma has a deep _____ for drunkards.

Options:

- 1) hatred
- 2) hate
- 3) hated
- 4) hating

Correct Answer: hatred

Candidate Answer: hate

Question 85. In each of the questions, four alternatives are given for the Idiom/Phrase. Choose the alternative which best expresses the meaning of the Idiom/Phrase and click the button corresponding to it.

Couch potato

Options:

- 1) An old person who has old-fashioned ideas.
- 2) A person who prefers to watch television.
- 3) A person who does not seem very friendly.
- 4) Someone who stays calm and does not show their emotions.

Correct Answer: A person who prefers to watch television.

Candidate Answer: A person who prefers to watch television.

Question 86. In each of the questions, four alternatives are given for the Idiom/Phrase. Choose the alternative which best expresses the meaning of the Idiom/Phrase and click the button corresponding to it.

Carry the ball

Options:

- 1) Decorate the ball
- 2) Be in charge
- 3) Take the decision
- 4) Be the hostess

Correct Answer: Be in charge

Candidate Answer: Take the decision

Question 87. In each of the questions, four alternatives are given for the Idiom/Phrase. Choose the alternative which best expresses the meaning of the Idiom/Phrase and click the button corresponding to it.

Turned down

Options:

- 1) Subject
- 2) Object
- 3) Reject
- 4) Deject

Correct Answer: Reject

Candidate Answer: Reject

Question 88. Out of the four alternatives, choose the one which can be substituted for the given words/sentences and click the button corresponding to it.

One who copies from other writers

Options:

- 1) Pluralist
- 2) Imitator
- 3) Plagiarist
- 4) Copycat

Correct Answer: Plagiarist

Candidate Answer: Imitator

Question 89. Out of the four alternatives, choose the one which can be substituted for the given words/sentences and click the button corresponding to it.

Thing that can be felt or touched

Options:

- 1) Pandemic
- 2) Palpable
- 3) Paltry
- 4) Panchromatic

Correct Answer: Palpable

Candidate Answer: [NOT ANSWERED]

Question 90. Out of the four alternatives, choose the one which can be substituted for the given words/sentences and click the button corresponding to it.

The scientific study of elections

Options:

- 1) Pathology
- 2) Palaeontology
- 3) Psephology
- 4) Philology

Correct Answer: Psephology

Candidate Answer: Psephology

Question 91. A sentence/a part of the sentence is underlined. Four alternatives are given to the underlined part which will improve the sentence. Choose the correct alternative and click the button corresponding to it. In case no improvement is needed, click the button corresponding to "No improvement".

He enjoys to go on tours with his children.

Options:

- 1) to go for tours
- 2) going for tours
- 3) going on tours
- 4) No improvement

Correct Answer: going on tours

Candidate Answer: going on tours

Question 92. A sentence/a part of the sentence is underlined. Four alternatives are given to the underlined part which will improve the sentence. Choose the correct alternative and click the button corresponding to it. In case no improvement is needed, click the button corresponding to "No improvement".

Sita was cooking in the kitchen when her husband was ringing the bell.

Options:

- 1) would have been ringing
- 2) had rung
- 3) rang
- 4) No improvement

Correct Answer: rang

Candidate Answer: rang

Question 93.A sentence/a part of the sentence is underlined. Four alternatives are given to the underlined part which will improve the sentence. Choose the correct alternative and click the button corresponding to it. In case no improvement is needed, click the button corresponding to "No improvement".

If the room had been brighter, I would have been able to read for a while before bed time.

Options:

- 1) If the room was brighter
- 2) If the room are brighter
- 3) Had the room been brighter
- 4) No improvement

Correct Answer: Had the room been brighter

Candidate Answer: Had the room been brighter

Question 94.A sentence/a part of the sentence is underlined. Four alternatives are given to the underlined part which will improve the sentence. Choose the correct alternative and click the button corresponding to it. In case no improvement is needed, click the button corresponding to "No improvement".

Never such incidents have taken place on our campus.

Options:

- 1) have such incidents
- 2) such incidents will have
- 3) were such incidents
- 4) No improvement

Correct Answer: have such incidents

Candidate Answer: No improvement

Question 95.A sentence/a part of the sentence is underlined. Four alternatives are given to the underlined part which will improve the sentence. Choose the correct alternative and click the button corresponding to it. In case no improvement is needed, click the button corresponding to "No improvement".

My mother teach me to be a good human being.

Options:

- 1) taught
- 2) thought
- 3) talked
- 4) No improvement

Correct Answer: taught

Candidate Answer: taught

Question 96.A passage is given with 5 questions following it. Read the passage carefully and choose the best answer to each question out of the four alternatives and click the button corresponding to it.

A guest speaker was addressing the faculty and the students in the college auditorium. I had joined the faculty the year before, and was already drawing attention. I was 27, full of assumptions about myself, quick with a comment on everything, and expected people to pay attention to all that I had said.

I listened to the talk for the first five minutes. By the seventh, I was looking around to check if others were listening. By the tenth, I had glanced at my watch three times, and yawned once. After twenty minutes I was thoroughly bored, and telling myself that it was difficult to sit through such an insipid talk. I wanted to share some of my expert comments with my neighbour. But he was completely sold out to the speaker, and looked like it was the greatest day of his life. I was disgusted. I tried to catch a word or phrase from the talk, only to convince myself that this should be his last talk ever.

The one-hour talk took ages to end, and before the thanks were said, I jumped to my feet with a sigh of relief. My neighbour smiled at me and said, "The talk was wonderful, wasn't it?" I retorted, "It almost killed me with kindness".

What do you understand about the narrator from the description in the first paragraph?

Options:

- 1) He was a genius
- 2) He was knowledgeable
- 3) He was self conceited
- 4) He was charismatic

Correct Answer: He was self conceited

Candidate Answer: He was self conceited

Question 97. A passage is given with 5 questions following it. Read the passage carefully and choose the best answer to each question out of the four alternatives and click the button corresponding to it.

A guest speaker was addressing the faculty and the students in the college auditorium. I had joined the faculty the year before, and was already drawing attention. I was 27, full of assumptions about myself, quick with a comment on everything, and expected people to pay attention to all that I had said.

I listened to the talk for the first five minutes. By the seventh, I was looking around to check if others were listening. By the tenth, I had glanced at my watch three times, and yawned once. After twenty minutes I was thoroughly bored, and telling myself that it was difficult to sit through such an insipid talk. I wanted to share some of my expert comments with my neighbour. But he was completely sold out to the speaker, and looked like it was the greatest day of his life. I was disgusted. I tried to catch a word or phrase from the talk, only to convince myself that this should be his last talk ever.

The one-hour talk took ages to end, and before the thanks were said, I jumped to my feet with a sigh of relief. My neighbour smiled at me and said, "The talk was wonderful, wasn't it?" I retorted, "It almost killed me with kindness".

How did the narrator respond to the speech?

Options:

- 1) He was glued
- 2) He was bored
- 3) He did not mind it
- 4) He was engrossed in it

Correct Answer: He was bored

Candidate Answer: He was bored

Question 98. A passage is given with 5 questions following it. Read the passage carefully and choose the best answer to each question out of the four alternatives and click the button corresponding to it.

A guest speaker was addressing the faculty and the students in the college auditorium. I had joined the faculty the year before, and was already drawing attention. I was 27, full of assumptions about myself, quick with a comment on everything, and expected people to pay attention to all that I had said.

I listened to the talk for the first five minutes. By the seventh, I was looking around to check if others were listening. By the tenth, I had glanced at my watch three times, and yawned once. After twenty minutes I was thoroughly bored, and telling myself that it was difficult to sit through such an insipid talk. I wanted to share some of my expert comments with my neighbour. But he was completely sold out to the speaker, and looked like it was the greatest day of his life. I was disgusted. I tried to catch a word or phrase from the talk, only to convince myself that this should be his last talk ever.

The one-hour talk took ages to end, and before the thanks were said, I jumped to my feet with a sigh of relief. My neighbour smiled at me and said, "The talk was wonderful, wasn't it?" I retorted, "It almost killed me with kindness".

The narrator was disgusted because

Options:

- 1) His neighbour was engrossed in an insipid talk
- 2) The talk was boring
- 3) He could not understand it
- 4) He was impatient

Correct Answer: His neighbour was engrossed in an insipid talk

Candidate Answer: He was impatient

Question 99. A passage is given with 5 questions following it. Read the passage carefully and choose the best answer to each question out of the four alternatives and click the button corresponding to it.

A guest speaker was addressing the faculty and the students in the college auditorium. I had joined the faculty the year before, and was already drawing attention. I was 27, full of assumptions about myself, quick with a comment on everything, and expected people to pay attention to all that I had said.

I listened to the talk for the first five minutes. By the seventh, I was looking around to check if others were listening. By the tenth, I had glanced at my watch three times, and yawned once. After twenty minutes I was thoroughly bored, and telling myself that it was difficult to sit through such an insipid talk. I wanted to share some of my expert comments with my neighbour. But he was completely sold out to the speaker, and looked like it was the greatest day of his life. I was disgusted. I tried to catch a word or phrase from the talk, only to convince myself that this should be his last talk ever.

The one-hour talk took ages to end, and before the thanks were said, I jumped to my feet with a sigh of relief. My neighbour smiled at me and said, "The talk was wonderful, wasn't it?" I retorted, "It almost killed me with kindness".

When the speech ended the narrator was

Options:

- 1) Happy
- 2) Relieved
- 3) Exhausted
- 4) Disgusted

Correct Answer: Relieved

Candidate Answer: Relieved

Question 100. A passage is given with 5 questions following it. Read the passage carefully and choose the best answer to each question out of the four alternatives and click the button corresponding to it.

A guest speaker was addressing the faculty and the students in the college auditorium. I had joined the faculty the year before, and was already drawing attention. I was 27, full of assumptions about myself, quick with a comment on everything, and expected people to pay attention to all that I had said.

I listened to the talk for the first five minutes. By the seventh, I was looking around to check if others were listening. By the tenth, I had glanced at my watch three times, and yawned once. After twenty minutes I was thoroughly bored, and telling myself that it was difficult to sit through such an insipid talk. I wanted to share some of my expert comments with my neighbour. But he was completely sold out to the speaker, and looked like it was the greatest day of his life. I was disgusted. I tried to catch a word or phrase from the talk, only to convince myself that this should be his last talk ever.

The one-hour talk took ages to end, and before the thanks were said, I jumped to my feet with a sigh of relief. My neighbour smiled at me and said, "The talk was wonderful, wasn't it?" I retorted, "It almost killed me with kindness".

How long did the narrator listen to the speech without judgement?

Options:

- 1) Seven minutes
- 2) Ten minutes
- 3) Five minutes
- 4) Twenty minutes

Correct Answer: Five minutes

Candidate Answer: Five minutes

