



Staff Selection Commission
(Government Of India)

REGISTRATION NUMBER : 1403012219
EXAM DATE : 7-September-2016
EXAM NAME : SSC Examination 2016
TOTAL MARKS : 200

CANDIDATE NAME : AMANDEEP
EXAM START TIME : 10:00:00
EXAM DURATION : 01:15 Hrs
TOTAL NO OF QUESTIONS : 100

Question 1. Select the related word/letters/number from the given alternatives.

दिये गये विकल्पों में से संबंधित शब्द/अक्षरों/संख्या को चुनिए।

Bacteria : Microscope :: Moon : ?

जीवाणु : सूक्ष्मदर्शी : चन्द्रमा : ?

Options:

1) Night

रात्रि

2) Earth

पृथ्वी

3) Satellite

सेटेलाइट

4) Telescope

दूरदर्शी यंत्र

Correct Answer: Telescope

दूरदर्शी यंत्र

Candidate Answer: [NOT ANSWERED]

Question 2. Select the related word/letters/number from the given alternatives.

दिये गये विकल्पों में से संबंधित शब्द/अक्षरों/संख्या को चुनिए।

LNPR : TVXZ : NPRT : ?

Options:

1) FHJL

2) FLJH

3) HFLJ

4) JLHF

Correct Answer: FHJL

Candidate Answer: FHJL

Question 3. Select the related word/letters/number from the given alternatives.

दिये गये विकल्पों में से संबंधित शब्द/अक्षरों/संख्या को चुनिए।

27 : 125 : 64 : ?

Options:

1) 517

2) 162

3) 216

4) 273

Correct Answer: 216

Candidate Answer: 216

Question 4.

For the following questions

Find the odd word/letters/number pair from the given alternatives.

इस प्रश्न में दिए गए विकल्पों में से विषम शब्द/अक्षर/संख्या युग्म चुनिए ?

Options:

- 1) Novel
उपन्यास
- 2) Paper
कागज़
- 3) Pencil
पेन्सिल
- 4) Pen
कलम

Correct Answer: Novel

उपन्यास

Candidate Answer: Novel

उपन्यास

Question 5.

For the following questions

Find the odd word/letters/number pair from the given alternatives.

इस प्रश्न में दिए गए विकल्पों में से विषम शब्द/अक्षर/संख्या युग्म चुनिए ?

Options:

- 1) acDD
- 2) egHH
- 3) ikLL
- 4) QSTt

Correct Answer: QSTt

Candidate Answer: QSTt

Question 6.

For the following questions

Find the odd word/letters/number pair from the given alternatives.

इस प्रश्न में दिए गए विकल्पों में से विषम शब्द/अक्षर/संख्या युग्म चुनिए ?

Options:

- 1) 65 - 90
- 2) 73 - 97
- 3) 112 - 137
- 4) 162 - 187

Correct Answer: 73 - 97

Candidate Answer: 162 - 187

Question 7. Arrange the following words as per order in the dictionary

निम्नलिखित शब्दों को शब्दकोश में दिए गए क्रम के अनुसार लिखिए ?

a. Guarantee b. Group c. Grotesque d. Guard e. Groan

Options:

- 1) a, c, e, b, d
- 2) b, e, a, d, c
- 3) b, c, e, a, d
- 4) e, c, b, a, d

Correct Answer: e, c, b, a, d

Candidate Answer: e, c, b, a, d

Question 8. Which one set of letters when sequentially placed at the gaps in the given letter series shall complete it?

अक्षरों का कौन सा समूह खाली स्थानों पर क्रमवार रखने से दी गई अक्षर श्रृंखला को पूरा करता है ?

xy_kx_zk_yzk xyz__

Options:

1) zyxx

2) zyxxz

3) zkxyk

4) zxykx

Correct Answer: zyxx

Candidate Answer: zyxx

Question 9. Find the missing number in the series:

दी गई श्रृंखला में लुप्त संख्या ज्ञात कीजिए ?

219, 211, 204, 198, ?, 189

Options:

1) 189

2) 192

3) 193

4) 196

Correct Answer: 193

Candidate Answer: 193

Question 10. If M is the sister of Z, Z is the wife of P and P is the son of A, how Z relates to A?

अगर M, Z की बहन है और Z, P की पत्नी है। P, A का बेटा है, तो Z का A से क्या सम्बन्ध है ?

Options:

1) Daughter-in-law

पुत्र वधु

2) Daughter

पुत्री

3) Wife

पत्नी

4) Mother

माता

Correct Answer: Daughter-in-law

पुत्र वधु

Candidate Answer: Daughter-in-law

पुत्र वधु

Question 11. The sum of ages of 4 children born at intervals of 4 years each is 60. What is the age of the youngest child?

4 बच्चों की आयु का योग 60 वर्ष है और उनके जन्म में 4-4 वर्ष का अन्तर है। सबसे छोटे बच्चे की आयु बताइए ?

Options:

1) 7

2) 9

3) 10

4) 12

Correct Answer: 9

Candidate Answer: 12

Question 12. From the given alternative words, select the word which cannot be formed using the letters of the given word:

निम्नलिखित विकल्पों में से वह शब्द चुनिए जो दिए गए शब्द के अक्षरों का प्रयोग करके नहीं बनाया जा सकता :

ENVIRONMENT

Options:

1) OINTMENT

2) MENTOR

3) VENOM

4) TRIM

Correct Answer: OINTMENT

Candidate Answer: VENOM

Question 13. In a certain code CAMEL is written as MFNBD. How shall TIGER be written in that code?

अगर CAMEL को MFNBD लिखा जा सकता है तो TIGER को उस कोड में कैसे लिखा जायेगा ?

Options:

1) SFUJH

2) SFHJU

3) SFJUH

4) SHFJU

Correct Answer: SFHJU**Candidate Answer:** SFHJU

Question 14.If x stands for - , + means x , ÷ means + and - means ÷ , then what is the value of the given expression?

यदि x का अर्थ - , + का अर्थ x , ÷ का अर्थ + और - का अर्थ ÷ हो तो

$$175 - 25 \div 5 + 2 \times 3 + 10 = ?$$

Options:

1) 77

2) 160

3) 240

4) 2370

Correct Answer: 77**Candidate Answer:** [NOT ANSWERED]

Question 15.If $4 * 2 = 3$

and $8 * 4 = 3$,

then $21 * 7 = ?$

यदि $4 * 2 = 3$

और $8 * 4 = 3$,

तो $21 * 7 = ?$

Options:

1) 4

2) 3

3) 8

4) 16

Correct Answer: 4**Candidate Answer:** [NOT ANSWERED]

Question 16.Select the missing numbers from the given alternatives

दिये गये विकल्पों में से लुप्त संख्या चुनिए।

| | | |
|----|----|----|
| 17 | 11 | 19 |
| 12 | 13 | 16 |
| 25 | 4 | ? |

Options:

1) 9

2) 16

3) 25

4) 36

Correct Answer: 9**Candidate Answer:** 9

Question 17.A man walks 5 kilometre towards South and then turns to the right. After walking 3 kilometre, he turns to the left and walks 5 kilometre. Now in which direction is he from the starting point?

एक आदमी 5 किलोमीटर दक्षिण की ओर जाता है। फिर दाहिने घूमकर 3 किलोमीटर चलता है। वह बायें घूमकर 5 किलोमीटर चलता है। अब वह प्रारम्भिक बिंदु से किस दिशा में है?

Options:

1) West

पश्चिम

2) South

दक्षिण

3) North-East

उत्तर-पूर्व

4) South-West

दक्षिण-पश्चिम

Correct Answer: South-West

दक्षिण-पश्चिम

Candidate Answer: West

पश्चिम

Question 18. Consider the given statement/s to be true and decide which of the given conclusions/assumptions can definitely be drawn from the given statement.

Statements: Life means stresses and strains.

Stresses and strains have an adverse effect on life.

Conclusions: I. Life is not worth living.

II. One should avoid stresses and strains in life.

निम्नलिखित प्रश्न में एक या दो वक्तव्य दिये गये हैं, जिसके आगे दो निष्कर्ष/मान्यताएं, I और II निकाले गये हैं। आपको विचार करना है कि वक्तव्य सत्य है चाहे वह सामान्यतः शर्त तथ्यों से भिन्न प्रतीत होता हो। आपको निर्णय करना है कि दिए गए वक्तव्य में से कोन-सा निश्चित रूप से सही निष्कर्ष/मान्यता निकाला जा सकता है ?

कथन: जीवन का मतलब दबाव और तनाव है। दबाव और तनाव जीवन पर प्रतिकूल प्रभाव डालते हैं।

निष्कर्ष : I. जीवन जीने योग्य नहीं है। II. जीवन में तनाव और दबाव से बचना चाहिए।

Options:

1) Only conclusion I follows

केवल I निष्कर्ष सही है।

2) Only conclusion II follows

केवल II निष्कर्ष सही है।

3) Both conclusion I and conclusion II follow

I और II दोनों निष्कर्ष सही हैं।

4) Neither conclusion I nor conclusion II follows

ना तो I और ना ही II निष्कर्ष सही है।

Correct Answer: Only conclusion II follows

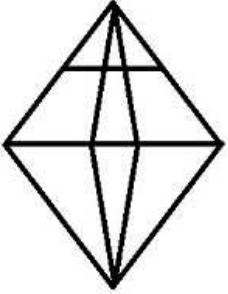
केवल II निष्कर्ष सही है।

Candidate Answer: Only conclusion II follows

केवल II निष्कर्ष सही है।

Question 19. How many triangles are there in this geometric figure?

चित्र में कितने त्रिभुज हैं ?



Options:

1) 12

2) 16

3) 18

4) 20

Correct Answer: 18

Candidate Answer: 12

Question 20. Which of the answer figures best indicates the relationship between:

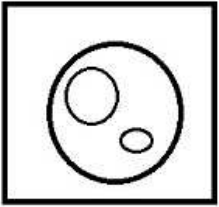
Doctors, Nurses, Hospital

कौन सा चित्र निम्नलिखित सम्बन्ध को सही दर्शाता है ?

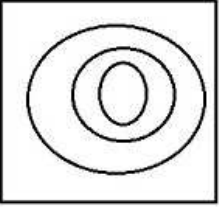
डॉक्टर , नर्स , अस्पताल

Options:

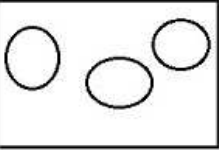
1)



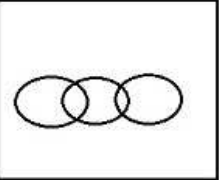
2)



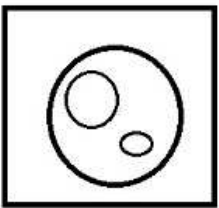
3)




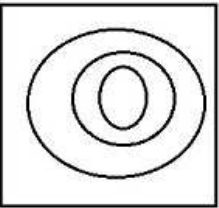
4)



Correct Answer:

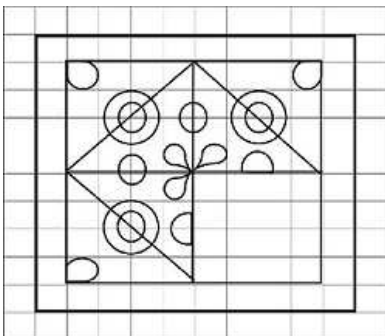


Candidate Answer:



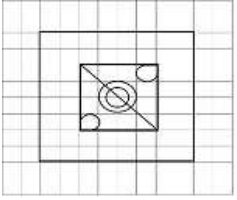
Question 21. Which answer figure will complete the pattern in the question figure?

इस प्रश्न में कौन सी उत्तर आकृति प्रश्न आकृति के प्रतिरूप को पूरा करती है ?

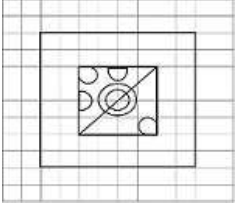


Options:

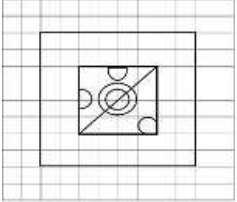
1)



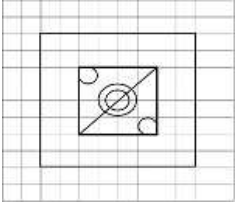
2)



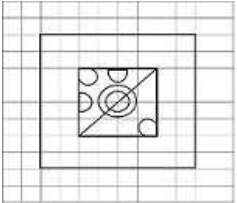
3)



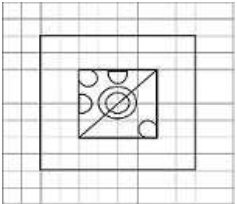
4)



Correct Answer:



Candidate Answer:



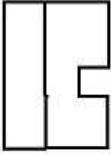
Question 22. From the given answer figures, select the one in which the question figure is hidden/embedded

दी गई उत्तर आकृतियों में से उसे चुनिए जिसमें प्रश्न आकृति निहित है।

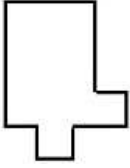


Options:

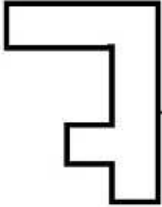
1)



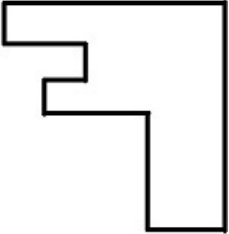
2)



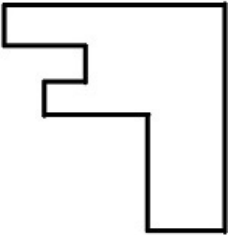
3)




4)



Correct Answer:

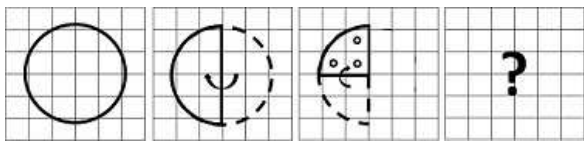


Candidate Answer: [NOT ANSWERED]



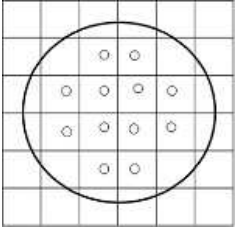
Question 23. A piece of paper is folded and cut as shown below in the question figures. From the given answer figures, indicate how it will appear when opened.

नीचे दर्शाये चित्र के अनुसार कागज को मोड़कर काटने तथा खोलने के बाद वह किस उत्तर आकृति जैसा दिखाई देगा ?

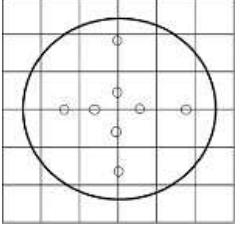


Options:

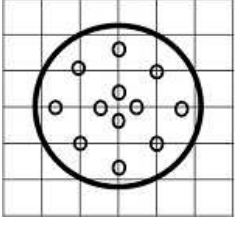
1)



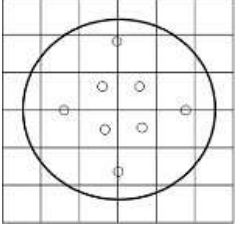
2)



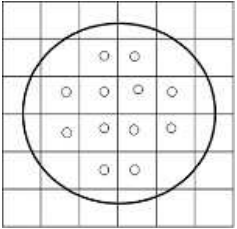
3)




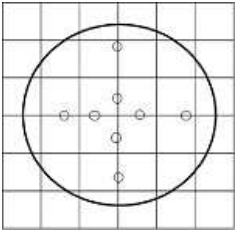
4)



Correct Answer:

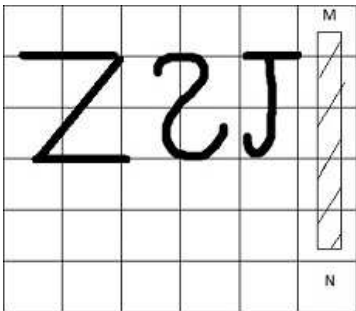


Candidate Answer:



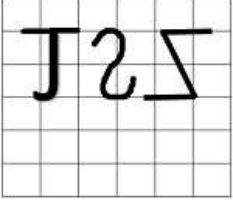
Question 24.If a mirror is placed on the line MN, then which of the answer figures is the right image of the given figure?

इस प्रश्न में यदि एक दर्पण को MN रेखा पर रखा जाये तो दी गई उत्तर आकृतियों में से कौन-सी आकृति प्रश्न आकृति का सही प्रतिबिम्ब होगी ?




Options:


1)



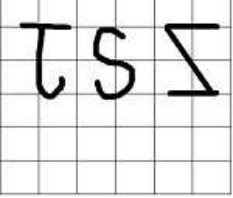
2)



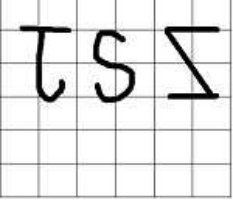
3)





4)



Correct Answer:



Candidate Answer:



Question 25. In the question, a word is represented by only one set of numbers as given in any one of the alternatives. The sets of numbers given in the alternatives are represented by two classes of alphabets as in two matrices given below. The columns and rows of Matrix I are numbered from 0 to 4 and that of Matrix II are numbered from 5 to 9. A letter from these matrices can be represented first by its row and next by its column, e.g., 'G' can be represented by 01 and 'P' can be represented by 10, 44, etc. Similarly you have to identify the set for the word 'BARK'

निम्नलिखित प्रश्न में विकल्पों में दिए गए संख्या-समूह, अक्षरों के दो वर्गों द्वारा दर्शाए गए हैं, जैसे कि नीचे दिए गए दो आव्यूहों में हैं। आव्यूह I के स्तम्भ और पंक्ति की संख्या 0 से 4 तक दी गई है, और आव्यूह II के 5 से 9 तक, इन आव्यूहों से एक अक्षर को पहले उसकी पंक्ति और बाद में स्तम्भ संख्या द्वारा दर्शाया जा सकता है। उदाहरण के लिए, G को 01 आदि द्वारा दर्शाया जा सकता है तथा P को 10, 44, आदि द्वारा दर्शाया जा सकता है। इसी तरह से आपको दिए शब्द 'BARK' के लिए समूह को पहचानना है।

| | | | | | | | | | | | |
|---|---|---|---|---|---|---|---|---|---|---|---|
| | 0 | 1 | 2 | 3 | 4 | | 5 | 6 | 7 | 8 | 9 |
| 0 | K | G | E | A | S | 5 | A | H | U | W | N |
| 1 | P | V | H | R | Y | 6 | Y | R | B | T | V |
| 2 | N | U | N | R | K | 7 | O | I | H | B | Q |
| 3 | W | S | B | O | J | 8 | V | O | E | I | S |
| 4 | T | U | A | I | P | 9 | E | T | K | W | P |

Options:

1) 32, 55, 69, 24

2) 32, 03, 66, 57

3) 67, 42, 66, 00

4) 23, 30, 66, 97

Correct Answer: 67, 42, 66, 00

Candidate Answer: 23, 30, 66, 97

Question 26. What is the maximum number of days of employment a rural poor would get under 'MGNREGA'?

मनरेगा (MGNREGA) के अन्तर्गत किसी ग्रामीण निर्धन व्यक्ति को अधिकतम कितने दिन तक रोजगार मिल सकता है ?

Options:

1) 180 days

180 दिन

2) 120 days

120 दिन

3) 100 days

100 दिन

4) 90 days

90 दिन

Correct Answer: 100 days

100 दिन

Candidate Answer: 100 days

100 दिन

Question 27. Scheduled bank is a bank which is

अनुसूचित बैंक एक ऐसा बैंक है जो

Options:

1) Nationalised

राष्ट्रीयकृत हो

2) Not Nationalised

राष्ट्रीयकृत न हो

3) Based in foreign Country

दूसरे देश में स्थापित हो

4) Included in the second schedule of RBI

भारतीय रिजर्व बैंक की दूसरी अनुसूची में शामिल हों

Correct Answer: Included in the second schedule of RBI

भारतीय रिजर्व बैंक की दूसरी अनुसूची में शामिल हों

Candidate Answer: Included in the second schedule of RBI

भारतीय रिजर्व बैंक की दूसरी अनुसूची में शामिल हों

Question 28. Black soil is also known by which of the following name ?

काली मिट्टी' और किस नाम से जानी जाती है ?

Options:

1) Khadar Soil

खादर मिट्टी

2) Bangar Soil

बंगर मिट्टी

3) Alluvial Soil

कछारी मिट्टी

4) Regur soil

रेगूर मिट्टी

Correct Answer: Regur soil

रेगूर मिट्टी

Candidate Answer: Bangar Soil

बंगर मिट्टी

Question 29. What is the name of the book written by Panini ?

पाणिनी द्वारा रचित पुस्तक का क्या नाम है ?

Options:

1) Mahabhashya

महाभाष्य

2) Mitakshara

मिताक्षर

3) Madhyamika Karika

माध्यमिका कारिका

4) Ashtadhyayi

अष्टाध्यायी

Correct Answer: Ashtadhyayi

अष्टाध्यायी

Candidate Answer: [NOT ANSWERED]

Question 30. Which dynasty was started by Khizr Khan ?

खिज़्र खां ने कौन-से राजवंश का प्रारंभ किया था?

Options:

1) The Sayyids

सैय्यद

2) The Lodhis

लोधी

3) The Rajputs

राजपूत

4) The Khiljis

खिलजी

Correct Answer: The Sayyids

सैय्यद

Candidate Answer: The Khiljis

खिलजी

Question 31. The instrument used for measuring air pressure is called

वायुदाब को मापने के यन्त्र को कहते हैं.

Options:

1) Anemometer

एनीमोमीटर

2) Barometer

बैरोमीटर

3) Hygrometer

हाइग्रोमीटर

4) Thermometer

थर्मोमीटर

Correct Answer: Barometer

बैरोमीटर

Candidate Answer: Barometer

बैरोमीटर

Question 32. Gustation refers to the sense of which of the following ?

स्वादन' से आशय निम्नलिखित में से किस से है ?

Options:

1) Smell

सूँघने

2) Hearing

सुनने

3) Tactile

स्पर्श से

4) Taste

स्वाद

Correct Answer: Taste

स्वाद

Candidate Answer: [NOT ANSWERED]

Question 33. Intensity of any wave is proportional to which of the following?

किसी तरंग की प्रबलता उसके, निम्नलिखित में से किसके अनुपात में होती है ?

Options:

1) amplitude

आयाम

2) Square of amplitude

आयाम का वर्ग

3) Square root of amplitude

आयाम का वर्गमूल

4) Cube of amplitude

आयाम का घन

Correct Answer: Square of amplitude

आयाम का वर्ग

Candidate Answer: [NOT ANSWERED]

Question 34. In the following list of devices which device is used in network layer?

यंत्रों को निम्नलिखित सूची में से नेटवर्क लेयर के लिए कौन-सा यन्त्र प्रयुक्त होता है ?

Options:

1) Repeaters

पुनरावर्तक (रिपीटर)

2) Router

राउटर

3) Application Gateway

एप्लिकेशन गेटवे

4) Switch

स्विच

Correct Answer: Router

राउटर

Candidate Answer: Router

राउटर

Question 35. NTPC is a Central Public Sector Enterprise in which sector?

एन.टी.पी.सी. एक केन्द्रीय लोक क्षेत्र उद्यम है जो निम्नलिखित में से किस क्षेत्र से सम्बन्धित है ?

Options:

1) Education

शिक्षा

2) Health

स्वास्थ्य

3) Power

विद्युत

4) Transport

परिवहन

Correct Answer: Power

विद्युत

Candidate Answer: Power

विद्युत

Question 36. Which State government has launched the Smart Village Programme, to improve public facilities in village?

किस राज्य सरकार ने ग्रामों में सार्वजनिक सुविधाओं में सुधार लाने के उद्देश्य से 'स्मार्ट विलेज प्रोग्राम' का शुरु किया ?

Options:

1) Maharashtra

महाराष्ट्र

2) Rajasthan

राजस्थान

3) Odisha

उड़ीसा

4) Gujarat

गुजरात

Correct Answer: Gujarat

गुजरात

Candidate Answer: Odisha

उड़ीसा

Question 37. Rodrigo "Digong" Duterte emerged winner in 2016 presidential elections of which country ?

किस देश के राष्ट्रपति के 2016 के चुनाव में रोड्रिगो 'डिगांग' ड्यूटेर्ट ने जीत हासिल की ?

Options:

- 1) Mexico
मैक्सिको
- 2) The Philippines
फिलिपिन्स
- 3) Spain
स्पेन
- 4) Singapore
सिंगापुर

Correct Answer: The Philippines
फिलिपिन्स

Candidate Answer: Spain
स्पेन

Question 38. What is commonly known as 'white plague'?

'श्वेत प्लेग' को आमतौर पर किस नाम से जाना जाता है ?

Options:

- 1) Typhoid
टाइफाइड

(आन्त्रज्वर)

- 2) Malaria
मलेरिया
- 3) Tuberculosis
क्षय रोग
- 4) Plague
प्लेग

Correct Answer: Tuberculosis
क्षय रोग

Candidate Answer: Plague
प्लेग

Question 39. What are gilt-edged securities?

'श्रेष्ठ प्रतिभूतियां' क्या हैं ?

Options:

- 1) Securities issued by the multinational companies.
बहुराष्ट्रीय कम्पनियों द्वारा जारी प्रतिभूतियां
- 2) Securities issued by the Government
सरकार द्वारा जारी प्रतिभूतियां
- 3) Securities issued by the private sector
निजी क्षेत्र द्वारा जारी प्रतिभूतियां
- 4) Securities issued by the joint venture companies
संयुक्त-उद्यम कम्पनियों द्वारा जारी प्रतिभूतियां

Correct Answer: Securities issued by the Government
सरकार द्वारा जारी प्रतिभूतियां

Candidate Answer: Securities issued by the joint venture companies
संयुक्त-उद्यम कम्पनियों द्वारा जारी प्रतिभूतियां

Question 40. In whose consultation does the President convene and prorogue all sessions of Parliament ?

राष्ट्रपति किसके परामर्श से संसद के सभी सत्र आयोजित और स्थगित करते हैं?

Options:


- 1) The Speaker
अध्यक्ष
- 2) The Prime Minister
प्रधान मन्त्री
- 3) The Prime Minister and the leader of the opposition in Lok Sabha
प्रधानमन्त्री और लोकसभा में विरोधी पक्ष के नेता
- 4) The Council of Ministers
मंत्री परिषद

Correct Answer: The Prime Minister
प्रधान मन्त्री

Candidate Answer: The Council of Ministers
मंत्री परिषद

Question 41. With which religion is Kaivalya associated?

'कैवल्य' कौन-से धर्म से सम्बन्धित है ?



Options:

1) Buddhism

बौद्ध

2) Jainism

जैन

3) Hinduism

हिन्दू

4) Sikhism

सिक्ख

Correct Answer: Jainism

जैन

Candidate Answer: Buddhism

बौद्ध

Question 42. Bauxite is used as raw material by which industry

किस उद्योग द्वारा 'बॉक्साइट' कच्चे माल के तौर पर इस्तेमाल किया जाता है ?

Options:

1) Aluminium

एल्युमिनियम

2) Iron

लोहा

3) Steel

स्टील (इस्पात)

4) Gold

सोना

Correct Answer: Aluminium

एल्युमिनियम

Candidate Answer: Steel

स्टील (इस्पात)

Question 43. The large collection of stars, dust and gas held together by gravitational attraction between components is known as

घटकों के बीच गुरुत्वाकर्षण द्वारा भारी मात्रा में एक साथ एकत्र हुए तारों, धूल और गैस को क्या कहते हैं ?

Options:

1) Cluster

गुच्छ

2) Atmosphere

वायुमण्डल

3) Galaxy

मंदाकिनी (आकाशगंगा)

4) Sun Family

सौरपरिवार

Correct Answer: Galaxy

मंदाकिनी (आकाशगंगा)

Candidate Answer: Atmosphere

वायुमण्डल

Question 44. Thermal electricity is generated by using which of these ?

निम्नलिखित में से किसका प्रयोग करके ऊष्मीय विद्युत पैदा की जाती है ?

Options:

1) Coal only

केवल कोयला

2) Coal and Natural Gas only

कोयला और प्राकृतिक गैस

3) Coal, Natural Gas and Petroleum

कोयला, प्राकृतिक गैस और पेट्रोलियम

4) None of these

इनमें से कोई नहीं

Correct Answer: Coal, Natural Gas and Petroleum

कोयला, प्राकृतिक गैस और पेट्रोलियम

Candidate Answer: Coal, Natural Gas and Petroleum

कोयला, प्राकृतिक गैस और पेट्रोलियम

Question 45. When iron rusts, its weight

जब लोहे में जंग लग जाता है तो उसका वजन

Options:

1) decreases

घट जाता है

2) increases

बढ़ जाता है

3) remains the same

वही रहता है

4) first increases and then decreases

पहले बढ़ता है और फिर घटता है

Correct Answer: increases

बढ़ जाता है

Candidate Answer: increases

बढ़ जाता है

Question 46. The driest location on Earth is in which country?

पृथ्वी पर सबसे शुष्क स्थान कौन-से देश में है ?

Options:

1) Kenya

केन्या

2) Chile

चिली

3) Congo

कांगो

4) Libya

लिबिया

Correct Answer: Chile

चिली

Candidate Answer: Chile

चिली

Question 47. Which leader of British Labour Party was recently elected the first Muslim Mayor of London?

ब्रिटिश लेबर पार्टी के कौन से नेता को हाल ही में लन्दन का प्रथम मुस्लिम मेयर चुना गया ?

Options:

1) Sadiq Khan

सादिक खान

2) Ataulah Khan

अताउल्ला खान

3) Firdaus Zaidi

फिरदौस ज़ैदी

4) Karim Shaikh

करीम शेख

Correct Answer: Sadiq Khan

सादिक खान

Candidate Answer: Sadiq Khan

सादिक खान

Question 48. Lady Ratan Tata Trophy' is related to which game?

लेडी रतन टाटा ट्रॉफी' किस खेल से सम्बंधित है ?

Options:

1) Basketball

बास्केटबॉल

2) Hockey

हॉकी

3) Kho-Kho

खो-खो

4) Cricket

क्रिकेट

Correct Answer: Hockey

हॉकी

Candidate Answer: Basketball

बास्केटबॉल

Question 49. Which instrument is used for measuring humidity of atmosphere?

वायुमण्डल में आर्द्रता मापने के लिए प्रयुक्त यन्त्र को क्या कहते हैं ?

Options:

- 1) Barometer
बैरोमीटर
- 2) Anemometer
एनीमोमीटर
- 3) Thermometer
थर्मामीटर
- 4) Hygrometer
हाइग्रोमीटर

Correct Answer: Hygrometer

हाइग्रोमीटर

Candidate Answer: Hygrometer

हाइग्रोमीटर

Question 50. Pankaj Advani is associated with which sport?

पंकज आडवाणी का नाम किस खेल से जुड़ा है ?

Options:

- 1) Billiards
बिलियर्ड्स
- 2) Boxing
बॉक्सिंग
- 3) Cricket
क्रिकेट
- 4) Badminton
बैडमिन्टन

Correct Answer: Billiards

बिलियर्ड्स

Candidate Answer: Billiards

बिलियर्ड्स

Question 51. Find the least number which must be subtracted from 18265 to make it a perfect square

वह न्यूनतम संख्या ज्ञात कीजिए जो 18265 से घटाये जाने पर और उसे पूर्ण वर्ग बना दे।

Options:

- 1) 30
- 2) 38
- 3) 40
- 4) 45

Correct Answer: 40

Candidate Answer: 40

Question 52. A and B together can do a piece of work in 36 days, B and C together can do it in 24 days. A and C together can do it in 18 days. The three working together can finish the work in

A और B मिलकर किसी काम को 36 दिन में कर सकते हैं, B और C मिलकर उसे 24 दिनों में कर सकते हैं। A और C मिलकर उसे 18 दिन में कर सकते हैं। तीनों मिलकर काम करें तो उसे कितने दिन में पूरा करेंगे ?

Options:

- 1) 8 days
8 दिन
- 2) 16 days
16 दिन
- 3) 30 days
30 दिन
- 4) 32 days
32 दिन

Correct Answer: 16 days

16 दिन

Candidate Answer: 8 days

8 दिन

Question 53. Two adjacent sides of a parallelogram are 21 cms and 20 cms. The diagonal joining the end points of these two sides is 29 cms. The area of the parallelogram (in sq.cms) is

एक समांतर चतुर्भुज की दो आसन्न भुजाएँ 21 से.मी. और 20 से.मी. की हैं। इन दोनों भुजाओं के सिरों को जोड़ने वाला विकर्ण 29 से.मी. है। समांतर चतुर्भुज का क्षेत्रफल कितना (वर्ग से.मी.) होगा ?

Options:

1) 240

2) 120

3) 210

4) 420

Correct Answer: 420

Candidate Answer: 210

Question 54.A dealer marks his goods 20% above cost price. He then allows some discount on it and makes a profit of 8%. The rate of discount is

एक विक्रेता अपने सामान पर लागत मूल्य से 20% अधिक मूल्य अंकित करता है। उस पर वह कुछ छूट देता है और 8% का लाभ कमाता है। छूट की दर क्या है ?

Options:

1) 4%

2) 6%

3) 10%

4) 12%

Correct Answer: 10%

Candidate Answer: [NOT ANSWERED]

Question 55.Sum of two numbers is thrice their difference. Their ratio is

दो संख्याओं का योग उनके अंतर से तिगुना है। उनका अनुपात क्या है ?

Options:

1) 1:2

2) 2:1

3) 3:1

4) 1:3

Correct Answer: 2:1

Candidate Answer: 2:1

Question 56.The average age of 36 students in a group is 14 years. When the teacher's age is included in it, the average increases by one. The teacher's age in years is

36 छात्रों के एक समूह की औसत आयु 14 वर्ष है। जब उसमें शिक्षक की आयु शामिल कर दी जाती है तो औसत एक बढ़ जाता है। शिक्षक की आयु कितने वर्ष है ?

Options:

1) 31

2) 51

3) 36

4) 50

Correct Answer: 51

Candidate Answer: 36

Question 57.A dishonest dealer professes to sell his goods at cost price but uses a weight of 875 gms for the kilogram weight. His gain in percentage is

एक बेईमान विक्रेता अपना सामान लागत मूल्य पर बेचने का दावा करता है लेकिन किलोग्राम वजन के बदले में 875 ग्राम के वजन (बांट) का इस्तेमाल करता है। उसका लाभ प्रतिशत कितना होगा ?

Options:

1) 17%

2)

$14\frac{5}{7}\%$

3)

$14\frac{2}{7}\%$

4) 14%

Correct Answer:

$14\frac{2}{7}\%$

Candidate Answer:

$14\frac{2}{7}\%$

Question 58. A's salary is 50% more than that of B. Then B's salary is less than that of A by

A का वेतन B के वेतन से 50% अधिक है तो B का वेतन A से कितना कम है ?

Options:

1) 50%

2)

$33\frac{1}{3}\%$

3)

$33\frac{1}{4}\%$

4)

$44\frac{1}{2}\%$

Correct Answer:

$33\frac{1}{3}\%$

Candidate Answer: 50%

Question 59. Speed of a boat along and against the current are 14 kms/hr and 8 kms/hr respectively. The speed of the current is

एक नौका की गति धारा के साथ और प्रतिकूल दिशा में क्रमशः 14 कि.मी./घण्टा और 8 कि.मी./घण्टा है। धारा की गति कितनी है ?

Options:

1) 11 kms/hr

11 कि.मी./घंटा

2) 6 kms/hr

6 कि.मी./घंटा

3) 5.5 kms/hr

5.5 कि.मी./घंटा

4) 3 kms/hr

3 कि.मी./घंटा

Correct Answer: 3 kms/hr

3 कि.मी./घंटा

Candidate Answer: [NOT ANSWERED]

Question 60. If the simple interest on Rs. 1 for 1 month is 1 paisa, then the rate percent per annum will be

यदि Rs. 1 पर 1 माह का साधारण ब्याज 1 पैसा है, तो वार्षिक दर प्रतिशत कितना होगा ?

Options:

1) 10%

2) 8%

3) 12%

4) 6%

Correct Answer: 12%

Candidate Answer: 8%

Question 61. If $a/b + b/a = 1$, then the value of $a^3 + b^3$ will be

यदि $a/b + b/a = 1$, तो $a^3 + b^3$ कितना होगा ?

Options:

1) 1

2) 0

3) -1

4) 2

Correct Answer: 0

Candidate Answer: 2

Question 62. If $p = 99$, then the value of $p(p^2+3p+3)$ will be

यदि $p = 99$ तो $p(p^2+3p+3)$ का मान क्या होगा ?

Options:

- 1) 999999
- 2) 1000000
- 3) 1000001
- 4) 999998

Correct Answer: 999999

Candidate Answer: 1000000

Question 63.If $a-b=1$ and $a^3-b^3 = 61$, then the value of ab will be

यदि $a-b=1$ और $a^3-b^3 = 61$, तो ab का मान क्या होगा ?

Options:

- 1) -20
- 2) 20
- 3) 30
- 4) 60

Correct Answer: 20

Candidate Answer: 20

Question 64.

If $\frac{x}{a+b} + 1 = \frac{x}{a-b} + \frac{a-b}{a+b}$, then x is equal to

यदि $\frac{x}{a+b} + 1 = \frac{x}{a-b} + \frac{a-b}{a+b}$, तो x किसके बराबर है ?

Options:

- 1) $2a-b$
- 2) $a+b$
- 3) $a-b$
- 4) $2a+b$

Correct Answer: $a-b$

Candidate Answer: [NOT ANSWERED]

Question 65.The point where the 3 medians of a triangle meet is called

उस बिन्दु को क्या कहते हैं जिस पर एक त्रिभुज के तीन मीडियन मिलते हैं ?

Options:

- 1) centroid
केन्द्रक
- 2) Incentre
अंतकेन्द्र
- 3) Circumcentre
परिकेन्द्र
- 4) orthocentre
लंबकेन्द्र

Correct Answer: centroid

केन्द्रक

Candidate Answer: centroid

केन्द्रक

Question 66. ΔABC a right angled triangle has $\angle B = 90^\circ$ and AC is hypotenuse. D is its circumcentre and $AB = 3$ cms, $BC = 4$ cms. The value of BD is

ΔABC एक समकोणीय त्रिभुज है, इसमें $\angle B = 90^\circ$ और AC कर्ण है। D उसका परिकेन्द्र है और $AB = 3$ से.मी., $BC = 4$ से.मी. है, तो BD का मान क्या है ?

Options:

- 1) 3cms
3 से.मी.
- 2) 4 cms
4 से.मी.
- 3) 2.5 cms
2.5 से.मी.
- 4) 5.5 cms
5.5 से.मी.

Correct Answer: 2.5 cms

2.5 से.मी.

Candidate Answer: 2.5 cms

2.5 से.मी.

Question 67. ΔABC is an equilateral triangle and D, E are midpoints of AB and BC respectively. Then the area of ΔABC : the area of the trapezium ADEC is

ΔABC एक समबाहु त्रिभुज है और D, E क्रमशः AB और BC के मध्य बिंदु हैं। तो ΔABC के क्षेत्रफल व समलम्ब ADEC के क्षेत्रफल का अनुपात कितना होगा ?

Options:

1) 5:3

2) 4:1

3) 8:5

4) 4:3

Correct Answer: 4:3

Candidate Answer: 4:3

Question 68.

In an isosceles triangle ABC, $AB = AC$, $XY \parallel BC$. If $\angle A = 30^\circ$, then $\angle BXY =$

एक समद्विभुज त्रिभुज ABC में, $AB = AC$, $XY \parallel BC$, यदि $\angle A = 30^\circ$, तो $\angle BXY$ कितना होगा ?

Options:

1) 75°

2) 30°

3) 150°

4) 105°

Correct Answer: 105°

Candidate Answer: 75°

Question 69.

The value of $\sec^2 17^\circ - \frac{1}{\tan^2 73^\circ} - \sin 17^\circ \sec 73^\circ$ is

$\sec^2 17^\circ - \frac{1}{\tan^2 73^\circ} - \sin 17^\circ \sec 73^\circ$ का मान क्या है ?

Options:

1) 1

2) 0

3) -1

4) 2

Correct Answer: 0

Candidate Answer: -1

Question 70. If $x = a \cos \theta \cos \phi$, $y = a \cos \theta \sin \phi$ and $z = a \sin \theta$, then the value of $x^2 + y^2 + z^2$ is

यदि $x = a \cos \theta \cos \phi$, $y = a \cos \theta \sin \phi$ और $z = a \sin \theta$ हो तो $x^2 + y^2 + z^2$ का मान क्या है ?

Options:

1) $2a^2$


2) $4a^2$

3) $9a^2$

4) a^2

Correct Answer: a^2

Candidate Answer: $2a^2$



Question 71. A 1.6 m tall observer is 45 meters away from a tower. The angle of elevation from his eye to the top of the tower is 30° , then the height of the tower in meters is

(Take $\sqrt{3} = 1.732$)

1.6 मी. लम्बा एक प्रेक्षक किसी टॉवर से 45 मी. दूर है। उसकी आँख से टॉवर के शीर्ष तक उन्नयन कोण 30° है। टॉवर की ऊँचाई कितने मी. होगी।

(माना $\sqrt{3} = 1.732$)

Options:

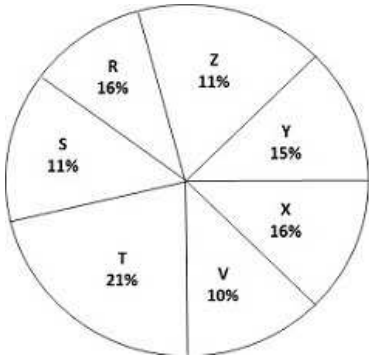
- 1) 25.98
- 2) 26.58
- 3) 27.58
- 4) 27.98

Correct Answer: 27.58

Candidate Answer: 27.98

Question 72. The following pie chart shows proportion of population of seven villages in 2009. Study the pie chart and answer the questions that follows :

निम्नलिखित पाई-चार्ट में 2009 में सात गाँवों की आबादी का अनुपात दर्शाया गया है। पाई-चार्ट का अध्ययन कीजिए और निम्नलिखित प्रश्नों का उत्तर दीजिए।



| Village | % of population Below Povertyline |
|---------|-----------------------------------|
| x | 38 |
| Y | 52 |
| Z | 42 |
| R | 51 |
| S | 49 |
| T | 46 |
| V | 58 |

If the below poverty line population of the village 'X' is 12160, then the population of village 'S' is

यदि गाँव 'X' की गरीबी रेखा से नीचे की आबादी 12160 है तो गाँव 'S' की आबादी कितनी होगी ?

Options:

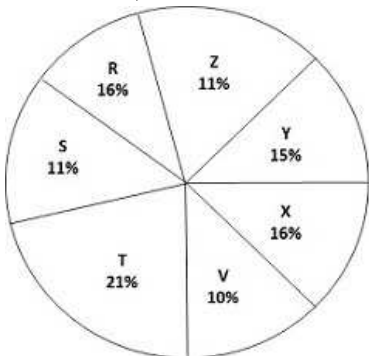
- 1) 18500
- 2) 20500
- 3) 22000
- 4) 20000

Correct Answer: 22000

Candidate Answer: [NOT ANSWERED]

Question 73. The following pie chart shows proportion of population of seven villages in 2009. Study the pie chart and answer the questions that follows :

निम्नलिखित पाई-चार्ट में 2009 में सात गाँवों की आबादी का अनुपात दर्शाया गया है। पाई-चार्ट का अध्ययन कीजिए और निम्नलिखित प्रश्नों का उत्तर दीजिए।



| Village | % of population Below Povertyline |
|---------|-----------------------------------|
| x | 38 |
| Y | 52 |
| Z | 42 |
| R | 51 |
| S | 49 |
| T | 46 |
| V | 58 |

The ratio of the below poverty line population of village 'T' to that of the below poverty line population of village 'Z' is

गाँव 'T' की गरीबी रेखा से नीचे की आबादी तथा गाँव 'Z' की गरीबी रेखा से नीचे की आबादी का अनुपात कितना है ?

Options:

1) 11:23

2) 13:11

3) 23:11

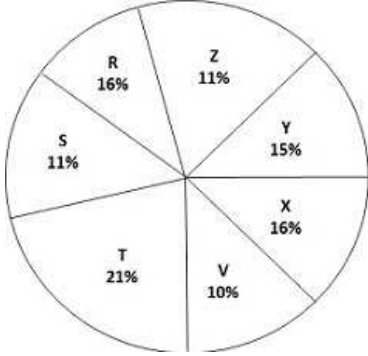
4) 11:13

Correct Answer: 23:11

Candidate Answer: [NOT ANSWERED]

Question 74. The following pie chart shows proportion of population of seven villages in 2009. Study the pie chart and answer the questions that follows :

निम्नलिखित पाई-चार्ट में 2009 में सात गाँवों की आबादी का अनुपात दर्शाया गया है। पाई-चार्ट का अध्ययन कीजिए और निम्नलिखित प्रश्नों का उत्तर दीजिए।



| Village | % of population Below Povertyline |
|---------|-----------------------------------|
| X | 38 |
| Y | 52 |
| Z | 42 |
| R | 51 |
| S | 49 |
| T | 46 |
| V | 58 |

If the population of the village 'R' is 32000, then the below poverty line population of village 'Y' is

यदि गाँव 'R' की आबादी 32000 है, तो गाँव 'Y' की गरीबी रेखा से नीचे की आबादी कितनी है ?

Options:

1) 14100

2) 15600

3) 16500

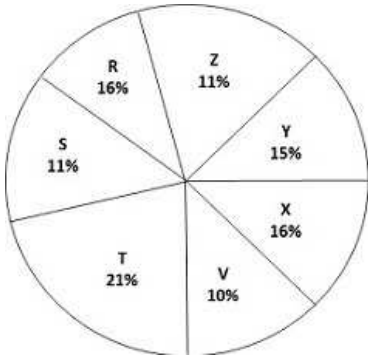
4) 17000

Correct Answer: 15600

Candidate Answer: [NOT ANSWERED]

Question 75. The following pie chart shows proportion of population of seven villages in 2009. Study the pie chart and answer the questions that follows :

निम्नलिखित पाई-चार्ट में 2009 में सात गाँवों की आबादी का अनुपात दर्शाया गया है। पाई-चार्ट का अध्ययन कीजिए और निम्नलिखित प्रश्नों का उत्तर दीजिए।



| Village | % of population Below Povertyline |
|---------|-----------------------------------|
| X | 38 |
| Y | 52 |
| Z | 42 |
| R | 51 |
| S | 49 |
| T | 46 |
| V | 58 |

In 2010, the population of 'Y' and 'V' increases by 10% each and the percentage of population below poverty line remains unchanged for all the villages. If in 2009, the population of village Y was 30,000, then the below poverty line population of village 'V' in 2010 is _____

2010 में 'Y' और 'V' गाँवों की आबादी 10% बढ़ जाती है और सभी गाँवों की गरीबी रेखा से नीचे की आबादी का प्रतिशत अपरिवर्तित रहता है यदि 2009 में गाँव 'Y' की आबादी 30000 थी, तो 2010 में गाँव 'V' की गरीबी रेखा से नीचे की आबादी कितनी है?

Options:

1) 11250

2) 12760

3) 13140

4) 13780

Correct Answer: 12760

Candidate Answer: [NOT ANSWERED]

Question 76. In the following question, out of the four alternatives, choose the word which best expresses the meaning of the given word and click the button corresponding to it.

PALLID

Options:

- 1) FRIENDLY
- 2) PALE
- 3) WORTHLESS
- 4) COMFORTING

Correct Answer: PALE

Candidate Answer: WORTHLESS

Question 77. In the following question, out of the four alternatives, choose the word which is opposite in meaning to the given word and click the button corresponding to it.

INTANGIBLE

Options:

- 1) ETHEREAL
- 2) CONCRETE
- 3) INSUBSTANTIAL
- 4) ABSTRACT

Correct Answer: CONCRETE

Candidate Answer: CONCRETE

Question 78. Four words are given, out of which only one word is spelt correctly. Choose the correctly spelt word and click the button corresponding to it.

Options:

- 1) Pontifical
- 2) Pontiffical
- 3) Pontifecal
- 4) Pontificol

Correct Answer: Pontifical

Candidate Answer: Pontiffical

Question 79. In the following questions, one part of the sentence may have an error. Find out which part of the sentence has an error and click the button corresponding to it. If the sentence is free from error, click the "No error" option.

I always enjoy (A)/ to read (B)/ books (C)/ No Error (D)

Options:

- 1) A
- 2) B
- 3) C
- 4) D

Correct Answer: B

Candidate Answer: B

Question 80. In the following questions, one part of the sentence may have an error. Find out which part of the sentence has an error and click the button corresponding to it. If the sentence is free from error, click the "No error" option.

Variety (A)/ is (B)/ spice of life (C)/ No Error (D)

Options:

- 1) A
- 2) B
- 3) C
- 4) D

Correct Answer: C

Candidate Answer: C

Question 81. In the following questions, one part of the sentence may have an error. Find out which part of the sentence has an error and click the button corresponding to it. If the sentence is free from error, click the "No error" option.

Neither of the scout leaders know (A)/ how to trap wild animals (B)/ or how to prepare them for mounting (C)/ No Error (D)

Options:

- 1) A
- 2) B
- 3) C
- 4) D

Correct Answer: A

Candidate Answer: C

Question 82. The sentences given with blanks are to be filled with an appropriate word(s). Four alternatives are suggested for each question. For each question, choose the correct alternative and click the button corresponding to it.

We can _____ see anything in the dim light.

Options:

- 1) badly
- 2) scarcely
- 3) fairly
- 4) rather

Correct Answer: scarcely

Candidate Answer: rather

Question 83.The sentences given with blanks are to be filled with an appropriate word(s). Four alternatives are suggested for each question. For each question, choose the correct alternative and click the button corresponding to it.

Few countries can _____ India in variety, colour and the richness of dance forms.

Options:

- 1) compare
- 2) rival
- 3) perform
- 4) prevail

Correct Answer: rival

Candidate Answer: rival

Question 84.The sentences given with blanks are to be filled with an appropriate word(s). Four alternatives are suggested for each question. For each question, choose the correct alternative and click the button corresponding to it.

The scheme allows students from different countries to communicate _____.

Options:

- 1) each other
- 2) with each others
- 3) themselves
- 4) with one another

Correct Answer: with one another

Candidate Answer: themselves

Question 85.In each of the questions, four alternatives are given for the Idiom/Phrase. Choose the alternative which best expresses the meaning of the Idiom/Phrase and click the button corresponding to it.

Straw in the wind

Options:

- 1) A light-weight object
- 2) A lucky charm
- 3) A game that kids play
- 4) An indication of what might happen

Correct Answer: An indication of what might happen

Candidate Answer: An indication of what might happen

Question 86.In each of the questions, four alternatives are given for the Idiom/Phrase. Choose the alternative which best expresses the meaning of the Idiom/Phrase and click the button corresponding to it.

Face the music

Options:

- 1) Be applauded
- 2) Be ridiculed
- 3) Be punished
- 4) Be dismissed

Correct Answer: Be punished

Candidate Answer: Be ridiculed

Question 87.In each of the questions, four alternatives are given for the Idiom/Phrase. Choose the alternative which best expresses the meaning of the Idiom/Phrase and click the button corresponding to it.

Curry favour

Options:

- 1) Seek impartial judgement
- 2) Seek favourable attention
- 3) Prepare a dish
- 4) Attract attention

Correct Answer: Seek favourable attention

Candidate Answer: Attract attention

Question 88.Out of the four alternatives, choose the one which can be substituted for the given words/sentences and click the button corresponding to it.

A brief or short stay at a place

Options:

- 1) Solitude
- 2) Soiree
- 3) Sojourn
- 4) Solistice

Correct Answer: Sojourn

Candidate Answer: Solistice

Question 89.Out of the four alternatives, choose the one which can be substituted for the given words/sentences and click the button corresponding to it.

That which can be believed

Options:

- 1) Miraculous
- 2) Creditable
- 3) Credible
- 4) Gullible

Correct Answer: Credible

Candidate Answer: Miraculous

Question 90. Out of the four alternatives, choose the one which can be substituted for the given words/sentences and click the button corresponding to it.

One who is indifferent to pain or pleasure

Options:

- 1) Eccentric
- 2) Philosopher
- 3) Fatalist
- 4) Stoic

Correct Answer: Stoic

Candidate Answer: Philosopher

Question 91. A sentence/a part of the sentence is underlined. Four alternatives are given to the underlined part which will improve the sentence. Choose the correct alternative and click the button corresponding to it. In case no improvement is needed, click the button corresponding to "No improvement".

Knowing that the area was prone to earthquakes, all the buildings were reinforced with additional concrete.

Options:

- 1) On being prone to earthquakes,
- 2) Having been knowing that the area was prone to earthquakes,
- 3) Since the area was known to be prone to earthquakes,
- 4) No improvement

Correct Answer: Since the area was known to be prone to earthquakes,

Candidate Answer: [NOT ANSWERED]

Question 92. A sentence/a part of the sentence is underlined. Four alternatives are given to the underlined part which will improve the sentence. Choose the correct alternative and click the button corresponding to it. In case no improvement is needed, click the button corresponding to "No improvement".

I will not buy some mangoes.

Options:

- 1) a little
- 2) much
- 3) any
- 4) No improvement

Correct Answer: any

Candidate Answer: No improvement

Question 93. A sentence/a part of the sentence is underlined. Four alternatives are given to the underlined part which will improve the sentence. Choose the correct alternative and click the button corresponding to it. In case no improvement is needed, click the button corresponding to "No improvement".

He would surely assist me if I had requested him to do so.

Options:

- 1) would surely assisted me
- 2) would have surely assisted me
- 3) will have surely assisted me
- 4) No improvement

Correct Answer: would have surely assisted me

Candidate Answer: would have surely assisted me

Question 94. A sentence/a part of the sentence is underlined. Four alternatives are given to the underlined part which will improve the sentence. Choose the correct alternative and click the button corresponding to it. In case no improvement is needed, click the button corresponding to "No improvement".

The alarming report of the plane crash left everyone in a state of shock.

Options:

- 1) alarmed report
- 2) alarmed reporting
- 3) reported alarm
- 4) No improvement

Correct Answer: No improvement

Candidate Answer: reported alarm

Question 95. A sentence/a part of the sentence is underlined. Four alternatives are given to the underlined part which will improve the sentence. Choose the correct alternative and click the button corresponding to it. In case no improvement is needed, click the button corresponding to "No improvement".

We were not the wiser after hearing the explanation

Options:

- 1) none
- 2) neither
- 3) nevertheless
- 4) No improvement

Correct Answer: none

Candidate Answer: [NOT ANSWERED]

Question 96. A passage is given with 5 questions following it. Read the passage carefully and choose the best answer to each question out of the four alternatives and click the button corresponding to it.

Another marvel on the far side of the lake was a little farm that felt like a secret in the city. Some of the gaunt Karnataka labourers even looked away when children came to dig and eat. But the greatest pleasure, this side of the lake, was the jamun tree. A few months back, Kalu and Sunil had a feast in the branches, shaking down a few berries for Mirchi.

That's when they came to know the second-coolest thing about the jamun tree : There were parrots nesting in it. Since then, some other road boys had been capturing the parrots one by one to sell at the Marol Market, but Sunil had brought Kalu around to the belief that the birds should be left as they were. Sunil listened for their squawks each morning, to make sure they hadn't been abducted in the night.

Kalu's expertise was in the recycling bins inside airline catering compounds. Private waste collectors emptied these dumpsters on a regular basis, but Kalu had mastered the trash truck's schedules. The night before pickup, Kalu would climb over the barbed-wire fences and raid the overflowing bins.

Kalu's routine had become known by the local police, however. He kept getting caught, until some constables proposed a different arrangement. Kalu could keep his metal scrap if he'd pass on information he picked up on the road about local drug dealers.

What was the greatest pleasure this side of the lake?

Options:

- 1) A secret farm
- 2) The Jamun tree
- 3) Feasting on the branches of the Jamun tree
- 4) Labourers looking away when the children came to dig and eat

Correct Answer: The Jamun tree

Candidate Answer: Labourers looking away when the children came to dig and eat

Question 97. A passage is given with 5 questions following it. Read the passage carefully and choose the best answer to each question out of the four alternatives and click the button corresponding to it.

Another marvel on the far side of the lake was a little farm that felt like a secret in the city. Some of the gaunt Karnataka labourers even looked away when children came to dig and eat. But the greatest pleasure, this side of the lake, was the jamun tree. A few months back, Kalu and Sunil had a feast in the branches, shaking down a few berries for Mirchi.

That's when they came to know the second-coolest thing about the jamun tree : There were parrots nesting in it. Since then, some other road boys had been capturing the parrots one by one to sell at the Marol Market, but Sunil had brought Kalu around to the belief that the birds should be left as they were. Sunil listened for their squawks each morning, to make sure they hadn't been abducted in the night.

Kalu's expertise was in the recycling bins inside airline catering compounds. Private waste collectors emptied these dumpsters on a regular basis, but Kalu had mastered the trash truck's schedules. The night before pickup, Kalu would climb over the barbed-wire fences and raid the overflowing bins.

Kalu's routine had become known by the local police, however. He kept getting caught, until some constables proposed a different arrangement. Kalu could keep his metal scrap if he'd pass on information he picked up on the road about local drug dealers.

What was the second coolest thing about the Jamun tree?

Options:

- 1) Shaking down the berries for Mirchi
- 2) There were parrots nesting in the tree
- 3) Selling parrots in the Marol Market
- 4) Capturing parrots in the tree

Correct Answer: There were parrots nesting in the tree

Candidate Answer: There were parrots nesting in the tree

Question 98. A passage is given with 5 questions following it. Read the passage carefully and choose the best answer to each question out of the four alternatives and click the button corresponding to it.

Another marvel on the far side of the lake was a little farm that felt like a secret in the city. Some of the gaunt Karnataka labourers even looked away when children came to dig and eat. But the greatest pleasure, this side of the lake, was the jamun tree. A few months back, Kalu and Sunil had a feast in the branches, shaking down a few berries for Mirchi.

That's when they came to know the second-coolest thing about the jamun tree : There were parrots nesting in it. Since then, some other road boys had been capturing the parrots one by one to sell at the Marol Market, but Sunil had brought Kalu around to the belief that the birds should be left as they were. Sunil listened for their squawks each morning, to make sure they hadn't been abducted in the night.

Kalu's expertise was in the recycling bins inside airline catering compounds. Private waste collectors emptied these dumpsters on a regular basis, but Kalu had mastered the trash truck's schedules. The night before pickup, Kalu would climb over the barbed-wire fences and raid the overflowing bins.

Kalu's routine had become known by the local police, however. He kept getting caught, until some constables proposed a different arrangement. Kalu could keep his metal scrap if he'd pass on information he picked up on the road about local drug dealers.

What did Sunil think of parrots?

Options:

- 1) That they should be captured and sold.
- 2) That they had been abducted in the night.
- 3) That they should not be captured and sold.
- 4) That they squawked every morning.

Correct Answer: That they should not be captured and sold.

Candidate Answer: That they squawked every morning.

Question 99.A passage is given with 5 questions following it. Read the passage carefully and choose the best answer to each question out of the four alternatives and click the button corresponding to it.

Another marvel on the far side of the lake was a little farm that felt like a secret in the city. Some of the gaunt Karnataka labourers even looked away when children came to dig and eat. But the greatest pleasure, this side of the lake, was the jamun tree. A few months back, Kalu and Sunil had a feast in the branches, shaking down a few berries for Mirchi.

That's when they came to know the second-coolest thing about the jamun tree : There were parrots nesting in it. Since then, some other road boys had been capturing the parrots one by one to sell at the Marol Market, but Sunil had brought Kalu around to the belief that the birds should be left as they were. Sunil listened for their squawks each morning, to make sure they hadn't been abducted in the night.

Kalu's expertise was in the recycling bins inside airline catering compounds. Private waste collectors emptied these dumpsters on a regular basis, but Kalu had mastered the trash truck's schedules. The night before pickup, Kalu would climb over the barbed-wire fences and raid the overflowing bins.

Kalu's routine had become known by the local police, however. He kept getting caught, until some constables proposed a different arrangement. Kalu could keep his metal scrap if he'd pass on information he picked up on the road about local drug dealers.

How did Kalu manage to raid the airline recycling bins before they were emptied?

Options:

- 1) He was an expert
- 2) He jumped over the barbed wire fences.
- 3) He had mastered the trash trucks schedules.
- 4) He worked at night

Correct Answer: He had mastered the trash trucks schedules.

Candidate Answer: He worked at night

Question 100.A passage is given with 5 questions following it. Read the passage carefully and choose the best answer to each question out of the four alternatives and click the button corresponding to it.

Another marvel on the far side of the lake was a little farm that felt like a secret in the city. Some of the gaunt Karnataka labourers even looked away when children came to dig and eat. But the greatest pleasure, this side of the lake, was the jamun tree. A few months back, Kalu and Sunil had a feast in the branches, shaking down a few berries for Mirchi.

That's when they came to know the second-coolest thing about the jamun tree : There were parrots nesting in it. Since then, some other road boys had been capturing the parrots one by one to sell at the Marol Market, but Sunil had brought Kalu around to the belief that the birds should be left as they were. Sunil listened for their squawks each morning, to make sure they hadn't been abducted in the night.

Kalu's expertise was in the recycling bins inside airline catering compounds. Private waste collectors emptied these dumpsters on a regular basis, but Kalu had mastered the trash truck's schedules. The night before pickup, Kalu would climb over the barbed-wire fences and raid the overflowing bins.

Kalu's routine had become known by the local police, however. He kept getting caught, until some constables proposed a different arrangement. Kalu could keep his metal scrap if he'd pass on information he picked up on the road about local drug dealers.

Why was a different arrangement proposed?

Options:

- 1) Because Kalu's routine was known by the police
- 2) So that Kalu would be able to keep his metal scrap.
- 3) So that Kalu could pass on information about local drug dealers
- 4) Because Kalu kept getting caught

Correct Answer: Because Kalu kept getting caught

Candidate Answer: So that Kalu would be able to keep his metal scrap.