



**Staff Selection Commission**  
(Government Of India)

**REGISTRATION NUMBER : 3206027219**  
**EXAM DATE : 31-August-2016**  
**EXAM NAME : SSC Examination 2016**  
**TOTAL MARKS : 200**

**CANDIDATE NAME : RUHI KUMARI**  
**EXAM START TIME : 13:15:00**  
**EXAM DURATION : 01:15 Hrs**  
**TOTAL NO OF QUESTIONS : 100**

Question 1. Select the related word/letters/numbers from the given alternatives:

दिये गये विकल्पों में से संबन्धित शब्द/अक्षरों/संख्या को चुनिए।

Sanitation : Illness :: Care : ?

स्वच्छता : बीमारी :: सावधानी : ?

**Options:**

- 1) Rest  
आराम
- 2) Ignore  
उपेक्षा
- 3) Accident  
दुर्घटना
- 4) Suggestion  
सुझाव

**Correct Answer:** Accident

दुर्घटना

**Candidate Answer:** Ignore

उपेक्षा

Question 2. Select the related word/letters/numbers from the given alternatives:

दिये गये विकल्पों में से संबन्धित शब्द/अक्षरों/संख्या को चुनिए।

GrTK : KtrG :: FjbH : ?

**Options:**

- 1) HbjF
- 2) jHbF
- 3) FbjH
- 4) HjbF

**Correct Answer:** HbjF

**Candidate Answer:** HbjF

Question 3. Select the related word/letters/numbers from the given alternatives:

दिये गये विकल्पों में से संबन्धित शब्द/अक्षरों/संख्या को चुनिए।

20 : 11 :: 102 : ?

**Options:**

- 1) 49
- 2) 52
- 3) 61
- 4) 58

**Correct Answer:** 52

**Candidate Answer:** [ NOT ANSWERED ]

Question 4.

**For the following questions**

Find the odd word/letters/number pair from the given alternatives.

निम्नलिखित प्रश्न में दिए गए विकल्पों में से विषम शब्द/अक्षर/संख्या युग्म को चुनिए ?

**Options:**

1) Man : Garage

आदमी : गैराज

2) Pig : Sty

सुअर : शूकरशाला

3) Horse : Stable

घोड़ा : अस्तबल

4) Cow : Shed

गाय : छप्पर

**Correct Answer:** Man : Garage

आदमी : गैराज

**Candidate Answer:** Man : Garage

आदमी : गैराज

Question 5.

**For the following questions**

Find the odd word/letters/number from the given alternatives.

निम्नलिखित प्रश्न में दिए गए विकल्पों में से विषम शब्द/अक्षर/संख्या को चुनिए ?

**Options:**

1) WVU

2) DBA

3) NML

4) HGF

**Correct Answer:** DBA

**Candidate Answer:** DBA

Question 6.

**For the following questions**

Find the odd word/letters/number from the given alternatives.

निम्नलिखित प्रश्न में दिए गए विकल्पों में से विषम शब्द/अक्षर/संख्या को चुनिए ?

**Options:**

1) 1629

2) 3418

3) 2349

4) 1834

**Correct Answer:** 1834

**Candidate Answer:** 2349

Question 7. Arrange the following words as per order in the dictionary.

निम्नलिखित शब्दों को शब्दकोश में दिए गए क्रम के अनुसार लिखिए ?

1. Exploit 2. Explosive 3. Exponent 4. Exposition 5. Explore

**Options:**

1) 1, 3, 4, 5, 2

2) 1, 5, 2, 3, 4

3) 1, 5, 3, 2, 4

4) 1, 2, 5, 3, 4

**Correct Answer:** 1, 5, 2, 3, 4

**Candidate Answer:** 1, 3, 4, 5, 2

Question 8. A series is given, with one term missing. Choose the correct alternative from the given ones that will complete the series.

निम्नलिखित प्रश्न में एक अनुक्रम दिया गया है, जिसमें एक पद लुप्त है। दिए गए विकल्पों में से वह सही विकल्प चुनिए जो अनुक्रम को पूरा करेगा ?

CAR, GCO, KEL, OGI, ?

**Options:**

1) SIK

2) SIF

3) TIK

4) TIL

**Correct Answer:** SIF

**Candidate Answer:** SIF

Question 9. A series is given, with one term missing. Choose the correct alternative from the given ones that will complete the series.

निम्नलिखित प्रश्न में एक अनुक्रम दिया गया है, जिसमें एक पद लुप्त है। दिए गए विकल्पों में से वह सही विकल्प चुनिए जो अनुक्रम को पूरा करेगा ?

100, 50, 52, 26, 28, ?, 16, 8

**Options:**

1) 14

2) 30

3) 32

4) 38

**Correct Answer:** 14

**Candidate Answer:** 14

Question 10. Mithilesh said to Neha, 'Your only brother's son is my wife's brother.' How is Neha related to the wife of Mithilesh?

मिथिलेश ने नेहा से कहा, " तुम्हारे इकलौते भाई का पुत्र मेरी पत्नी का भाई है।" नेहा का मिथिलेश की पत्नी से संबंध बताइए ?

**Options:**

1) Aunt

बुआ

2) Mother-in-law

सास

3) Sister

बहन

4) Mother

माता

**Correct Answer:** Aunt

बुआ

**Candidate Answer:** Mother-in-law

सास

Question 11. W, X, Y and Z are four friends. W is shorter than X, but taller than Y, who is shorter than Z. Who is the shortest among all?

W, X, Y और Z चार मित्र हैं। W, X से छोटा है लेकिन Y से लंबा है, जो कि Z से छोटा है। इन चारों में सबसे छोटा कौन है ?

**Options:**

1) W

2) X

3) Y

4) Z

**Correct Answer:** Y

**Candidate Answer:** Y

Question 12. From the given alternative words, select the word which cannot be formed using the letters of the given word.

निम्नलिखित विकल्पों में से वह शब्द चुनिए जो दिए गए शब्द के अक्षरों का प्रयोग करके नहीं बनाया जा सकता ?

SPECULATION

**Options:**

1) SPECIAL

2) TOPIC

3) SECULAR

4) CAUTION

**Correct Answer:** SECULAR**Candidate Answer:** SECULAR

Question 13.If A = 26 and X-RAY = 40, then WHAT = ?

यदि A = 26 और X-RAY = 40 हो, तो WHAT किसके बराबर होगा ?

**Options:**

1) 52

2) 54

3) 56

4) 58

**Correct Answer:** 56**Candidate Answer:** 56

Question 14.If 'A' stands for '+', 'B' stands for '-', 'C' stands for 'x', what is the value of (10C4)A(4C4)B6 = ?

यदि 'A' का मतलब '+' हो, 'B' का मतलब '-' और 'C' का मतलब 'x' हो, तो (10C4)A(4C4)B6 = ?

**Options:**

1) 46

2) 50

3) 56

4) 60

**Correct Answer:** 50**Candidate Answer:** 50Question 15.If  $324 \oplus 289 = 35$ ,  $441 \oplus 484 = 43$ , then  $625 \oplus 400 = ?$ यदि  $324 \oplus 289 = 35$ ,  $441 \oplus 484 = 43$  हो, तो  $625 \oplus 400$  का मान क्या होगा ?**Options:**

1) 431

2) 413

3) 341

4) 143

**Correct Answer:** 143**Candidate Answer:** [ NOT ANSWERED ]

Question 16.Select the missing numbers from the given alternatives

12 8 4 8 4 12 4 12 8 100 44 ?

दिए गए विकल्पों में से लुप्त अंक ज्ञात कीजिए ?

12 8 4 8 4 12 4 12 8 100 44 ?

**Options:**

1) 80

2) 56

3) 48

4) 36

**Correct Answer:** 56**Candidate Answer:** [ NOT ANSWERED ]

Question 17.A person started walking towards West and covered a distance of 15m, he turned right and walked 10m. Again he turned right and walked 5m and in the end he turned left and walked 15m. Which direction is this person facing now?

एक व्यक्ति ने पश्चिम की ओर चलना शुरू किया और 15 मीटर की दूरी तय की। फिर वह दाएं मुड़कर 10 मीटर चला। उसके बाद दाएं मुड़कर 5 मीटर चला और अंत में वह बाएं मुड़कर 15 मीटर चला। अब उस व्यक्ति का मुँह किस दिशा में है ?

**Options:**

- 1) North  
उत्तर
- 2) South  
दक्षिण
- 3) East  
पूर्व
- 4) West  
पश्चिम

**Correct Answer:** North

उत्तर

**Candidate Answer:** [ NOT ANSWERED ]

Question 18. Consider the given statement/s to be true and decide which of the given conclusions/assumptions can definitely be drawn from the given statement.  
Statements:

1. All cycles are ducks.
2. All ducks are swans.

Conclusions:

- I. All swans are cycles.
- II. Some swans are cycles.

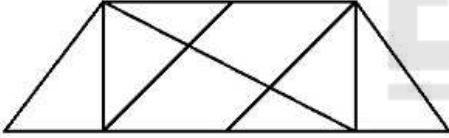
निम्नलिखित प्रश्न में एक या दो वक्तव्य दिये गये हैं, जिसके आगे दो निष्कर्ष/मान्यताएं, I और II निकाले गये हैं। आपको विचार करना है कि वक्तव्य सत्य है चाहे वह सामान्यतः शर्त से भिन्न प्रतीत होते हों। आपको निर्णय करना है कि दिए गए वक्तव्य में से कौनसा निश्चित रूप से सही निष्कर्ष/मान्यता निकाला जा सकता है? वक्तव्य : 1. सभी साइकिल बत्तख हैं। 2. सभी बत्तखें हंस हैं। निष्कर्ष : I सभी हंस साइकिल हैं। II कुछ हंस साइकिल हैं।

**Options:**

- 1) Only conclusion I follows  
केवल निष्कर्ष I सही है।
- 2) Only conclusion II follows  
केवल निष्कर्ष II सही है।
- 3) Both conclusion I and conclusion II follow  
निष्कर्ष I और II दोनों सही हैं।
- 4) Neither conclusion I nor conclusion II follows  
ना तो निष्कर्ष I सही है और ना ही निष्कर्ष II सही है।

**Correct Answer:** Only conclusion II follows  
केवल निष्कर्ष II सही है।**Candidate Answer:** Only conclusion II follows  
केवल निष्कर्ष II सही है।

Question 19. Find the number of triangles in the given figure?



दी गई आकृति में त्रिभुजों की संख्या ज्ञात कीजिए ?

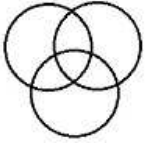
**Options:**

- 1) 8
- 2) 10
- 3) 12
- 4) 14


**Correct Answer:** 14**Candidate Answer:** [ NOT ANSWERED ]Question 20. Which of the diagrams given below correctly represents the relationship among **WOMEN, MOTHERS, SPINSTERS**निम्नलिखित में से कौन-सा आरेख दिए गए शब्दों के बीच सही संबंध को दर्शाता है। **महिलाएं, माताएं, अविवाहिताएं**

Options:

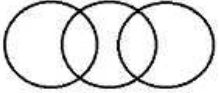
1)



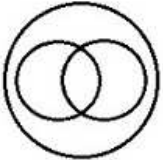
2)



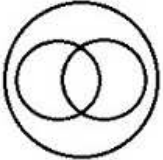
3)



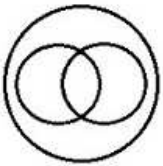
4)



Correct Answer:

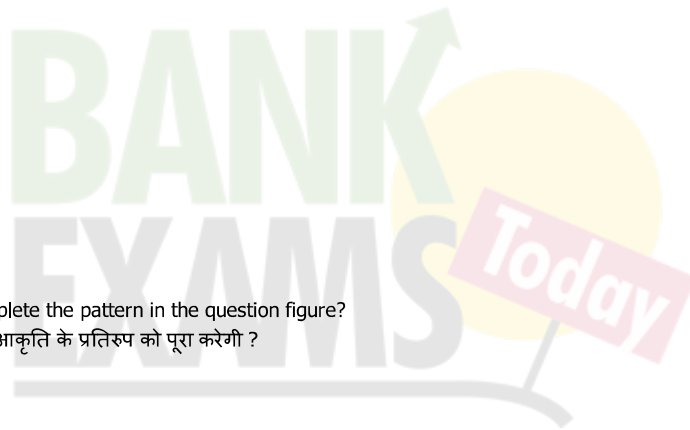
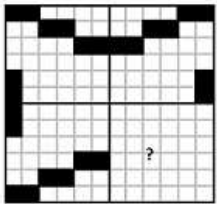


Candidate Answer:




Question 21. Which answer figure will complete the pattern in the question figure?

निम्नलिखित में से कौन-सी उत्तर आकृति प्रश्न आकृति के प्रतिरूप को पूरा करेगी ?

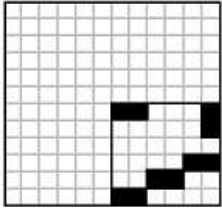


Options:

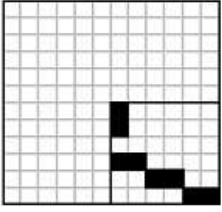
1)



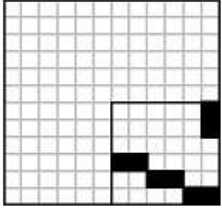
2)



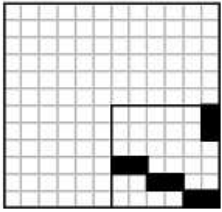
3)




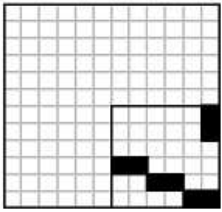
4)



Correct Answer:

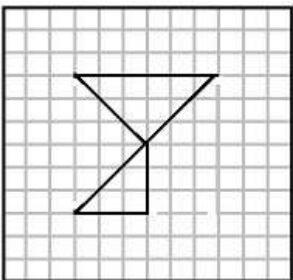


Candidate Answer:



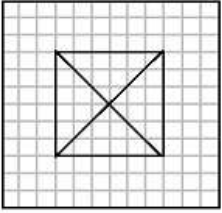
Question 22. From the given answer figures, select the one in which the question figure is hidden.

दी गई उत्तर आकृतियों में से उस उत्तर आकृति को चुनिए जिसमें प्रश्न आकृति निहित है।

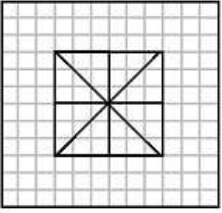


Options:

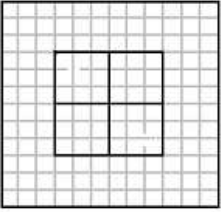
1)



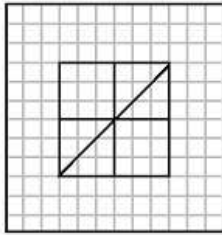
2)



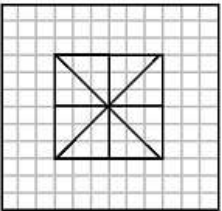
3)




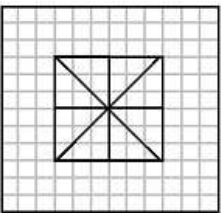
4)



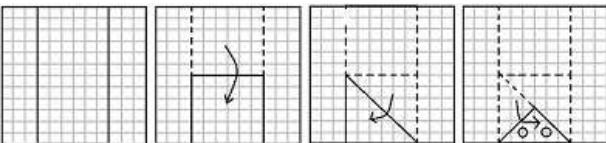
Correct Answer:



Candidate Answer:



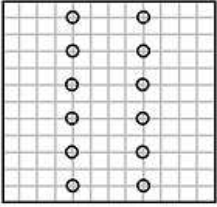
Question 23. A piece of paper is folded and cut as shown below in the question figures. From the given answer figures, indicate how it will appear when opened.  
यदि किसी कागज को, नीचे प्रश्न आकृतियों में दिखाए अनुसार मोड़कर काटा जाए तो खोलने के बाद वह किस उत्तर आकृति जैसा दिखाई देगा ?



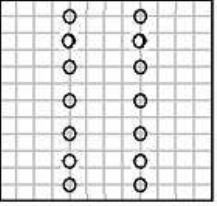


Options:

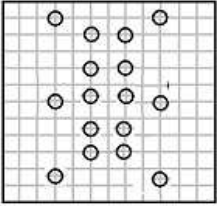
1)



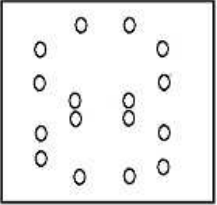
2)



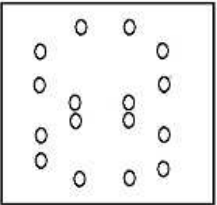
3)



4)



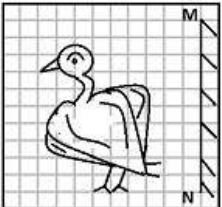
Correct Answer:



Candidate Answer: [ NOT ANSWERED ]

Question 24. If a mirror is placed on the line MN, then which of the answer figures is the right image of the given figure?

यदि एक दर्पण को MN रेखा पर रखा जाए तो दी गई उत्तर आकृतियों में से कौन-सी आकृति प्रश्न आकृति का सही प्रतिबिम्ब होगी ?




Options:


1)




2)




3)





4)



Correct Answer:



Candidate Answer:



Question 25. In this question, the sets of numbers given in the alternatives are represented. The columns and rows of Matrix I are numbered from 0 to 4 and that of Matrix II are numbered from 5 to 9. A letter from these matrices can be represented first by its row and next by its column, e.g., S can be represented by 02, 11, etc., and 'L' can be represented by 65, 86, etc. Similarly you have to identify the set for the word 'GATE'

	0	1	2	3	4		5	6	7	8	9
0	D	T	S	G	N	5	A	E	L	K	I
1	T	S	G	N	D	6	L	K	I	A	E
2	S	G	N	D	T	7	K	I	A	E	L
3	G	N	D	T	S	8	E	L	K	I	A
4	N	D	T	S	G	9	I	A	E	L	K

एक शब्द केवल एक संख्या-समूह द्वारा दर्शाया गया है, जैसे कि विकल्पों में से किसी एक में दिया गया है। विकल्पों में दिए गए संख्या समूह अक्षरों के दो वर्गों द्वारा दर्शाए गए हैं, जैसे कि नीचे दिए गए दो आव्यूहों में हैं। आव्यूह I के स्तंभ और पंक्ती की संख्या 0 से 4 और आव्यूह II की 5 से 9 दी गई है। इन आव्यूहों से एक अक्षर को पहले उसकी पंक्ती और बाद में स्तम्भ संख्या द्वारा दर्शाया जा सकता है। उदाहरण के लिए 'S' को 02, 11 आदि द्वारा दर्शाया जा सकता है तथा 'L' को 65, 86 आदि द्वारा दर्शाया जा सकता है। इसी तरह से आपको दिए हुए शब्द 'GATE' के लिए समूह को पहचानना है।

**Options:**

- 1) 30, 89, 11, 57
- 2) 21, 68, 34, 78
- 3) 21, 96, 24, 78
- 4) 12, 89, 42, 68

**Correct Answer:** 21, 96, 24, 78

**Candidate Answer:** [ NOT ANSWERED ]

Question 26. Which institution is known as 'Soft Loan Window' of World Bank?

कौन सी संस्था को विश्व बैंक के 'सुलभ कर्ज विन्डो' के नाम से जाना जाता है ?

**Options:**

- 1) IDBI  
भारतीय औद्योगिक विकास बैंक
- 2) IDA  
आई डी ए
- 3) IMF  
अन्तर्राष्ट्रीय मुद्रा कोष
- 4) RBI  
भारतीय रिजर्व बैंक

**Correct Answer:** IDA

आई डी ए

**Candidate Answer:** IMF

अन्तर्राष्ट्रीय मुद्रा कोष

Question 27. Which curve shows the inverse relationship between unemployment and inflation rates

कौन सा वक्र बेरोजगारी और मुद्रा स्फीति-दर के संबंध को प्रतिलोमतः दर्शाता है ?

**Options:**

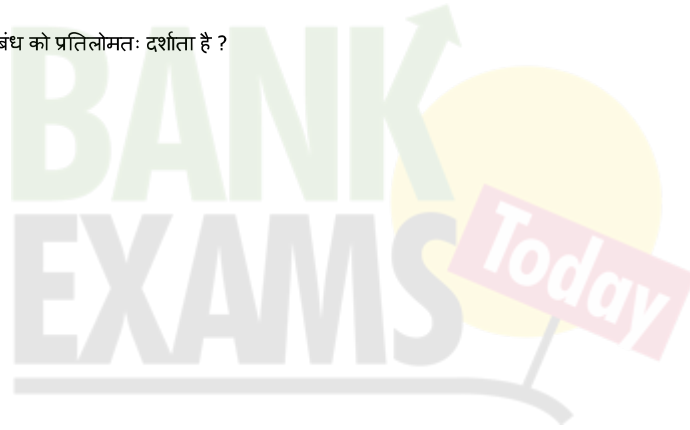
- 1) Supply curve  
पूर्ति वक्र
- 2) Indifference curve  
अनाधिमान वक्र
- 3) IS curve  
आई एस वक्र
- 4) Phillips curve  
फिलिप्स वक्र

**Correct Answer:** Phillips curve

फिलिप्स वक्र

**Candidate Answer:** IS curve

आई एस वक्र



Question 28. The longest sea beach in India is

भारत में सबसे लम्बा समुद्र - तट (सी - बीच) कहाँ है ?

**Options:**

- 1) Chapora beach  
चपोरा तट (बीच)
- 2) Diu beach  
दीव तट (बीच)
- 3) Aksa beach  
अक्सा तट (बीच)
- 4) Marina beach  
मरीना बीच

**Correct Answer:** Marina beach

मरीना बीच

**Candidate Answer:** Marina beach

मरीना बीच

Question 29. The Jammu and Kashmir State Legislative Assembly has a tenure of \_\_\_\_\_

जम्मू-कश्मीर राज्य विधान सभा का कार्यकाल कितने वर्ष का होता है ?

**Options:**

- 1) Six years  
6 वर्ष
- 2) Five years  
5 वर्ष
- 3) Four years  
4 वर्ष
- 4) Seven years  
7 वर्ष

**Correct Answer:** Six years

6 वर्ष

**Candidate Answer:** Five years

5 वर्ष

Question 30. Which one of the following Committees is described as the 'twin sister' of the Estimates Committee?

निम्नलिखित में से कौन सी समिति को प्राक्कलन समिति की 'जुड़वां बहन' कहा जाता है ?

**Options:**

- 1) Public Accounts Committee  
लोक लेखा समिति
- 2) Committee on Public Undertakings  
सार्वजनिक उपक्रम समिति
- 3) Departmental Standing Committee  
विभागीय स्थायी समिति
- 4) Privilege Committee  
विशेषाधिकार समिति

**Correct Answer:** Public Accounts Committee

लोक लेखा समिति

**Candidate Answer:** Public Accounts Committee

लोक लेखा समिति

Question 31. Potato is a ?

आलू क्या है ?

**Options:**

- 1) Root  
जड़
- 2) Stem  
डंठल
- 3) Bud  
कली
- 4) Fruit  
फल

**Correct Answer:** Stem

डंठल

**Candidate Answer:** Root

जड़

Question 32. English education was introduced in India by

भारत में अंग्रेजी शिक्षा किसने आरम्भ की ?

**Options:**


- 1) Curzon  
कर्ज़न
- 2) Macaulay  
मैकाले
- 3) Dalhousie  
डलहौजी
- 4) Bentick  
बेन्टिक

**Correct Answer:** Macaulay

मैकाले

**Candidate Answer:** Bentick

बेन्टिक



Question 33. Short term contractions and expansions in economic activity are called \_\_\_\_\_

आर्थिक क्रियाकलापों में अल्प कालिक संकुचन और विस्तार को क्या कहते हैं ?

**Options:**

1) Expansions

विस्तार

2) Recession

मंदी

3) Deficits

घाटा

4) The business cycle

व्यवसाय चक्र

**Correct Answer:** The business cycle

व्यवसाय चक्र

**Candidate Answer:** The business cycle

व्यवसाय चक्र

Question 34. Which one of the following region is most rich in coal deposits?

निम्नलिखित में से कौन सा क्षेत्र कोयला-भंडार में सबसे अधिक समृद्ध है ?

**Options:**

1) Bramhaputra Valley

ब्रह्मपुत्र घाटी

2) Damodar Valley

दामोदर घाटी

3) Mahanadi Valley

महानदी घाटी

4) Godavari Valley

गोदावरी घाटी

**Correct Answer:** Damodar Valley

दामोदर घाटी

**Candidate Answer:** Mahanadi Valley

महानदी घाटी

Question 35. Rainfall caused by intense evaporation in equatorial areas is called \_\_\_\_\_

भूमध्यवर्ती क्षेत्रों में गहन वाष्पण के कारण होने वाली वर्षा को क्या कहते हैं ?

**Options:**

1) Orographic rainfall

पर्वतीय वर्षा

2) Cyclonic rainfall

चक्रवातीय वर्षा

3) Frontal rainfall

वाताग्र वर्षा

4) Convectional rainfall

संवहनी वर्षा

**Correct Answer:** Convectional rainfall

संवहनी वर्षा

**Candidate Answer:** Cyclonic rainfall

चक्रवातीय वर्षा

Question 36. Haematopoiesis take place in \_\_\_\_\_

रक्तोत्पत्ति कहां होती है ?

**Options:**

1) Lungs

फेफड़े

2) Pancreas

अग्नाशय

3) Liver

जिगर

4) Bone marrow

अस्थि मज्जा

**Correct Answer:** Bone marrow

अस्थि मज्जा

**Candidate Answer:** Pancreas

अग्नाशय

Question 37. \_\_\_\_\_ is a hormone that regulates the amount of glucose in the blood

कौन सा हार्मोन रक्त में शर्करा की मात्रा नियंत्रित करता है ?

**Options:**

1) Glucogen

ग्लूकोजन

2) Thyroxine

थायरोक्सिन

3) Oxytocin

ऑक्सीटोसिन

4) Insulin

इन्सुलिन

**Correct Answer:** Insulin

इन्सुलिन

**Candidate Answer:** Glucogen

ग्लूकोजन

Question 38. Wall Street collapse led to \_\_\_\_\_

वॉल स्ट्रीट में शेयरों के मूल्य अत्यधिक गिर जाने से क्या प्रभाव पड़ा ?

**Options:**

1) World War II

द्वितीय महायुद्ध

2) Recession

मन्दी

3) U.S. attack on Iraq

इराक पर अमरीका का आक्रमण

4) Great Depression

महामंदी

**Correct Answer:** Great Depression

महामंदी

**Candidate Answer:** Recession

मन्दी

Question 39. Gandhara Art is the combination of \_\_\_\_\_

गंधार कला किन दो कलाओं का संयोजन है ?

**Options:**

1) Indo - Roman

हिंद - रोमन

2) Indo - Greek

हिंद - यूनानी

3) Indo - Islamic

हिंद - इस्लामिक

4) Indo - China

हिन्द - चीनी

**Correct Answer:** Indo - Greek


हिंद - यूनानी

**Candidate Answer:** Indo - Islamic

हिंद - इस्लामिक

Question 40. If electric resistance is to be decreased, then the number of resistances should be connected in \_\_\_\_\_

यदि विद्युत प्रतिरोध कम करना हो तो प्रतिरोधकों की संख्या को किससे जोड़ना चाहिए ?



**Options:**

- 1) Series  
माला (सिरीज़)
- 2) Parallel  
समान्तर
- 3) Mixed arrangement  
मिश्रित व्यवस्था
- 4) None of these  
इनमें से कोई नहीं

**Correct Answer:** Parallel

समान्तर

**Candidate Answer:** Parallel

समान्तर

Question 41. Related to computers, what is 'Wetware' ?

कम्प्यूटर के संदर्भ में 'वेट वेयर' क्या होता है ?

**Options:**

- 1) Computer programs  
कम्प्यूटर प्रोग्राम
- 2) Circuitory  
सर्किटरी
- 3) Human brain  
मानव-मस्तिष्क
- 4) Chemical storage devices  
रासायनिक संग्रहण यंत्र

**Correct Answer:** Human brain

मानव-मस्तिष्क

**Candidate Answer:** Circuitory

सर्किटरी

Question 42. Indira Goswami, the famous editor, poet, scholar and writer won the Jnanpith Award in which language?

प्रसिद्ध सम्पादक, कवियत्री, विद्वान और लेखिका इन्दिरा गोस्वामी को कौन सी भाषा के लिए ज्ञानपीठ पुरस्कार दिया गया ?

**Options:**

- 1) Bengali  
बंगाल
- 2) Odia  
उड़िया
- 3) Assamese  
असमिया
- 4) Hindi  
हिन्दी

**Correct Answer:** Assamese

असमिया

**Candidate Answer:** Odia

उड़िया

Question 43. Ultraviolet radiation in the stratosphere is absorbed by

समताप मंडल में पराबैंगनी विकिरण किसके द्वारा अवशोषित किया जाता है ?

**Options:**

- 1) SO<sub>2</sub>  
SO<sub>2</sub>
- 2) Ozone  
ओज़ोन
- 3) Oxygen  
ऑक्सीजन
- 4) Argon  
आर्गन

**Correct Answer:** Ozone

ओज़ोन

**Candidate Answer:** Ozone

ओज़ोन

Question 44. All isotopes of the same element have \_\_\_\_\_

समान तत्व के सभी आइसोटोप में क्या होता है ?

**Options:**

- 1) different atomic numbers and different atomic mass  
भिन्न परमाणविक क्रमांक और भिन्न परमाणविक संहति
- 2) different atomic numbers and the same atomic mass  
भिन्न परमाणविक क्रमांक और एक जैसा परमाणविक संहति
- 3) the same atomic number but different atomic masses  
एक जैसी परमाणविक क्रमांक किन्तु भिन्न परमाणविक संहति
- 4) the same atomic number and the atomic mass  
एक जैसी परमाणविक क्रमांक और एक जैसा परमाणविक संहति

**Correct Answer:** the same atomic number but different atomic masses  
एक जैसी परमाणविक क्रमांक किन्तु भिन्न परमाणविक संहति

**Candidate Answer:** different atomic numbers and different atomic mass  
भिन्न परमाणविक क्रमांक और भिन्न परमाणविक संहति

Question 45. Nitric acid does not react with

नाइट्रिक अम्ल निम्नलिखित में से किसके साथ अभिक्रिया नहीं करता है ?

**Options:**

- 1) Gold  
स्वर्ण
- 2) Copper  
तांबा
- 3) Zinc  
जस्ता
- 4) Iron  
लोहा

**Correct Answer:** Gold  
स्वर्ण

**Candidate Answer:** Copper  
तांबा

Question 46. Nandadevi peak is located in \_\_\_\_\_ State

नन्दादेवी चोटी किस राज्य में स्थित है ?

**Options:**

- 1) Himachal Pradesh  
हिमाचल प्रदेश
- 2) Uttarakhand  
उत्तराखण्ड
- 3) Uttar Pradesh  
उत्तर प्रदेश
- 4) Sikkim  
सिक्किम

**Correct Answer:** Uttarakhand  
उत्तराखण्ड

**Candidate Answer:** Uttarakhand  
उत्तराखण्ड


Question 47. Which one of the following industries is known as 'Sunrise Industry' ?

निम्नलिखित में से कौन से उद्योग को 'सूर्योदय उद्योग' कहा जाता है ?

**Options:**

- 1) Iron & Steel  
लोहा और इस्पात
- 2) Cotton Textile  
सूती वस्त्र
- 3) Information Technology  
सूचना प्रौद्योगिकी
- 4) Tea & Coffee  
चाय और कॉफी

**Correct Answer:** Information Technology  
सूचना प्रौद्योगिकी





**Candidate Answer:** Tea & Coffee

चाय और कॉफी

Question 48. The material used in electric heater

is...

बिजली के हीटर में कौनसी सामग्री प्रयुक्त होती है ?

**Options:**

1) Tungsten

टंगस्टेन

2) Nichrome

निक्रोम

3) Brass

पीतल

4) Steel

इस्पात

**Correct Answer:** Nichrome

निक्रोम

**Candidate Answer:** Tungsten

टंगस्टेन

Question 49. Pellagra and Scurvy are caused by which pair of vitamin deficiency respectively \_\_\_\_\_

पेलाग्रा और स्कर्वी क्रमशः कौन से विटामिनों की कमी के कारण होते हैं ?

**Options:**

1) Vitamin C and Vitamin D

विटामिन सी और विटामिन डी

2) Vitamin B-12 and Vitamin C

विटामिन बी-12 और विटामिन सी

3) Vitamin C and Vitamin A

विटामिन सी और विटामिन ए

4) Vitamin A and Vitamin B-12

विटामिन ए और विटामिन बी-12

**Correct Answer:** Vitamin B-12 and Vitamin C

विटामिन बी-12 और विटामिन सी

**Candidate Answer:** Vitamin A and Vitamin B-12

विटामिन ए और विटामिन बी-12

Question 50. Who appoints the Finance Commission in India?

भारत के वित्त आयोग की नियुक्ति कौन करता है ?

**Options:**

1) Governor, R.B.I.

गवर्नर, भारतीय रिजर्व बैंक

2) CAG of India

भारत के नियंत्रक एवम महालेखा परीक्षक

3) President of India

भारत के राष्ट्रपति

4) Central Finance Minister

केन्द्रीय वित्त मंत्रालय

**Correct Answer:** President of India

भारत के राष्ट्रपति

**Candidate Answer:** Central Finance Minister

केन्द्रीय वित्त मंत्रालय

Question 51. A can do a certain job in 12 days. B is 60% more efficient than A. Then B can do the same piece of work in

A किसी काम को 12 दिन में कर सकता है और B, A से 60% अधिक कार्य-कुशल है। बताइए B उस काम को कितने दिन में करेगा ?

**Options:**

1) 8 days

8 दिन

2)

 $7\frac{1}{2} \text{ days}$  $7\frac{1}{2}$  दिन

3)

 $6\frac{1}{4} \text{ days}$  $6\frac{1}{4}$  दिन

4) 6 days

6 दिन

**Correct Answer:** $7\frac{1}{2} \text{ days}$  $7\frac{1}{2}$  दिन**Candidate Answer:** 8 days

8 दिन

Question 52. A rectangle with one side 4 cm is inscribed in a circle of radius 2.5 cm. The area of the rectangle is:

एक आयत, जिसकी एक भुजा 4 से.मी. है, किसी 2.5 से.मी. त्रिज्या वाले वृत्त में है। आयत का क्षेत्रफल क्या होगा ?

**Options:**1)  $8 \text{ cm}^2$ 8 से.मी.<sup>2</sup>2)  $12 \text{ cm}^2$ 12 से.मी.<sup>2</sup>3)  $16 \text{ cm}^2$ 16 से.मी.<sup>2</sup>4)  $20 \text{ cm}^2$ 20 से.मी.<sup>2</sup>**Correct Answer:**  $12 \text{ cm}^2$ 12 से.मी.<sup>2</sup>**Candidate Answer:** [ NOT ANSWERED ]

Question 53. A merchant marked cloth at Rs. 50/metre . He offers 2 successive discounts of 15% and 20%. The net price/metre is :

कोई व्यापारी कपड़े पर Rs. 50 प्रति मी. मूल्य अंकित करता है। वह क्रमशः 15% और 20% छूट देता है। प्रति मी0 निवल (नेट) कीमत क्या होगी ?

**Options:**

1) Rs. 32.50

2) Rs. 42.50

3) Rs. 34.00

4) Rs. 40.00

**Correct Answer:** Rs. 34.00**Candidate Answer:** [ NOT ANSWERED ]

Question 54. 3 brothers divided Rs. 1620 among them in such a way that the share of second is equal to  $\frac{5}{13}$  of share of other two, combined. What is the share of the second one?

तीन भाईयों ने आपस में Rs. 1620 की राशि ऐसे बाँटी कि दूसरे भाई को अन्य दो भाईयों के संयुक्त हिस्से का  $\frac{5}{13}$  हिस्सा मिला। दूसरे भाई का हिस्सा कितना है ?

**Options:**

1) Rs. 1170

2) Rs. 450

3) Rs. 540

4) Rs. 500

**Correct Answer:** Rs. 450**Candidate Answer:** Rs. 1170

Question 55.A dealer marks his goods 20% above their cost prices. Then,he allows such a discount on the marked price so that he makes a profit of 8%. The rate of discount is:

कोई व्यापारी अपनी वस्तुओं के मूल्य उनके क्रय मूल्य से 20% अधिक पर अंकित करता है। फिर वह अंकित मूल्य पर एक ऐसी छूट देता है जिससे उसे 8% का लाभ होता है। दिये जाने वाली छूट की दर क्या है ?

**Options:**

- 1) 12%
- 2) 10%
- 3) 6%
- 4) 4%

**Correct Answer:** 10%

**Candidate Answer:** [ NOT ANSWERED ]

Question 56.The salary of a person is reduced by 20% . To restore the previous salary, his present salary is to be increased by

किसी व्यक्ति का वेतन 20% कम किया गया। उसे उसके पुराने वेतन पर लाने के लिए उसके वर्तमान वेतन को कितना बढ़ाना होगा ?

**Options:**

- 1) 20%
- 2) 25%
- 3) 17.5%
- 4) 22.5%

**Correct Answer:** 25%

**Candidate Answer:** 20%

Question 57.Two buses travel to a place at 45 km/hr and 60 km/hr respectively. If the second bus takes  $5\frac{1}{2}$  hours less than the first for the journey, the length of the journey is:

दो बसें क्रमशः 45 कि.मी./घण्टा और 60 कि.मी./घण्टा की चाल से यात्रा कर रही हैं। यदि दूसरी बस पहली बस की अपेक्षा यात्रा में  $5\frac{1}{2}$  घण्टे कम लेती है तो बताइए यात्रा कितनी लम्बी है ?

**Options:**

- 1) 900 km  
900 कि.मी.
- 2) 945 km  
945 कि.मी.
- 3) 990 km  
990 कि.मी.
- 4) 1350 km  
1350 कि.मी.

**Correct Answer:** 990 km

990 कि.मी.

**Candidate Answer:** [ NOT ANSWERED ]

Question 58.

If  $(x + \frac{1}{x}) : (x - \frac{1}{x}) = 5:3$ , the the value(s) of  $x$  is / are

यदि  $(x + \frac{1}{x}) : (x - \frac{1}{x}) = 5:3$  हो तो  $x$  का मान बताइए ?

**Options:**

- 1)  $\pm 1$
- 2)  $\pm 2$
- 3)  $\pm 3$
- 4) 0

**Correct Answer:**  $\pm 2$

**Candidate Answer:** [ NOT ANSWERED ]

Question 59.An exterior angle of a triangle is  $115^\circ$  and one of the interior opposite angle is  $45^\circ$ . Then the other two angles are

किसी त्रिभुज का बाह्य कोण  $115^\circ$  है और एक आन्तरिक सम्मुख कोण  $45^\circ$  का है। तो अन्य दो कोणों का माप बताइए ?

**Options:**

- 1)  $65^\circ, 70^\circ$
- 2)  $60^\circ, 75^\circ$
- 3)  $45^\circ, 90^\circ$
- 4)  $50^\circ, 85^\circ$

**Correct Answer:**  $65^\circ, 70^\circ$

**Candidate Answer:** [ NOT ANSWERED ]

Question 60.

In a  $\Delta ABC$ ,  $\angle A + \angle B = 75^\circ$  and  $\angle B + \angle C = 140^\circ$ , then  $\angle B$  is

यदि  $\Delta ABC$ ,  $\angle A + \angle B = 75^\circ$ ,  $\angle B + \angle C = 140^\circ$ , तो  $\angle B$  क्या होगा?

**Options:**

1)  $40^\circ$

2)  $35^\circ$

3)  $55^\circ$

4)  $45^\circ$

**Correct Answer:**  $35^\circ$

**Candidate Answer:** [ NOT ANSWERED ]

Question 61.

The value of  $(1+\tan^2\theta)(1-\sin^2\theta)$  is

$(1+\tan^2\theta)(1-\sin^2\theta)$  का मान क्या होगा?

**Options:**

1) 2

2) 1

3) -1

4) -2

**Correct Answer:** 1

**Candidate Answer:** 1

Question 62. If  $4x^2 - 12x + k$  is a perfect square, then the value of  $k$  is

यदि  $4x^2 - 12x + k$  पूर्ण वर्ग हो तो  $k$  का मान बताइए ?

**Options:**

1) 2

2) 9

3) 12

4) 10

**Correct Answer:** 9

**Candidate Answer:** [ NOT ANSWERED ]

Question 63.  $(113^2 + 115^2 + 117^2 - 113 \times 115 - 115 \times 117 - 117 \times 113)$  is equal to

$(113^2 + 115^2 + 117^2 - 113 \times 115 - 115 \times 117 - 117 \times 113)$  किसके बराबर है ?

**Options:**

1) 0

2) 4

3) 8

4) 12

**Correct Answer:** 12

**Candidate Answer:** 12

Question 64. The average of runs scored by a cricketer in his 99 innings is 99. How many runs will he have to score in his 100th innings so that his average of runs in 100 innings may be 100?

किसी क्रिकेट खिलाड़ी द्वारा खेले गयी 99 पारियों में उसके द्वारा बनाये गये रनों का औसत 99 है। 100वीं पारी में उसे कितने रन बनाने होंगे ताकि 100 पारियों का उसके रनों का औसत 100 हो जाए ?

**Options:**

1) 100

2) 99

3) 199

4) 101

Correct Answer: 199

Candidate Answer: 199

Question 65.

If  $r \sin \theta = 1$ ,  $r \cos \theta = \sqrt{3}$  then the value of  $r^2 \tan \theta$  is

यदि  $r \sin \theta = 1$ ,  $r \cos \theta = \sqrt{3}$  तो  $r^2 \tan \theta$  का मान बताइए ?

Options:

1) 4

2)  $\frac{1}{\sqrt{3}}$

3)  $\frac{4}{\sqrt{3}}$

4)  $4\sqrt{3}$

Correct Answer:

$\frac{4}{\sqrt{3}}$

Candidate Answer: [ NOT ANSWERED ]

Question 66. If  $p^3 - q^3 = (p - q) ( (p - q)^2 + x p q )$  then value of x is

यदि  $p^3 - q^3 = (p - q) ( (p - q)^2 + x p q )$  हो तो x का मान ज्ञात कीजिये ?

Options:

1) 1

2) -1

3) 3

4) 2

Correct Answer: 3

Candidate Answer: [ NOT ANSWERED ]

Question 67.

If  $(a + \frac{1}{a})^2 = 3$ , then the value of  $a^{18} + a^{12} + a^6 + 1$  is

यदि  $(a + \frac{1}{a})^2 = 3$  हो तो  $a^{18} + a^{12} + a^6 + 1$  का मान ज्ञात कीजिये ?

Options:

1) 3

2) 1

3) 0

4) 2

Correct Answer: 0

Candidate Answer: [ NOT ANSWERED ]

Question 68. The top of a broken tree touches the ground at a distance of 15 m from its base. If the tree is broken at a height of 8 m from the ground, then the actual height of the tree is

किसी टूटे वृक्ष का शीर्ष भाग उसके तल से 15 मी. की दूरी पर भूमि को छूता है। यदि वृक्ष भूमि से 8 मी. की ऊँचाई पर टूटा हो तो वृक्ष की मूलतः ऊँचाई क्या थी ?

Options:

1) 17 m

17 मि

2) 20 m

20 मि

3) 25 m

25 मि

4) 30 m

30 मि

**Correct Answer:** 25 m

25 मि

**Candidate Answer:** [ NOT ANSWERED ]

Question 69. In  $\Delta PQR$ , straight line parallel to the base  $QR$  cuts  $PQ$  at  $X$  and  $PR$  at  $Y$ . If  $PX:XQ = 5:6$ , then the  $XY:QR$  will be

किसी  $\Delta PQR$  में आधार  $QR$  के समान्तर सरल रेखा  $PQ$  को  $X$  पर और  $PR$  को  $Y$  पर काटती है। यदि  $PX:XQ = 5:6$  हो तो  $XY:QR$  क्या होंगे ?

**Options:**

1) 5:11

2) 6:5

3) 11:6

4) 11:5

**Correct Answer:** 5:11

**Candidate Answer:** [ NOT ANSWERED ]

Question 70. A man borrowed some money from a private organisation at 5% simple interest per annum. He lended this money to another person at 10% compound interest per annum, and made a profit of ₹ 26,410 in 4 years. The man borrowed

किसी व्यक्ति ने किसी निजी संगठन से 5% वार्षिक साधारण ब्याज की दर पर कोई राशि उधार ली। तत्पश्चात उसने वह राशि किसी अन्य व्यक्ति को 10% वार्षिक चक्रवृद्धि ब्याज पर दे दी और इस पर उसे 4 वर्ष में ₹ 26410 का लाभ हुआ। उस व्यक्ति ने कितनी राशि उधार ली थी ?

**Options:**

1) 200000

2) 150000

3) 132050

4) 100000

**Correct Answer:** 100000

**Candidate Answer:** [ NOT ANSWERED ]

Question 71.

From two points, lying on the same horizontal line, the angles of elevation of the top of the pillar are  $\theta$  and  $\phi$  ( $\theta < \phi$ ). If the height of the pillar is 'h' m and the two points lie on the same sides of the pillar, then the distance between the two points is

एक ही जैतिज रेखा पर दो बिंदुओं से, किसी स्तंभ के शिर्ष को उन्नयन कोण  $\theta$  और  $\phi$  ( $\theta < \phi$ ) हैं। यदि स्तंभ की उचाई 'h' मी. है और दोनो बिंदु स्तंभ के एक ओर हो तो दोनों बिंदुओं के बीच की दूरी बताएं?

**Options:**

1)

$$h(\tan\theta - \tan\phi)m$$

2)

$$h(\cot\theta - \cot\phi)m$$

3)

$$h(\cot\theta - \cot\phi)m$$

4)

$$h \frac{\tan\theta \tan\phi}{\tan\phi - \tan\theta} m$$

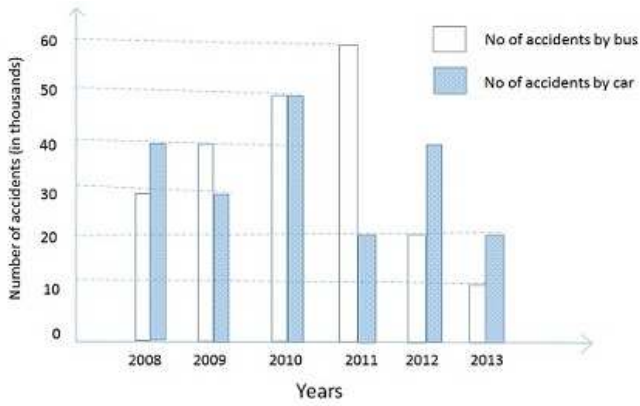
**Correct Answer:**

$$h(\cot\theta - \cot\phi)m$$

**Candidate Answer:** [ NOT ANSWERED ]

Question 72. The Bar graphs represents the number of road accidents due to bus and car during the years 2008 - 2013. Study the graph and answer the questions.

इस बार ग्राफ में वर्ष 2008-2013 के दौरान बस और कार के कारण हुई सड़क दुर्घटनाओं की संख्याओं को दर्शाया गया है। ग्राफ का अध्ययन कीजिए और प्रश्नों के उत्तर दीजिए।



The total number of road accidents in the year 2009, 2011 and 2013 combined together is

वर्ष 2009, 2011 और 2013 में कुल मिलाकर सड़क दुर्घटनाओं की संख्या कितनी है ?

**Options:**

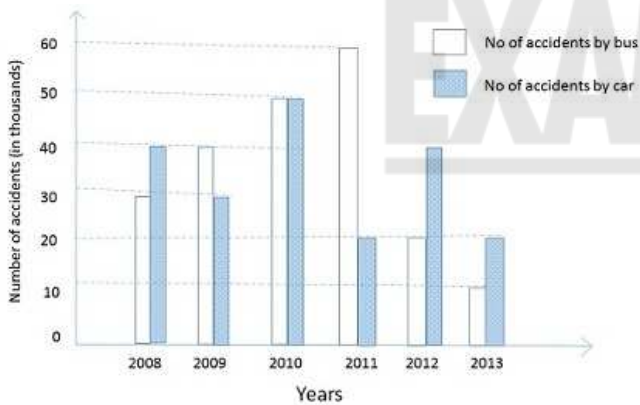
- 1) 180000
- 2) 110000
- 3) 70000
- 4) 160000

**Correct Answer:** 180000

**Candidate Answer:** 180000

Question 73. The Bar graphs represents the number of road accidents due to bus and car during the years 2008 - 2013. Study the graph and answer the questions.

इस बार ग्राफ में वर्ष 2008-2013 के दौरान बस और कार के कारण हुई सड़क दुर्घटनाओं की संख्याओं को दर्शाया गया है। ग्राफ का अध्ययन कीजिए और प्रश्नों के उत्तर दीजिए।



The ratio of the road accidents due to Bus in the year 2008 to that by Car in the year 2012 is

वर्ष 2008 में बस के कारण और वर्ष 2012 में कार के कारण हुई सड़क दुर्घटनाओं का अनुपात क्या है ?

**Options:**

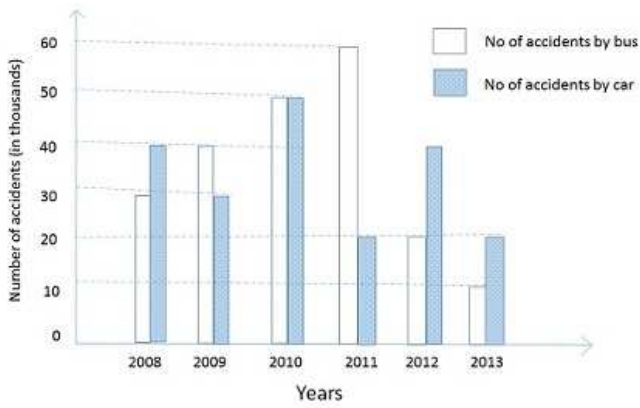
- 1) 2:1
- 2) 1:2
- 3) 2:3
- 4) 3:4

**Correct Answer:** 3:4

**Candidate Answer:** 3:4

Question 74. The Bar graphs represents the number of road accidents due to bus and car during the years 2008 - 2013. Study the graph and answer the questions.

इस बार ग्राफ में वर्ष 2008-2013 के दौरान बस और कार के कारण हुई सड़क दुर्घटनाओं की संख्याओं को दर्शाया गया है। ग्राफ का अध्ययन कीजिए और प्रश्नों के उत्तर दीजिए।



The respective ratio between the accidents by cars in the year 2012, 2010 and 2009 is

वर्ष 2012, 2010 और 2009 में कार द्वारा हुई दुर्घटनाओं के बीच क्रमशः अनुपात क्या है ?

**Options:**

1) 2:5:4

2) 4:5:4

3) 4:3:2

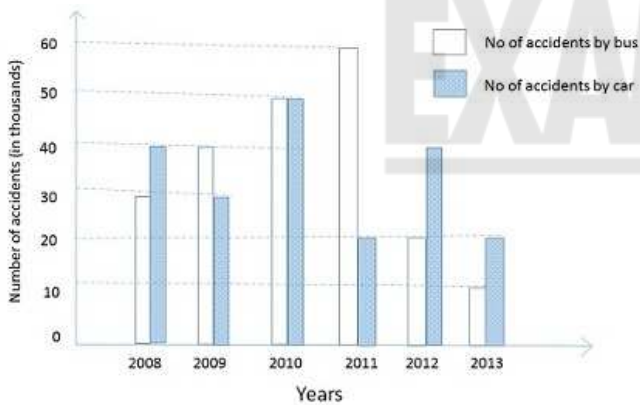
4) 4:5:2

**Correct Answer:** 4:5:4

**Candidate Answer:** 4:3:2

Question 75. The Bar graphs represents the number of road accidents due to bus and car during the years 2008 - 2013. Study the graph and answer the questions.

इस बार ग्राफ में वर्ष 2008-2013 के दौरान बस और कार के कारण हुई सड़क दुर्घटनाओं की संख्याओं को दर्शाया गया है। ग्राफ का अध्ययन कीजिए और प्रश्नों के उत्तर दीजिए।



The ratio of the averages of the road accidents due to Bus to that by Car in the year 2008, 2011 and 2013 is

वर्ष 2008, 2011 और 2013 में बस के कारण और कार द्वारा हुई सड़क दुर्घटनाओं का औसत अनुपात क्या है ?

**Options:**

1) 4:5

2) 5:4

3) 5:1

4) 1:4

**Correct Answer:** 5:4

**Candidate Answer:** 4:5

Question 76. In the following question, out of the four alternatives, choose the word which best expresses the meaning of the given word and click the button corresponding to it.

LETHARGIC



**Options:**

- 1) ENERGETIC
- 2) LAZY
- 3) LETHAL
- 4) LEGAL

**Correct Answer:** LAZY**Candidate Answer:** LAZY

Question 77. In the following question, out of the four alternatives, choose the word which is opposite in meaning to the given word and click the button corresponding to it.

MALLEABLE

**Options:**

- 1) TEACHABLE
- 2) INTRACTABLE
- 3) MANAGEABLE
- 4) PLIABLE

**Correct Answer:** INTRACTABLE**Candidate Answer:** [ NOT ANSWERED ]

Question 78. Four words are given, out of which only one word is spelt correctly. Choose the correctly spelt word and click the button corresponding to it.

**Options:**

- 1) Persemonious
- 2) Persimonoius
- 3) Parsemonious
- 4) Parsimonious

**Correct Answer:** Parsimonious**Candidate Answer:** [ NOT ANSWERED ]

Question 79. In the following questions, one part of the sentence may have an error. Find out which part of the sentence has an error and click the button corresponding to it. If the sentence is free from error, click the "No error" option.

Sooner had he come (A)/ his colleagues (B)/ organised a get together (C)/ No Error (D)

**Options:**

- 1) A
- 2) B
- 3) C
- 4) D

**Correct Answer:** A**Candidate Answer:** A

Question 80. In the following questions, one part of the sentence may have an error. Find out which part of the sentence has an error and click the button corresponding to it. If the sentence is free from error, click the "No error" option.

I enjoyed during (A)/ my tenure (B)/ at Shimla (C)/ No error (D)

**Options:**

- 1) A
- 2) B
- 3) C
- 4) D

**Correct Answer:** A**Candidate Answer:** C

Question 81. In the following questions, one part of the sentence may have an error. Find out which part of the sentence has an error and click the button corresponding to it. If the sentence is free from error, click the "No error" option.

The Government offered him (A)/ clerical job (B)/ but he turned it over (C) / No error (D)

**Options:**

- 1) A
- 2) B
- 3) C
- 4) D

**Correct Answer:** C**Candidate Answer:** [ NOT ANSWERED ]

Question 82. The sentences given with blanks are to be filled with an appropriate word(s). Four alternatives are suggested for each question. For each question, choose the correct alternative and click the button corresponding to it.

After a noisy and tumultuous supper, we \_\_\_\_\_ for the day.

**Options:**

- 1) retirement
- 2) retiring
- 3) retired
- 4) retire

**Correct Answer:** retired**Candidate Answer:** retired

Question 83.The sentences given with blanks are to be filled with an appropriate word(s). Four alternatives are suggested for each question. For each question, choose the correct alternative and click the button corresponding to it.

The villager cried \_\_\_\_\_ his voice for help

**Options:**

- 1) on the top of
- 2) in the top of
- 3) from the top of
- 4) at the top of

**Correct Answer:** at the top of

**Candidate Answer:** on the top of

Question 84.The sentences given with blanks are to be filled with an appropriate word(s). Four alternatives are suggested for each question. For each question, choose the correct alternative and click the button corresponding to it.

Simon teaches children \_\_\_\_\_ water colour painting

**Options:**

- 1) the art on
- 2) the art in
- 3) the art by
- 4) the art of

**Correct Answer:** the art of

**Candidate Answer:** the art of

Question 85.In each of the questions, four alternatives are given for the Idiom/Phrase. Choose the alternative which best expresses the meaning of the Idiom/Phrase and click the button corresponding to it.

Be down with

**Options:**

- 1) Suffering from
- 2) In grief with
- 3) In pain with
- 4) Aching with

**Correct Answer:** Suffering from

**Candidate Answer:** In pain with

Question 86.In each of the questions, four alternatives are given for the Idiom/Phrase. Choose the alternative which best expresses the meaning of the Idiom/Phrase and click the button corresponding to it.

Fair - weather friend

**Options:**

- 1) Honest only when easy and convenient
- 2) Truthful only when easy and convenient
- 3) Supports only when easy and convenient
- 4) Temporary only when easy and convenient

**Correct Answer:** Supports only when easy and convenient

**Candidate Answer:** Temporary only when easy and convenient

Question 87.In each of the questions, four alternatives are given for the Idiom/Phrase. Choose the alternative which best expresses the meaning of the Idiom/Phrase and click the button corresponding to it.

Pull together

**Options:**

- 1) Become friends
- 2) Work harmoniously
- 3) Be successful
- 4) Live happily

**Correct Answer:** Work harmoniously

**Candidate Answer:** Become friends

Question 88.Out of the four alternatives, choose the one which can be substituted for the given words/sentences and click the button corresponding to it.

A place where soldiers live

**Options:**

- 1) Tanks
- 2) Shacks
- 3) Ordnance Depots
- 4) Barracks

**Correct Answer:** Barracks

**Candidate Answer:** Barracks

Question 89.Out of the four alternatives, choose the one which can be substituted for the given words/sentences and click the button corresponding to it.

A man who collects old and new coins.

**Options:**

- 1) Geologist
- 2) Numismatist
- 3) Archaeologist
- 4) Zoologist

**Correct Answer:** Numismatist

**Candidate Answer:** Archaeologist

Question 90. Out of the four alternatives, choose the one which can be substituted for the given words/sentences and click the button corresponding to it.

Regular users of places/restaurant etc.

**Options:**

- 1) Client
- 2) Clientele
- 3) Often
- 4) Usage

**Correct Answer:** Clientele

**Candidate Answer:** Client

Question 91. A sentence/a part of the sentence is underlined. Four alternatives are given to the underlined part which will improve the sentence. Choose the correct alternative and click the button corresponding to it. In case no improvement is needed, click the button corresponding to "No improvement".

This material is not much enough for me

**Options:**

- 1) not more enough
- 2) not so much enough
- 3) not enough
- 4) No improvement

**Correct Answer:** not enough

**Candidate Answer:** not enough

Question 92. A sentence/a part of the sentence is underlined. Four alternatives are given to the underlined part which will improve the sentence. Choose the correct alternative and click the button corresponding to it. In case no improvement is needed, click the button corresponding to "No improvement".

This is a change of my usual work

**Options:**

- 1) from my usual work
- 2) for my usual work
- 3) in my usual work
- 4) No improvement

**Correct Answer:** from my usual work

**Candidate Answer:** in my usual work

Question 93. A sentence/a part of the sentence is underlined. Four alternatives are given to the underlined part which will improve the sentence. Choose the correct alternative and click the button corresponding to it. In case no improvement is needed, click the button corresponding to "No improvement".

Maharana Pratap killed many enemy soldiers through his sword.

**Options:**

- 1) by his sword
- 2) with his sword
- 3) across his sword
- 4) No improvement

**Correct Answer:** with his sword

**Candidate Answer:** with his sword

Question 94. A sentence/a part of the sentence is underlined. Four alternatives are given to the underlined part which will improve the sentence. Choose the correct alternative and click the button corresponding to it. In case no improvement is needed, click the button corresponding to "No improvement".

Everyone hoped of good weather on the day of the wedding

**Options:**

- 1) for
- 2) at
- 3) about
- 4) no improvement

**Correct Answer:** for

**Candidate Answer:** for

Question 95. A sentence/a part of the sentence is underlined. Four alternatives are given to the underlined part which will improve the sentence. Choose the correct alternative and click the button corresponding to it. In case no improvement is needed, click the button corresponding to "No improvement".

He asked the child to go and play with some others children.

**Options:**

- 1) some other's children
- 2) some others
- 3) some other
- 4) No improvement

**Correct Answer:** some other

**Candidate Answer:** some other

Question 96.A passage is given with 5 questions following it. Read the passage carefully and choose the best answer to each question out of the four alternatives and click the button corresponding to it.

Two men were once walking along a forest path, talking of courage and loyalty. The bigger one, who had a gun, was boasting of his own bravery and fidelity, when suddenly a large bear came from behind a rock close in front of them, and stood in their way growling angrily. The boaster fled to the nearest tree, dropped his gun, and climbed to a safe place without thinking of his poor friend. The latter flung himself upon his face as though dead. The bear smelt his body, turned him over, licked his face, and supposing him to be dead, went on its way leaving him unhurt.

The other man came down from the tree, and going to his friend said "Well, what secrets did he whisper so quietly in your ear?". To which the little man, who owed his life to his own presence of mind and not to the boasted bravery and fidelity of his companion, replied, "why, he said, 'put not your trust in braggarts,' and I shall take his advice."

What were the two men talking about while walking along the forest path?

**Options:**

- 1) About their wives and children.
- 2) About money and fame.
- 3) About friendship and enjoyment.
- 4) About courage and loyalty.

**Correct Answer:** About courage and loyalty.

**Candidate Answer:** About courage and loyalty.

Question 97.A passage is given with 5 questions following it. Read the passage carefully and choose the best answer to each question out of the four alternatives and click the button corresponding to it.

Two men were once walking along a forest path, talking of courage and loyalty. The bigger one, who had a gun, was boasting of his own bravery and fidelity, when suddenly a large bear came from behind a rock close in front of them, and stood in their way growling angrily. The boaster fled to the nearest tree, dropped his gun, and climbed to a safe place without thinking of his poor friend. The latter flung himself upon his face as though dead. The bear smelt his body, turned him over, licked his face, and supposing him to be dead, went on its way leaving him unhurt.

The other man came down from the tree, and going to his friend said "Well, what secrets did he whisper so quietly in your ear?". To which the little man, who owed his life to his own presence of mind and not to the boasted bravery and fidelity of his companion, replied, "why, he said, 'put not your trust in braggarts,' and I shall take his advice."

What is the meaning of the word "fidelity"?

**Options:**

- 1) Muscle
- 2) Strength
- 3) Faithfulness
- 4) Courage

**Correct Answer:** Faithfulness

**Candidate Answer:** Courage

Question 98.A passage is given with 5 questions following it. Read the passage carefully and choose the best answer to each question out of the four alternatives and click the button corresponding to it.

Two men were once walking along a forest path, talking of courage and loyalty. The bigger one, who had a gun, was boasting of his own bravery and fidelity, when suddenly a large bear came from behind a rock close in front of them, and stood in their way growling angrily. The boaster fled to the nearest tree, dropped his gun, and climbed to a safe place without thinking of his poor friend. The latter flung himself upon his face as though dead. The bear smelt his body, turned him over, licked his face, and supposing him to be dead, went on its way leaving him unhurt.

The other man came down from the tree, and going to his friend said "Well, what secrets did he whisper so quietly in your ear?". To which the little man, who owed his life to his own presence of mind and not to the boasted bravery and fidelity of his companion, replied, "why, he said, 'put not your trust in braggarts,' and I shall take his advice."

After seeing the bear, what happened to the boaster?

**Options:**

- 1) He fled home.
- 2) He hid himself behind the rock.
- 3) He hid himself behind a shed.
- 4) He fled and climbed up the nearest tree.

**Correct Answer:** He fled and climbed up the nearest tree.

**Candidate Answer:** He fled and climbed up the nearest tree.

Question 99.A passage is given with 5 questions following it. Read the passage carefully and choose the best answer to each question out of the four alternatives and click the button corresponding to it.

Two men were once walking along a forest path, talking of courage and loyalty. The bigger one, who had a gun, was boasting of his own bravery and fidelity, when suddenly a large bear came from behind a rock close in front of them, and stood in their way growling angrily. The boaster fled to the nearest tree, dropped his gun, and climbed to a safe place without thinking of his poor friend. The latter flung himself upon his face as though dead. The bear smelt his body, turned him over, licked his face, and supposing him to be dead, went on its way leaving him unhurt.

The other man came down from the tree, and going to his friend said "Well, what secrets did he whisper so quietly in your ear?". To which the little man, who owed his life to his own presence of mind and not to the boasted bravery and fidelity of his companion, replied, "why, he said, 'put not your trust in braggarts,' and I shall take his advice."

What made the bear go away after examining the man?

**Options:**

- 1) The bear thought the man was dead.
- 2) The bear could not stand the bad odour of the man.
- 3) The bear did not want to eat the man.
- 4) The bear heard a noise and was scarred.

**Correct Answer:** The bear thought the man was dead.

**Candidate Answer:** The bear thought the man was dead.

Question 100. A passage is given with 5 questions following it. Read the passage carefully and choose the best answer to each question out of the four alternatives and click the button corresponding to it.

Two men were once walking along a forest path, talking of courage and loyalty. The bigger one, who had a gun, was boasting of his own bravery and fidelity, when suddenly a large bear came from behind a rock close in front of them, and stood in their way growling angrily. The boaster fled to the nearest tree, dropped his gun, and climbed to a safe place without thinking of his poor friend. The latter flung himself upon his face as though dead. The bear smelt his body, turned him over, licked his face, and supposing him to be dead, went on its way leaving him unhurt.

The other man came down from the tree, and going to his friend said "Well, what secrets did he whisper so quietly in your ear?". To which the little man, who owed his life to his own presence of mind and not to the boasted bravery and fidelity of his companion, replied, "why, he said, 'put not your trust in braggarts,' and I shall take his advice."

What saved the little man?

**Options:**

- 1) The aid from the villagers
- 2) His friend's bravery
- 3) His own presence of mind
- 4) His own courage

**Correct Answer:** His own presence of mind

**Candidate Answer:** His own presence of mind

