



Staff Selection Commission
(Government Of India)

REGISTRATION NUMBER : 2003005550
EXAM DATE : 11-September-2016
EXAM NAME : SSC Examination 2016
TOTAL MARKS : 200

CANDIDATE NAME : MANISH
EXAM START TIME : 16:15:00
EXAM DURATION : 01:15 Hrs
TOTAL NO OF QUESTIONS : 100

Question 1. Select the related word/letters/numbers from the given alternatives:

दिये गये विकल्पों में से संबन्धित शब्द/अक्षरों/संख्या को चुनिए।

Medicine : Patient :: Education : ?

औषधि : रोगी :: शिक्षा : ?

Options:

1) Teacher

अध्यापक

2) School

विद्यालय

3) Student

छात्र

4) Tuition

ट्यूशन

Correct Answer: Student

छात्र

Candidate Answer: Student

छात्र

Question 2. Select the related word/letters/numbers from the given alternatives:

दिये गये विकल्पों में से संबन्धित शब्द/अक्षरों/संख्या को चुनिए।

LAMP : IXJM :: FISH : ?

Options:

1) CGPF

2) CFQE

3) CFPE

4) CGQF

Correct Answer: CFPE

Candidate Answer: CFPE

Question 3. Select the related word/letters/numbers from the given alternatives:

दिये गये विकल्पों में से संबन्धित शब्द/अक्षरों/संख्या को चुनिए।

13 : 20 :: 17 : ?

Options:

1) 25

2) 26

3) 27

4) 28

Correct Answer: 28

Candidate Answer: 25

Question 4.

For the following questions

Find the odd word / letter / number from the given alternative

दिए गए विकल्पों में से विषम शब्द/अक्षर/संख्या को चुनिए

Options:

- 1) Rival
प्रतिद्वन्दी
- 2) Opponent
विरोधी
- 3) Foe
शत्रु
- 4) Ally
मित्र

Correct Answer: Ally
मित्र

Candidate Answer: Rival
प्रतिद्वन्दी

Question 5.

For the following questions

Find the odd word / letter / number from the given alternative

दिए गए विकल्पों में से विषम शब्द/अक्षर/संख्या को चुनिए

Options:

- 1) POCG
- 2) KLIZ
- 3) BUDX
- 4) FQMV

Correct Answer: FQMV

Candidate Answer: KLIZ

Question 6.

For the following questions

Find the odd word / letter / number from the given alternative

दिए गए विकल्पों में से विषम शब्द/अक्षर/संख्या को चुनिए

Options:

- 1) 36 - 48
- 2) 56 - 44
- 3) 78 - 66
- 4) 33 - 64


Correct Answer: 33 - 64

Candidate Answer: 33 - 64

Question 7. Arrange the following words as per order in the dictionary

निम्नलिखित शब्दों को शब्दकोश में दिए गए क्रम के अनुसार लिखिए

1. Ambitions
2. Ambiguous
3. Ambiguity
4. Animation
5. Animal



Options:

1) 3 , 2 , 4 , 1 , 5

2) 3 , 2 , 5 , 4 , 1

3) 3 , 2 , 1 , 5 , 4

4) 3 , 2 , 4 , 5 , 1

Correct Answer: 3 , 2 , 1 , 5 , 4

Candidate Answer: 3 , 2 , 1 , 5 , 4

Question 8.A series is given , with one term missing . Choose the correct alternative from the given ones that will complete the series .

निम्नलिखित प्रश्न में एक अनुक्रम दिया गया है, जिसमें एक पद लुप्त है। दिए गए विकल्पों में से वह सही विकल्प चुनिए जो अनुक्रम को पूरा करे

CAT , DBT , ECT , ?

Options:

1) DCT

2) FDT

3) FCT

4) FAT

Correct Answer: FDT

Candidate Answer: FDT

Question 9.A series is given , with one term missing . Choose the correct alternative from the given ones that will complete the series .

निम्नलिखित प्रश्न में एक अनुक्रम दिया गया है, जिसमें एक पद लुप्त है। दिए गए विकल्पों में से वह सही विकल्प चुनिए जो अनुक्रम को पूरा करे

5 , 11 , 24 , 51 , 106 , ____?

Options:

1) 122

2) 217

3) 120

4) 153

Correct Answer: 217

Candidate Answer: 217

Question 10.Showing a man on the stage , Rita said , " He is the brother of the daughter of the wife of my husband . How is the man on stage related to Rita ?

मंच पर एक पुरुष को दिखाते हुए रीता ने कहा, " वह मेरे पति की पत्नी की पुत्री का भाई है। " मंच पर उपस्थित उस पुरुष का रीता से क्या संबंध है ?

Options:

1) SON

पुत्र

2) HUSBAND

पति

3) COUSIN

चचेरा/फुफेरा/भमेरा/मौसेरा

4) NEPHEW

भतीजा

Correct Answer: SON

पुत्र

Candidate Answer: HUSBAND

पति

Question 11.The age of Dr. Pandey is four times the age of his son. After 10 years , the age of Dr. Pandey will be twice the age of his son . The present age of Dr. Pandey's son is

डॉ. पाण्डेय की आयु उनके पुत्र की आयु की चार गुनी है। 10 वर्ष पश्चात डॉ. पाण्डेय की आयु उनके पुत्र की आयु से दुगुनी हो जाएगी। डॉ. पाण्डेय के पुत्र की वर्तमान आयु बताइए ?

Options:

1) 4 years

4 वर्ष

2) 5 years

5 वर्ष

3) 6 years

6 वर्ष

4) 8 years

8 वर्ष

Correct Answer: 5 years

5 वर्ष

Candidate Answer: [NOT ANSWERED]

Question 12. From the given alternative words, select the word which cannot be formed using the letters of the given word :

विकल्पों में से वह शब्द चुनिए जो दिए गए शब्द के अक्षरों का प्रयोग करके नहीं बनाया जा सकता ?

I N T E L L I G E N C E

Options:

1) CANCEL

2) NEGLECT

3) GENTLE

4) INCITE

Correct Answer: CANCEL

Candidate Answer: CANCEL

Question 13. If C is coded 3, DASH is coded as 32, then DANCE will be coded as

यदि C को किसी कोड में 3 लिखा जाए, DASH को 32 लिखा जाए, तो DANCE को उसी कोड में क्या लिखा जाएगा ?

Options:

1) 20

2) 25

3) 26

4) 27

Correct Answer: 27

Candidate Answer: 27

Question 14. If '+' means minus, '-' means multiplication, '÷' means plus, and 'x' means division, then

यदि + का अर्थ घटा है, - का अर्थ गुणा है, ÷ का अर्थ जमा है, और x का अर्थ भाग है, तो निम्नलिखित प्रश्न को हल कीजिए ?

$15 - 3 + 10 \times 5 \div 5$

Options:

1) 52

2) 48

3) 22

4) 5

Correct Answer: 48

Candidate Answer: 48

Question 15. A certain system is followed to solve the problem. Accordingly find out the correct answer from the alternatives for the unsolved equations.

निम्नलिखित प्रश्न में कुछ समीकरणों का हल निकालने के लिए एक विशिष्ट प्रणाली का प्रयोग किया गया है। जिस समीकरण का हल नहीं निकाला गया है, उसी विशिष्ट प्रणाली से उस समीकरण का उत्तर ज्ञात कीजिए

$7 \times 4 \times 9 = 479$

$9 \times 5 \times 2 = 592$

$6 \times 9 \times 5 = 965$

$8 \times 6 \times 2 = ?$

Options:

1) 286

2) 682

3) 628

4) 268

Correct Answer: 682

Candidate Answer: 682

Question 16. Find the missing number from the given alternatives

दिए गए विकल्पों में से लुप्त संख्या ज्ञात करें

7	10	5
16	40	8
15	?	9

Options:

1) 75

2) 45

3) 20

4) 30

Correct Answer: 30

Candidate Answer: [NOT ANSWERED]

Question 17. Sanmitra walked 8 m towards the north. He turned to his right and walked 16 m, then he turned to his left and walked 5 m and again he turned to his left and walked 16 m. In which direction is he from his starting point ?

संमित्रा उत्तर की ओर 8 मीटर चला और दायें घूमकर 16 मीटर चला। फिर अपने बायें घूमकर 5 मीटर चला। वह फिर बायीं ओर मुड़ा और 16 मीटर चला। अब वह अपने प्रारम्भिक स्थान से किस दिशा में है ?

Options:

1) South

दक्षिण

2) East

पूर्व

3) North

उत्तर

4) West


पश्चिम

Correct Answer: North

उत्तर

Candidate Answer: North

उत्तर



Question 18. Consider the given statement/s to be true and decide which of the given conclusions/assumptions can definitely be drawn from the given statement.

Statements :

1. Some teachers are followers.

2. Some followers are famous.

Conclusions :

I. Some teachers are famous.

II. Some followers are teachers.

निम्नलिखित प्रश्न में एक या दो वक्तव्य दिये गये हैं, जिसके आगे दो निष्कर्ष/मान्यताएं, I और II निकाले गये हैं। आपको विचार करना है कि वक्तव्य सत्य है चाहे वह सामान्यतः शर्त तथ्यों से भिन्न प्रतीत होता हो। आपको निर्णय करना है कि दिए गए वक्तव्य में से कोन-सा निश्चित रूप से सही निष्कर्ष/मान्यता निकाला जा सकता है ?

वक्तव्य : 1. कुछ अध्यापक अनुयायी हैं।

2. कुछ अनुयायी प्रसिद्ध हैं।

निष्कर्ष : I कुछ अध्यापक प्रसिद्ध हैं।

II कुछ अनुयायी अध्यापक हैं।

Options:

1) Only conclusion I follows

केवल निष्कर्ष I सही है।

2) Only conclusion II follows

केवल निष्कर्ष II सही है।

3) Both conclusion I and II follows

निष्कर्ष I और II दोनों सही हैं।

4) Neither conclusion I nor II follows

ना तो निष्कर्ष I सही है और ना ही निष्कर्ष II सही है।

Correct Answer: Only conclusion II follows

केवल निष्कर्ष II सही है।

Candidate Answer: Only conclusion II follows

केवल निष्कर्ष II सही है।

Question 19. How many triangles are there in the question figure ?

प्रश्न आकृति में कितने त्रिभुज हैं ?



Options:

1) 18

2) 24

3) 28

4) 30

Correct Answer: 28

Candidate Answer: 18

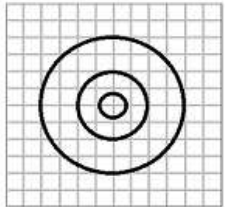
Question 20. Identify the diagram that best represents the relationship among classes given below

वह आरेख चुनिए जो नीचे दिए गए वर्गों के बीच सही सम्बन्ध को दर्शाता है ?

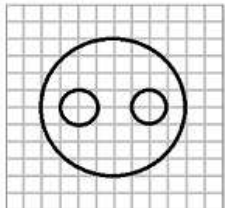
Delhi , Sri Lanka , Asia

Options:

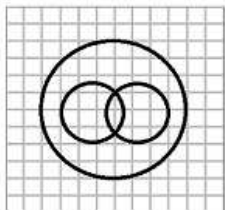
1)




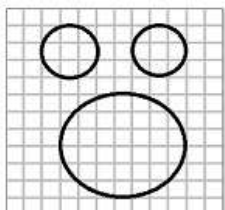
2)



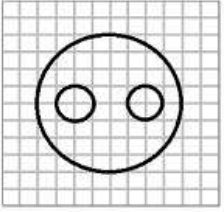
3)



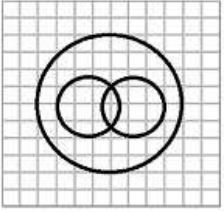
4)



Correct Answer:

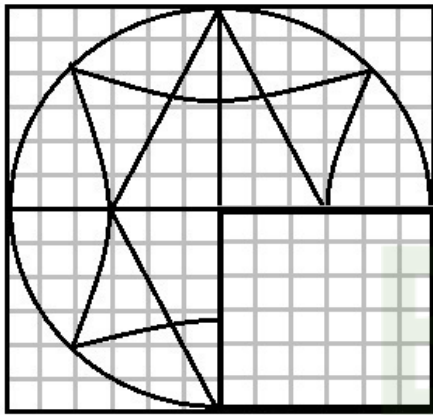


Candidate Answer:



Question 21. Which answer figure complete the pattern in the question figure?

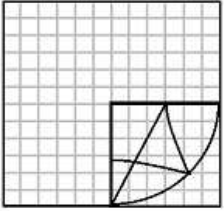
कौन-सी उत्तर आकृति प्रश्न आकृति के प्रतिरूप को पूरा करेगी ?



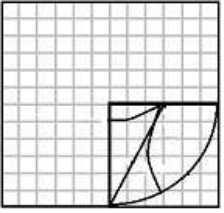
BANK
EXAMS
Today

Options:

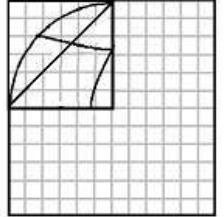
1)



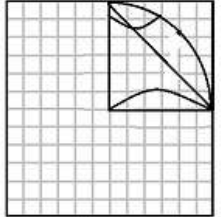
2)



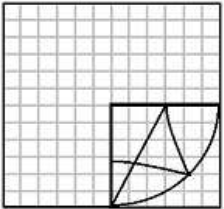
3)




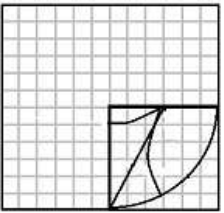
4)



Correct Answer:

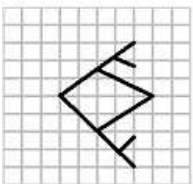


Candidate Answer:



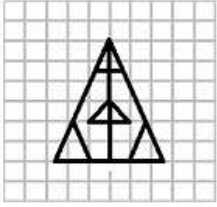
Question 22. From the given figure, select the one in the question the figure is hidden / embedded

दी गई उत्तर आकृतियों में से उस उत्तर आकृति को चुनिए जिसमें प्रश्न आकृति निहित है ?

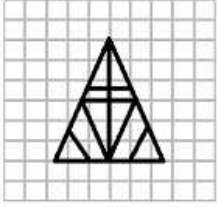


Options:

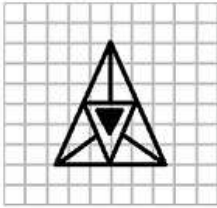
1)



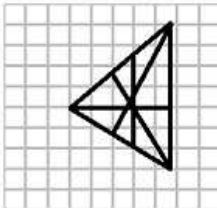
2)



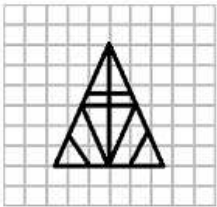
3)




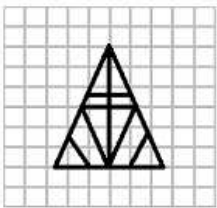
4)



Correct Answer:

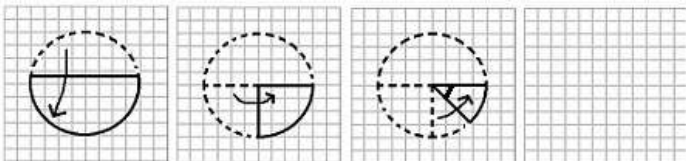


Candidate Answer:



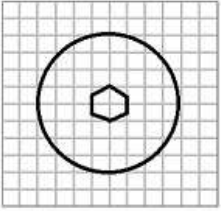
Question 23. A piece of paper is folded and cut as shown below in the given answer figures, indicate how it will paper when opened.

यदि किसी कागज को, नीचे प्रश्न आकृतियों में दिखाए अनुसार मोड़कर काटा जाए तो खोलने के बाद वह किस उत्तर आकृति जैसा दिखाई देगा ?

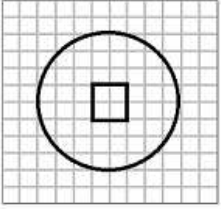


Options:

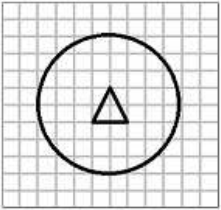
1)



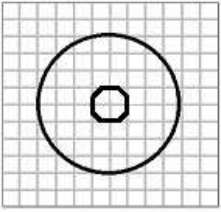
2)




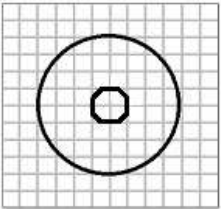
3)



4)



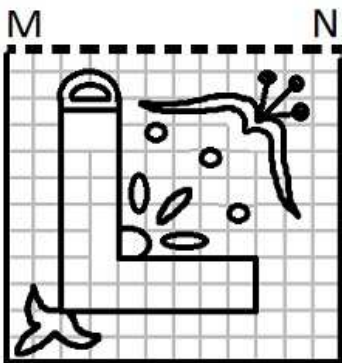
Correct Answer:



Candidate Answer: [NOT ANSWERED]

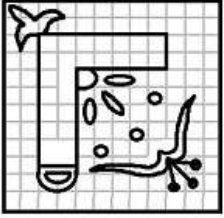
Question 24. If a mirror is placed on the line MN, then which of the answer figures is the right image of the figure ?

यदि एक दर्पण को MN रेखा पर रखा जाए तो दी गई उत्तर आकृतियों में से कौन-सी आकृति प्रश्न आकृति का सही प्रतिबिम्ब होगी ?

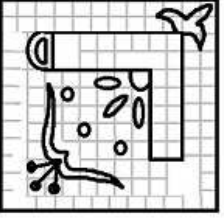


Options:

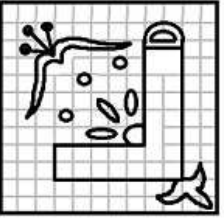
1)



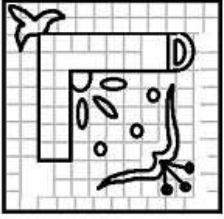
2)



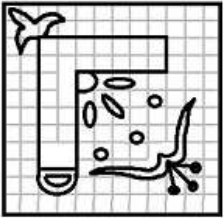
3)




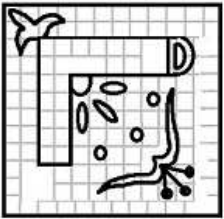
4)



Correct Answer:



Candidate Answer:



Question 25. In the question, a word is represented by only one set of numbers as given in any one of the alternatives. The sets of numbers given in the alternatives are represented by two classes of alphabets as in two matrices given below. The columns and rows of Matrix I are numbered from 0 to 4 and that of Matrix II are numbered from 5 to 9. A letter in these matrices can be represented first by row and next by its column, e. g., 'A' can be represented by 01, 13, etc., and 'B' can be represented by 58, 69, etc. Similarly, you have to identify the set for the word 'FINE'

निम्नलिखित प्रश्न में विकल्पों में दिए गए संख्या-समूह, अक्षरों के दो वर्गों द्वारा दर्शाए गए हैं, जैसे कि नीचे दिए गए दो आव्यूहों में हैं। आव्यूह I के सतम्भ और पंक्ति की संख्या 0 से 4 तक दी गई है, और आव्यूह II के 5 से 9 तक, इन आव्यूहों से एक अक्षर को पहले उसकी पंक्ति और बाद में स्तम्भ संख्या द्वारा दर्शाया जा सकता है। उदाहरण के लिए, A को 01, 13, आदि द्वारा दर्शाया जा सकता है तथा B को 58, 69, आदि द्वारा दर्शाया जा सकता है। इसी तरह से आपको दिए शब्द 'FINE' के लिए समूह को पहचानना है।

MATRIX I

	0	1	2	3	4
0	F	A	N	O	I
1	I	O	F	A	N
2	A	N	O	I	F
3	O	F	I	N	A
4	N	I	A	F	O

MATRIX II

	5	6	7	8	9
5	S	E	H	B	T
6	H	S	E	T	B
7	B	T	S	E	H
8	E	H	T	B	S
9	T	S	E	H	B

Options:

1) 00, 04, 02, 56

2) 12, 10, 13, 67

3) 24, 19, 31, 78

4) 31, 32, 33, 87

Correct Answer: 00, 04, 02, 56

Candidate Answer: 00, 04, 02, 56

Question 26. Who propounded the "Doctrine of Passive Resistance"?

"शान्तिपूर्ण प्रतिरोध" (सत्याग्रह) का सिद्धान्त किसने प्रतिपादित किया था ?

Options:

1) Balgangadhar Tilak

बालगंगाधर तिलक

2) Aurobindo Ghosh

ऑरोबिन्दो घोष

3) Lala Lajpat Rai

लाला लाजपत राय

4) Bipin Chandra Pal

बिपिन चन्द्र पाल

Correct Answer: Aurobindo Ghosh

ऑरोबिन्दो घोष

Candidate Answer: Lala Lajpat Rai

लाला लाजपत राय

Question 27. At Rio Olympics, what was the final position of Dipa Karmakar in her category?

दीपा कर्माकर का रियो ओलम्पिक खेलों में अपने वर्ग में कौन सा स्थान था ?

Options:

1) 4

2) 5

3) 6

4) 7

Correct Answer: 4

Candidate Answer: 4

Question 28. The 14th Finance Commission has recommended increase in States share in net proceeds from tax collection from 32% to

14 वें वित्त आयोग ने कर वसूली से होने वाली निवल आय में राज्यों का हिस्सा 32% से बढ़ाकर कितने प्रतिशत करने की सिफारिश की है ?

Options:

1) 35%

2) 40%

3) 42%

4) 45%

Correct Answer: 42%

Candidate Answer: [NOT ANSWERED]

Question 29. Fiscal policy in India is formulated by

भारत में राजकोषीय नीति कौन तय करता है ?

Options:

1) Reserve Bank of India

भारतीय रिज़र्व बैंक

2) Planning Commission

योजना आयोग

3) Finance Ministry

वित्त मंत्रालय

4) SEBI

सेबी

Correct Answer: Finance Ministry

वित्त मंत्रालय

Candidate Answer: SEBI

सेबी

Question 30. Which of the following has pH value 7?

निम्नलिखित में से किसका pH मान 7 है ?

Options:

1) Pure Water

शुद्ध जल

2) H_2SO_4

3) Sodium Carbonate

सोडियम कार्बोनेट

4) HCl

Correct Answer: Pure Water

शुद्ध जल

Candidate Answer: Pure Water

शुद्ध जल

Question 31. When ice cubes are made, the entropy of water

जब बर्फ बनती है, तो जल की एन्ट्रॉपी _____

Options:

1) does not change

परिवर्तित नहीं होती

2) decreases

घट जाती हो

3) increases

बढ़ जाती है

4) may either increase or decrease depending on the process used

क्या प्रक्रिया अपनाई गई, यह देखते हुए घट या बढ़ सकती है

Correct Answer: decreases

घट जाती हो

Candidate Answer: decreases

घट जाती हो

Question 32. Two vectors are said to be equal if

दो सदिश (वेक्टर) बराबर होते हैं यदि

Options:

1) only their magnitudes are same

केवल उनके आकार एक समान है

2) only their directions are same

केवल उनकी दिशाएँ एक हो

3) both magnitude and direction are same

उनके आकार और दिशा दोनों एक हो

4) magnitudes are same but directions are opposite


आकार एक हो किन्तु दिशाएँ विपरीत हों

Correct Answer: both magnitude and direction are same

उनके आकार और दिशा दोनों एक हो

Candidate Answer: both magnitude and direction are same

उनके आकार और दिशा दोनों एक हो



Question 33. The chemical component that is invariably found in all viruses is

कौन सा रासायनिक यौगिक अनिवार्यतः सभी विषाणुओं में पाया जाता है?

Options:

1) proteins

प्रोटीन

2) lipids

लिपिड

3) DNA

डी एन ए

4) RNA

आर एन ए

Correct Answer: proteins

प्रोटीन

Candidate Answer: lipids

लिपिड

Question 34. Which is used as an Air pollution indicator?

वायु प्रदूषण सूचक के रूप में निम्नलिखित में से कौन काम आता है ?

Options:

1) Algae

शैवाल

2) Fungi

फफूंद

3) Bacteria

विषाणु

(बैक्टीरिया)

4) Lichens

लाइकेन

(शैक)

Correct Answer: Lichens


लाइकेन

(शैक)

Candidate Answer: Bacteria

विषाणु

(बैक्टीरिया)



Question 35. The study of mountains is known as

पर्वतों के अध्ययन को क्या कहते हैं ?

Options:

1) Oncology

ऑन्कोलोजी

2) Lithology

अश्ममूद्रण (लिथोलॉजी)

3) Orology

ओरोलॉजी

4) Ornithology

ओरनिथोलॉजी

(पक्षिपरागण)

Correct Answer: Orology

ओरोलॉजी

Candidate Answer: Ornithology

ओरनिथोलॉजी

(पक्षिपरागण)

Question 36. Salination of soil is caused by

मृदा के लवणीकरण किस कारण होता है ?

Options:

1) Pesticides

पीड़कनाशी

2) soil erosion

भूमि कटाव

3) excess irrigation

अधिक सिंचाई

4) crop rotation

फसल आवर्तन

Correct Answer: excess irrigation

अधिक सिंचाई

Candidate Answer: Pesticides

पीड़कनाशी

Question 37. ICC World T20 in 2016 was won by

वर्ष 2016 में आई सी सी वर्ल्ड कप टी20 खिताब किसने जीता ?

Options:

1) India

भारत

2) England

इंग्लैंड

3) New Zealand

न्यूज़ीलैण्ड

4) West Indies

वेस्ट इन्डिज़

Correct Answer: West Indies

वेस्ट इन्डिज़

Candidate Answer: West Indies

वेस्ट इन्डिज़

Question 38. Which one of the following was established with a definite provision under an Article of the Constitution of India?

निम्नलिखित में से किसकी स्थापना भारतीय संविधान के अनुच्छेद के अधीन निश्चित उपबंध के अनुसार की गई थी ?

Options:

1) Union Public Service Commission

संघ लोक सेवा आयोग

2) National Human Rights Commission

राष्ट्रीय मानव अधिकार आयोग

3) Election Commission

चुनाव आयोग

4) Central Vigilance Commission

केन्द्रीय सतर्कता आयोग

Correct Answer: Election Commission

चुनाव आयोग

Candidate Answer: National Human Rights Commission

राष्ट्रीय मानव अधिकार आयोग

Question 39. The President can advance money to meet unforeseen expenses from the

राष्ट्रपति निम्नलिखित में से किस कोष से किसी अप्रत्याशित खर्च के लिए धन दे सकते हैं?

Options:

1) Consolidated Fund of India

भारत की समेकित निधि

2) Grants of the Central Government

केन्द्र सरकार का अनुदान

3) Aid from the Union Government

संघ सरकार की सहायता निधि

4) Contingency Fund

आकस्मिक निधि

Correct Answer: Contingency Fund

आकस्मिक निधि

Candidate Answer: Contingency Fund

आकस्मिक निधि

Question 40. The famous Vishnu temple at Angkor Wat in Cambodia was built by

कम्बोडिया में स्थित अंग्कोर वाट का सुप्रसिद्ध विष्णु-मन्दिर किसने बनवाया था ?

Options:

- 1) Shrutavarman
श्रुतवर्मन
- 2) Suryavarman II
सूर्यवर्मन II
- 3) Indravarman
इन्द्रवर्मन
- 4) Aniruddha
अनिरुद्ध

Correct Answer: Suryavarman II

सूर्यवर्मन II

Candidate Answer: [NOT ANSWERED]

Question 41. In IT, the technique of delaying outgoing acknowledgements temporarily is known as

आई.टी. में आउटगोइंग एक्नॉलेजमेंट को अस्थायी रूप से देर से भेजने की तकनीक को क्या कहते हैं ?

Options:

- 1) AR Acknowledgement
ए आर एक्नॉलेजमेंट
- 2) AR request
ए आर रिक्वेस्ट
- 3) Piggybacking
पिगीबैकिंग
- 4) Piggyframing
पिगीफ्रेमिंग

Correct Answer: Piggybacking

पिगीबैकिंग

Candidate Answer: [NOT ANSWERED]

Question 42. If speed of rotation of the earth increases, the weight of the body

यदि पृथ्वी के घूर्णन की गति बढ़ जाती है, तो शरीर का वजन

Options:

- 1) decreases
घट जाएगा
- 2) increases
बढ़ जाएगा
- 3) remains the same
वही रहेगा
- 4) may increase or decrease
घट या बढ़ सकता है

Correct Answer: decreases

घट जाएगा

Candidate Answer: may increase or decrease

घट या बढ़ सकता है

Question 43. Which among the following countries is facing debt crisis?

निम्नलिखित में से कौनसे देश में ऋण-संकट है ?

Options:

- 1) China
चीन
- 2) Canada
कनाडा
- 3) Germany
जर्मनी
- 4) Greece
यूनान (ग्रीस)

Correct Answer: Greece

यूनान (ग्रीस)

Candidate Answer: [NOT ANSWERED]

Question 44. The new symbol of Indian currency is designed by

भारतीय मुद्रा का नया प्रतीक-चिन्ह किसने डिज़ाइन किया था ?

Options:

- 1) Santosh Kumar
संतोष कुमार
- 2) Y.V. Reddy
वाई.वी. रेड्डी
- 3) Udayakumar
उदयकुमार
- 4) Dr. Rangarajan
डॉ. रंगराजन

Correct Answer: Udayakumar

उदयकुमार

Candidate Answer: Udayakumar

उदयकुमार

Question 45. What is MUDRA?

मुद्रा (MUDRA) क्या है ?

Options:

- 1) Development and Refinance Agency
विकास और पुनर्वित्त एजेंसी
- 2) Scheme for Agricultural Insurance
कृषि बीमा योजना
- 3) New Planet Discovered
खोजा गया नया ग्रह
- 4) Development and Regulatory Authority for Urban Township
शहरी नगरीकरण के लिए विकास और नियामक प्राधिकरण

Correct Answer: Development and Refinance Agency

विकास और पुनर्वित्त एजेंसी

Candidate Answer: Development and Regulatory Authority for Urban Township

शहरी नगरीकरण के लिए विकास और नियामक प्राधिकरण

Question 46. Which of the following is not correctly matched?

निम्नलिखित में से किसका मेल सही नहीं है ?

Options:

- 1) Sania Mirza - Tennis
सानिया मिर्जा - टेनिस
- 2) Sania Nehwal - Badminton
साईना नेहवाल - बैडमिंटन
- 3) Mary Kom - Boxing
मेरी कॉम - बॉक्सिंग
- 4) Pankaj Advani - Wrestling
पंकज आडवाणी - कुश्ती

Correct Answer: Pankaj Advani - Wrestling

पंकज आडवाणी - कुश्ती

Candidate Answer: Pankaj Advani - Wrestling

पंकज आडवाणी - कुश्ती

Question 47. Which of the following State is surrounded by Bangladesh from three sides?

निम्नलिखित में से किस राज्य के तीन तरफ बांग्लादेश की सीमा है ?

Options:

- 1) Nagaland
नागालैंड
- 2) Assam
असम
- 3) Arunachal Pradesh
अरुणाचल प्रदेश
- 4) Tripura
त्रिपुरा

Correct Answer: Tripura

त्रिपुरा

Candidate Answer: [NOT ANSWERED]

Question 48. Which enzyme digests proteins in the stomach?

आमाशय मेंएन्जाइम प्रोटीन को पचाने में मदद करता है ?

Options:

- 1) Trypsin
ट्रिपसीन
- 2) Pepsin
पेप्सिन
- 3) Salivary amylase
लार एमिलेस
- 4) Pancreatic canal
अगन्याशयी नली

Correct Answer: Pepsin

पेप्सिन

Candidate Answer: Pancreatic canal

अगन्याशयी नली

Question 49. Fermentation is a type of _____ process .

किण्वन एक प्रकार की _____ है।

Options:

- 1) Aerobic Respiration
वायु श्वसन
- 2) Anaerobic Respiration
अवायविय श्वसन
- 3) Exothermic Reaction
ऊष्मा उन्मोची अभिक्रिया
- 4) Transpiration
वाष्पोत्सर्जन

Correct Answer: Anaerobic Respiration

अवायविय श्वसन

Candidate Answer: Anaerobic Respiration

अवायविय श्वसन

Question 50. The first Muslim to be elected President of 'Indian National Congress' was?

भारतीय राष्ट्रीय कांग्रेस का चुनाव प्रथम मुस्लिम अध्यक्ष कौन था ?

Options:

- 1) Maulana Azad
मौलाना आज़ाद
- 2) Mohammed Ali
मुहम्मद अली
- 3) Badruddin Tyabji
बदरुद्दीन तय्यबजी
- 4) Shah Wali-ullah
शाह-वली-उल्लाह

Correct Answer: Badruddin Tyabji

बदरुद्दीन तय्यबजी

Candidate Answer: Maulana Azad

मौलाना आज़ाद

Question 51. A, B and C contract a work for ₹ 440. Together A and B are to do 9/11 of the work. The share of C should be:

A, B और C किसी काम को ₹ 440 में करने का ठेका लेते हैं। A और B को मिलकर 9/11 भाग काम करना है। C का शेयर क्या होना चाहिए ?

Options:

- 1) 75
- 2) 90
- 3) 100
- 4) 80

Correct Answer: 80**Candidate Answer:** 80

Question 52. A dealer marks a washing machine for ₹ 7500, and allows a discount of 6% on it. Find the selling price

एक विक्रेता वाशिंग मशीन पर अंकित मूल्य ₹ 7500 लिखता है और उस पर 6% की छूट देता है। उसका बिक्री मूल्य ज्ञात कीजिए ?

Options:

- 1) 6850
- 2) 7050
- 3) 7250
- 4) 6950

Correct Answer: 7050

Candidate Answer: 7050

Question 53. The sum of the cubes of two numbers in the ratio 3 : 4 is 5824. The sum of the numbers is:

3 : 4 के अनुपात में दो संख्याओं के घनों का योग 5824 है। संख्याओं का योग कितना है ?

Options:

1) $(5824)^{1/3}$

2) 28

3) 24

4) 14

Correct Answer: 28

Candidate Answer: [NOT ANSWERED]

Question 54. Loss of 20% on selling price is equal to x% loss in cost price. What is x?

बिक्री मूल्य पर 20% की हानि, लागत मूल्य में x% की हानि के बराबर है। x कितना है ?

Options:

1) 20%

2) 20

3)

$16\frac{2}{3}\%$

4) 16

Correct Answer:

$16\frac{2}{3}\%$

Candidate Answer: 20%

Question 55. In a motor of 120 machine parts, 5% parts were defective. In another motor of 80 machine parts, 10% parts were defective. For the two motors considered together, the percentage of defective machine parts were

120 मशीनी पुर्जों की मोटर में 5% पुर्जे खराब थे। 80 मशीनी पुर्जों की दूसरी मोटर में 10% पुर्जे खराब थे। दोनों मोटरों को मिलाकर खराब मशीनी पुर्जों का प्रतिशत कितना था ?

Options:

1) 7

2) 6.5

3) 7.5

4) 8

Correct Answer: 7

Candidate Answer: [NOT ANSWERED]

Question 56. If $(2^3)^2 = 4^x$ then 3^x is equal to

यदि $(2^3)^2 = 4^x$ हो, तो 3^x किसके बराबर है ?

Options:

1) 3

2) 6

3) 9

4) 27

Correct Answer: 27

Candidate Answer: 6

Question 57. A train, 200 m long, is running at a speed of 54 km/hr. The time in seconds that will be taken by train to cross a 175 m long bridge is

200 मीटर लम्बी एक ट्रेन 54 कि.मी./घंटा की गति से दौड़ रही है। 175 मीटर लम्बे पुल को वह कितने समय (सेकेण्ड) में पार करेगी ?

Options:

1) 12.5

2) 20

3) 25

4) 10

Correct Answer: 25

Candidate Answer: 12.5

Question 58. Which of the following ratios can be the ratio of the sides of a right angled triangle?

निम्नलिखित में से कौन-सा अनुपात समकोणीय त्रिभुज की भुजाओं का हो सकता है?

Options:

- 1) 9:6:3
- 2) 13:12:5
- 3) 7:6:5
- 4) 5:3:2

Correct Answer: 13:12:5

Candidate Answer: 9:6:3

Question 59. Number of circles that can be drawn through three non-collinear points is

तीन संरेख बिंदुओं से कितने वृत्त बनाए जा सकते हैं ?

Options:

- 1) exactly one
केवल एक
- 2) two
दो
- 3) three
तीन
- 4) more than three
तीन से अधिक

Correct Answer: exactly one

केवल एक

Candidate Answer: three

तीन

Question 60. Value of $(\cos 53^\circ - \sin 37^\circ)$ is

$(\cos 53^\circ - \sin 37^\circ)$ का मान क्या है ?

Options:

- 1) 0
- 2) 1
- 3) $2 \sin 37^\circ$
- 4) $2 \cos 53^\circ$

Correct Answer: 0

Candidate Answer: 0

Question 61.

If $4x + \frac{1}{x} = 5$, $x \neq 0$, then the value of $\frac{5x}{4x^2 + 10x + 1}$ is

यदि $4x + \frac{1}{x} = 5$ हो, तो $\frac{5x}{4x^2 + 10x + 1}$


का मान बताओ ?

Options:

- 1) $1/2$
- 2) $1/3$
- 3) $2/3$
- 4) 3

Correct Answer: $1/3$

Candidate Answer: [NOT ANSWERED]



Question 62.

If $C + \frac{1}{C} = \sqrt{3}$, then the value of $C^3 + \frac{1}{C^3}$ is equal to

यदि $C + \frac{1}{C} = \sqrt{3}$ है, तो $C^3 + \frac{1}{C^3}$ का मान
किसके बराबर है ?

Options:

1) 0

2) $3\sqrt{3}$

3) $1/\sqrt{3}$

4) $6\sqrt{3}$

Correct Answer: 0

Candidate Answer: 0

Question 63. What least value must be assigned to '*' so that the numbers $451 * 603$ is exactly divisible by 9?

'*' का न्यूनतम कितना मूल्य रखा जाए कि $451 * 603$ संख्या 9 से पूरी तरह विभाजित हो जाए ?

Options:

1) 7

2) 8

3) 5

4) 9

Correct Answer: 8

Candidate Answer: 8

Question 64. The average of 9 observations was found to be 35. Later on, it was detected that an observation 81 was misread as 18. The correct average of the observations is

9 प्रेक्षणों का औसत 35 देखा गया। बाद में पता चला कि प्रेक्षण 81 को गलती से 18 पढ़ा गया था। प्रेक्षणों का सही औसत कितना है ?

Options:

1) 28

2) 42

3) 32

4) 45

Correct Answer: 42

Candidate Answer: [NOT ANSWERED]

Question 65. If $x = 222$, $y = 223$, $z = 225$ then the value of $x^3 + y^3 + z^3 - 3xyz$ is

यदि $x = 222$, $y = 223$, $z = 225$ हो, तो $x^3 + y^3 + z^3 - 3xyz$ का मान क्या है ?

Options:

1) 4590

2) 4690

3) 4950

4) 4960

Correct Answer: 4690

Candidate Answer: 4960

Question 66.

If $x = 3^{1/3} - 3^{-1/3}$ then $3x^3 + 9x$ is equal to

यदि $x = 3^{1/3} - 3^{-1/3}$ है, तो $3x^3 + 9x$ का
मान किसके बराबर है ?

Options:

1) 5

2) 6

3) 7

4) 8

Correct Answer: 8

Candidate Answer: [NOT ANSWERED]

Question 67. Two circles touch each other internally. The radius of the smaller circle is 6 cm and the distance between the centre of two circles is 3 cm. The radius of the larger circle is

दो वृत्त एक दूसरे को अंदर की ओर स्पर्श करते हैं। छोटे वृत्त की त्रिज्या 6 से.मी. है, और दोनों वृत्तों के केंद्रों के बीच दूरी 3 से.मी. है। बड़े वृत्त की त्रिज्या कितनी है ?

Options:

1) 7.5 cm

7.5 से.मी.

2) 9 cm

9 से.मी.

3) 8 cm

8 से.मी.

4) 10 cm

10 से.मी.

Correct Answer: 9 cm

9 से.मी.

Candidate Answer: 9 cm

9 से.मी.

Question 68. PQR is an equilateral triangle. MN is drawn parallel to QR such that M is on PQ and N is on PR. If PN = 6 cm, then the length of MN is

PQR एक समबाहु त्रिभुज है। MN, QR के समांतर इस प्रकार बनाया गया है कि M, PQ पर है और N, PR पर है। यदि PN = 6 से.मी. हो, तो MN की लम्बाई कितनी होगी ?

Options:

1) 3 cm

3 से.मी.

2) 6 cm

6 से.मी.

3) 12 cm

12 से.मी.

4) 4.5 cm

4.5 से.मी.

Correct Answer: 6 cm

6 से.मी.

Candidate Answer: [NOT ANSWERED]

Question 69. If $\operatorname{cosec} \theta + \sin \theta = 5/2$ then the value of $\operatorname{cosec} \theta - \sin \theta$ is

यदि $\operatorname{cosec} \theta + \sin \theta = 5/2$ है, तब $\operatorname{cosec} \theta - \sin \theta$ का मान ज्ञात कीजिए ?

Options:

1) $-3/2$

2) $3/2$

3) $-\sqrt{3}/2$

4) $\sqrt{3}/2$

Correct Answer: $3/2$

Candidate Answer: [NOT ANSWERED]

Question 70. Two men are on opposite sides of a tower. They measure the angles of elevation of the top of the tower as 30° and 45° respectively. If the height of the tower is 50 m, the distance between the two men is (Take $\sqrt{3} = 1.73$)

दो व्यक्ति एक टॉवर की विपरीत दिशाओं में खड़े हैं। वे टॉवर के शीर्ष का उन्नत कोण क्रमशः 30° और 45° मापते हैं। यदि टॉवर की ऊंचाई 50 मीटर है तो दोनों व्यक्तियों के बीच की दूरी कितनी है ? (माना $\sqrt{3} = 1.73$)

Options:

1) 136.5 m

136.5 मी.

2) $50\sqrt{3}$ m

$50\sqrt{3}$ मी.

3) $100\sqrt{3}$ m

$100\sqrt{3}$ मी.

4) 135.5 m

135.5 मी.

Correct Answer: 136.5 m

136.5 मी.

Candidate Answer: [NOT ANSWERED]

Question 71. The radius and the height of a cone are each increased by 20%. Then the volume of the cone increases by

एक शंकु की त्रिज्या और ऊंचाई प्रत्येक को 20% बढ़ा दिया जाता है। तो शंकु का आयतन कितना बढ़ जाएगा ?

Options:

1) 20%

2) 20.5%

3) 62%

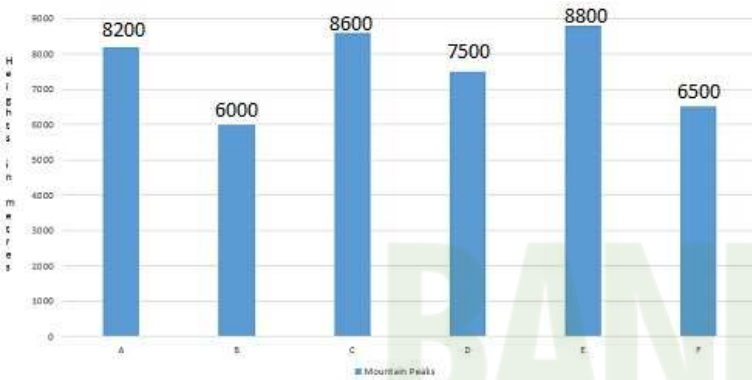
4) 72.8%

Correct Answer: 72.8%

Candidate Answer: 72.8%

Question 72. A bar graph showing the heights of six mountain peaks. Study the bar graph and answer questions

बार ग्राफ का अध्ययन कीजिए और नम्नलिखित प्रश्नों के उत्तर दीजिए। ग्राफ में 6 पर्वत शिखरों की ऊंचाई दर्शायी गयी है।



The average height of all the peaks (in meters) is

ग्राफ में 6 पर्वत शिखरों की ऊंचाई दर्शायी गयी है। सभी शिखरों की औसतन ऊंचाई (मीटर में) ज्ञात कीजिए ?

Options:

1) 7601.5

2) 7600

3) 7599.5

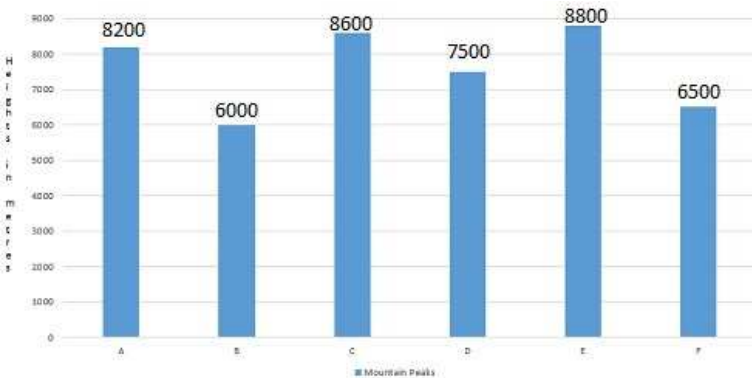
4) 7610

Correct Answer: 7600

Candidate Answer: [NOT ANSWERED]

Question 73. A bar graph showing the heights of six mountain peaks. Study the bar graph and answer questions

बार ग्राफ का अध्ययन कीजिए और नम्नलिखित प्रश्नों के उत्तर दीजिए। ग्राफ में 6 पर्वत शिखरों की ऊंचाई दर्शायी गयी है।



Which peak is the second highest ?

दूसरा सबसे ऊंचा शिखर कौनसा है ?

Options:

1) B

2) C

3) A

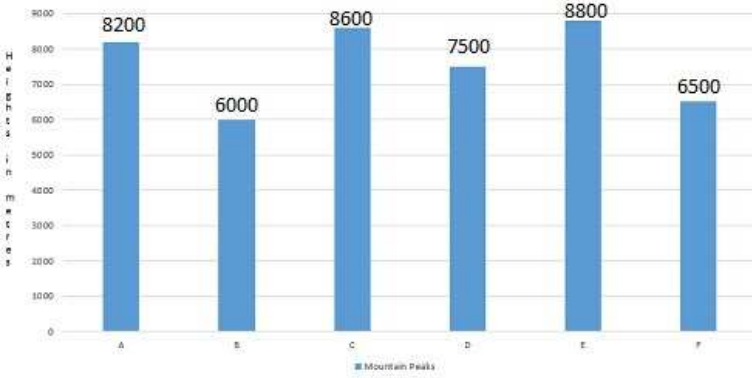
4) E

Correct Answer: C

Candidate Answer: C

Question 74. A bar graph showing the heights of six mountain peaks. Study the bar graph and answer questions

बार ग्राफ का अध्ययन कीजिए और नम्नलिखित प्रश्नों के उत्तर दीजिए। ग्राफ में 6 पर्वत शिखरों की ऊंचाई दर्शायी गयी है।



Write the ratio of the heights of the highest peak and the lowest peak

उच्चतम शिखर और निम्नतम शिखर की ऊंचाई का अनुपात बताइए ?

Options:

1) 22:15

2) 15:22

3) 20:13

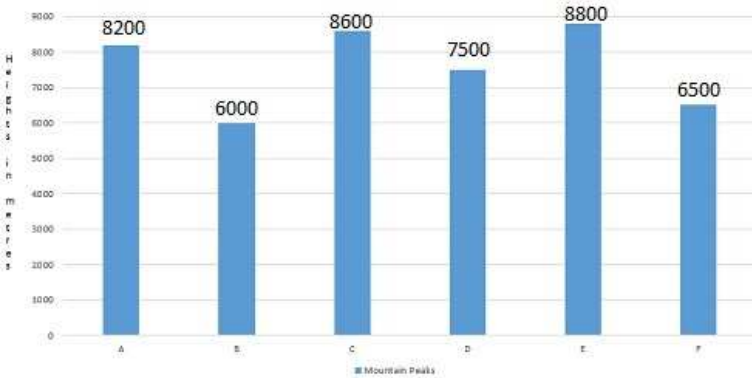
4) 13:22

Correct Answer: 22:15

Candidate Answer: 22:15

Question 75. A bar graph showing the heights of six mountain peaks. Study the bar graph and answer questions

बार ग्राफ का अध्ययन कीजिए और नम्नलिखित प्रश्नों के उत्तर दीजिए। ग्राफ में 6 पर्वत शिखरों की ऊंचाई दर्शायी गयी है।



When the heights of the given peaks are written in ascending order, what is the average of the middle two peaks?

यदि दिए गए पर्वत शिखरों की ऊंचाई आरोही क्रम में लिखी जाती है, तो मध्य के दो शिखरों का औसत क्या है ?

Options:

1) 7950 m

7950 मी.

2) 7560 m

7560 मी.

3) 7650 m

7650 मी.

4) 7850 m

7850 मी.

Correct Answer: 7850 m

7850 मी.

Candidate Answer: 7850 m

7850 मी.

Question 76. In the following question, out of the four alternatives, choose the word which best expresses the meaning of the given word and click the button corresponding to it.

CREDULOUS

Options:

- 1) FUNNY
- 2) SILLY
- 3) INNOCENT
- 4) GULLIBLE

Correct Answer: GULLIBLE

Candidate Answer: FUNNY

Question 77. In the following question, out of the four alternatives, choose the word which is opposite in meaning to the given word and click the button corresponding to it.

REASSURE

Options:

- 1) COMFORT
- 2) CONSOLE
- 3) INSPIRE
- 4) DISCOURAGE

Correct Answer: DISCOURAGE

Candidate Answer: DISCOURAGE

Question 78. Four words are given, out of which only one word is spelt correctly. Choose the correctly spelt word and click the button corresponding to it.

Options:

- 1) Defiance
- 2) Defyance
- 3) Difiance
- 4) Defiance

Correct Answer: Defiance

Candidate Answer: Difiance

Question 79. In the following questions, one part of the sentence may have an error. Find out which part of the sentence has an error and click the button corresponding to it. If the sentence is free from error, click the "No error" option.

Too great a (A)/ variety of studies (B)/ distract the mind (C)/ No Error (D)

Options:

- 1) A
- 2) B
- 3) C
- 4) D

Correct Answer: C

Candidate Answer: A

Question 80. In the following questions, one part of the sentence may have an error. Find out which part of the sentence has an error and click the button corresponding to it. If the sentence is free from error, click the "No error" option.

The severe cyclonic storm (A)/ has left behind (B)/ a trial of misery (C)/ No Error (D)

Options:

- 1) A
- 2) B
- 3) C
- 4) D

Correct Answer: C

Candidate Answer: B

Question 81. In the following questions, one part of the sentence may have an error. Find out which part of the sentence has an error and click the button corresponding to it. If the sentence is free from error, click the "No error" option.

My sister has been (A)/ interested in medicine (B)/ ever since she was a child (C)/ No Error (D)

Options:

- 1) A
- 2) B
- 3) C
- 4) D

Correct Answer: D

Candidate Answer: D

Question 82. The sentences given with blanks are to be filled with an appropriate word(s). Four alternatives are suggested for each question. For each question, choose the correct alternative and click the button corresponding to it.

It is _____ university of excellence.

Options:

- 1) a
- 2) an
- 3) also
- 4) one

Correct Answer: a**Candidate Answer:** an

Question 83. The sentences given with blanks are to be filled with an appropriate word(s). Four alternatives are suggested for each question. For each question, choose the correct alternative and click the button corresponding to it.

They have not had much time for social activities and I have not _____ .

Options:

- 1) done so
- 2) either
- 3) also
- 4) gone

Correct Answer: either**Candidate Answer:** gone

Question 84. The sentences given with blanks are to be filled with an appropriate word(s). Four alternatives are suggested for each question. For each question, choose the correct alternative and click the button corresponding to it.

Food was packed, and they _____, a merry, delighted party.

Options:

- 1) went off
- 2) start off
- 3) cut off
- 4) set off

Correct Answer: set off**Candidate Answer:** set off

Question 85. In each of the questions, four alternatives are given for the Idiom/Phrase. Choose the alternative which best expresses the meaning of the Idiom/Phrase and click the button corresponding to it.

pull a fast one

Options:

- 1) as fast as lightning
- 2) play a trick
- 3) carry a heavy burden
- 4) take a deep breath

Correct Answer: play a trick**Candidate Answer:** play a trick

Question 86. In each of the questions, four alternatives are given for the Idiom/Phrase. Choose the alternative which best expresses the meaning of the Idiom/Phrase and click the button corresponding to it.

grease the palm

Options:

- 1) dirty one's hands
- 2) work in a garage
- 3) slip and fall
- 4) bribe

Correct Answer: bribe**Candidate Answer:** slip and fall

Question 87. In each of the questions, four alternatives are given for the Idiom/Phrase. Choose the alternative which best expresses the meaning of the Idiom/Phrase and click the button corresponding to it.

turn turtle

Options:

- 1) slow like a turtle
- 2) turn like a turtle
- 3) over-turn
- 4) a game turtles play

Correct Answer: over-turn**Candidate Answer:** slow like a turtle

Question 88. Out of the four alternatives, choose the one which can be substituted for the given words/sentences and click the button corresponding to it.

Action that is likely to make people very angry

Options:

- 1) Inflationary
- 2) Inflammable
- 3) Commensurable
- 4) Inflammatory

Correct Answer: Inflammatory**Candidate Answer:** Inflammatory

Question 89.Out of the four alternatives, choose the one which can be substituted for the given words/sentences and click the button corresponding to it.

A humorous drawing dealing with current events or politics.

Options:

- 1) Sketch
- 2) Illustration
- 3) Cartoon
- 4) Skit

Correct Answer: Cartoon

Candidate Answer: [NOT ANSWERED]

Question 90.Out of the four alternatives, choose the one which can be substituted for the given words/sentences and click the button corresponding to it.

Act of mercy killing

Options:

- 1) Suicide
- 2) Euthanasia
- 3) Immolation
- 4) Asphyxiation

Correct Answer: Euthanasia

Candidate Answer: Asphyxiation

Question 91.A sentence/a part of the sentence is underlined. Four alternatives are given to the underlined part which will improve the sentence. Choose the correct alternative and click the button corresponding to it. In case no improvement is needed, click the button corresponding to "No improvement".

They have had a real good time.

Options:

- 1) have had a
- 2) have had really
- 3) have had a really
- 4) No improvement

Correct Answer: have had a really

Candidate Answer: have had a really

Question 92.A sentence/a part of the sentence is underlined. Four alternatives are given to the underlined part which will improve the sentence. Choose the correct alternative and click the button corresponding to it. In case no improvement is needed, click the button corresponding to "No improvement".

Electricity has modernized the march of modern events.

Options:

- 1) revolutionised
- 2) developed
- 3) created
- 4) No improvement

Correct Answer: revolutionised

Candidate Answer: created

Question 93.A sentence/a part of the sentence is underlined. Four alternatives are given to the underlined part which will improve the sentence. Choose the correct alternative and click the button corresponding to it. In case no improvement is needed, click the button corresponding to "No improvement".

The sales boy told the consumer not to touch the products on display.

Options:

- 1) buyer
- 2) shopper
- 3) customer
- 4) No improvement

Correct Answer: customer

Candidate Answer: buyer

Question 94.A sentence/a part of the sentence is underlined. Four alternatives are given to the underlined part which will improve the sentence. Choose the correct alternative and click the button corresponding to it. In case no improvement is needed, click the button corresponding to "No improvement".

Please make it a point to send the letter at my address.

Options:

- 1) on
- 2) to
- 3) in
- 4) No improvement

Correct Answer: to

Candidate Answer: on

Question 95.A sentence/a part of the sentence is underlined. Four alternatives are given to the underlined part which will improve the sentence. Choose the correct alternative and click the button corresponding to it. In case no improvement is needed, click the button corresponding to "No improvement".

Sunil and I helped to sell tickets.

Options:

- 1) we
- 2) us
- 3) me
- 4) No improvement

Correct Answer: No improvement**Candidate Answer:** me

Question 96. A passage is given with 5 questions following it. Read the passage carefully and choose the best answer to each question out of the four alternatives and click the button corresponding to it.

To know language is to be able to speak it; even a child who does not yet attend school can speak his or her language. In order to speak a language it is important to listen to it and to read a few pages in it everyday. A child picks up language and learns to talk just as (s)he learns to walk. Walking and talking comes naturally to a child as it grows. In our country, a child may grow up speaking more than one language, if these languages are spoken in the home and in the neighbourhood. We call this multilingualism. A child speaks a language or languages much before (s)he starts going to school. To know a language then is first of all to be able to speak it as easily and naturally as a three year old child does. Later on the child will learn to read and write in that language. In order to read and write in a language, one has to speak it. But it is possible to speak a language but not able to read or write in it. A baby does not speak until it is nine months old but it understands a few words at six months of age. It has been listening ever since it was born, and even a little before that. So the first strategy in speaking a language is to listen.

One of the activities of a child before it is even born is _____ .

Options:

- 1) seeing
- 2) listening
- 3) understanding
- 4) talking

Correct Answer: listening**Candidate Answer:** understanding

Question 97. A passage is given with 5 questions following it. Read the passage carefully and choose the best answer to each question out of the four alternatives and click the button corresponding to it.

To know language is to be able to speak it; even a child who does not yet attend school can speak his or her language. In order to speak a language it is important to listen to it and to read a few pages in it everyday. A child picks up language and learns to talk just as (s)he learns to walk. Walking and talking comes naturally to a child as it grows. In our country, a child may grow up speaking more than one language, if these languages are spoken in the home and in the neighbourhood. We call this multilingualism. A child speaks a language or languages much before (s)he starts going to school. To know a language then is first of all to be able to speak it as easily and naturally as a three year old child does. Later on the child will learn to read and write in that language. In order to read and write in a language, one has to speak it. But it is possible to speak a language but not able to read or write in it. A baby does not speak until it is nine months old but it understands a few words at six months of age. It has been listening ever since it was born, and even a little before that. So the first strategy in speaking a language is to listen.

It is necessary for one to _____ the language before (s)he writes in that language.

Options:

- 1) sing
- 2) spell
- 3) speak
- 4) none of the above

Correct Answer: speak**Candidate Answer:** speak

Question 98. A passage is given with 5 questions following it. Read the passage carefully and choose the best answer to each question out of the four alternatives and click the button corresponding to it.

To know language is to be able to speak it; even a child who does not yet attend school can speak his or her language. In order to speak a language it is important to listen to it and to read a few pages in it everyday. A child picks up language and learns to talk just as (s)he learns to walk. Walking and talking comes naturally to a child as it grows. In our country, a child may grow up speaking more than one language, if these languages are spoken in the home and in the neighbourhood. We call this multilingualism. A child speaks a language or languages much before (s)he starts going to school. To know a language then is first of all to be able to speak it as easily and naturally as a three year old child does. Later on the child will learn to read and write in that language. In order to read and write in a language, one has to speak it. But it is possible to speak a language but not able to read or write in it. A baby does not speak until it is nine months old but it understands a few words at six months of age. It has been listening ever since it was born, and even a little before that. So the first strategy in speaking a language is to listen.

Multi-lingualism means

Options:

- 1) speaking more than one language
- 2) speaking only one language
- 3) speaking any language
- 4) speech

Correct Answer: speaking more than one language**Candidate Answer:** speaking any language

Question 99. A passage is given with 5 questions following it. Read the passage carefully and choose the best answer to each question out of the four alternatives and click the button corresponding to it.

To know language is to be able to speak it; even a child who does not yet attend school can speak his or her language. In order to speak a language it is important to listen to it and to read a few pages in it everyday. A child picks up language and learns to talk just as (s)he learns to walk. Walking and talking comes naturally to a child as it grows. In our country, a child may grow up speaking more than one language, if these languages are spoken in the home and in the neighbourhood. We call this multilingualism. A child speaks a language or languages much before (s)he starts going to school. To know a language then is first of all to be able to speak it as easily and naturally as a three year old child does. Later on the child will learn to read and write in that language. In order to read and write in a language, one has to speak it. But it is possible to speak a language but not able to read or write in it. A baby does not speak until it is nine months old but it understands a few words at six months of age. It has been listening ever since it was born, and even a little before that. So the first strategy in speaking a language is to listen.

A child has been _____ ever since it was born

Options:

- 1) speaking
- 2) reading
- 3) walking
- 4) listening

Correct Answer: listening**Candidate Answer:** listening

Question 100. A passage is given with 5 questions following it. Read the passage carefully and choose the best answer to each question out of the four alternatives and click the button corresponding to it.

To know language is to be able to speak it; even a child who does not yet attend school can speak his or her language. In order to speak a language it is important to listen to it and to read a few pages in it everyday. A child picks up language and learns to talk just as (s)he learns to walk. Walking and talking comes naturally to a child as it grows. In our country, a child may grow up speaking more than one language, if these languages are spoken in the home and in the neighbourhood. we call this multilingualism. A child speaks a language or languages much before (s)he starts going to school. To know a language then is first of all to be able to speak it as easily and naturally as a three year old child does. Later on the child will learn to read and write in that language. In order to read and write in a language, one has to speak it. But it is possible to speak a language but not able to read or write in it. A baby does not speak until it is nine months old but it understands a few words at six months of age. It has been listening ever since it was born, and even a little before that. So the first strategy in speaking a language is to listen.

To know a language one must be able to?

Options:

- 1) Speak it as easily and naturally as a three year old child.
- 2) Read it well all the time.
- 3) Write it quickly
- 4) Sing in the language

Correct Answer: Speak it as easily and naturally as a three year old child.**Candidate Answer:** Speak it as easily and naturally as a three year old child.