



**Staff Selection Commission**  
(Government Of India)

**REGISTRATION NUMBER : 7001700077**  
**EXAM DATE : 28-August-2016**  
**EXAM NAME : SSC Examination 2016**  
**TOTAL MARKS : 200**

**CANDIDATE NAME : RAINA TANVEER**  
**EXAM START TIME : 10:00:00**  
**EXAM DURATION : 01:15 Hrs**  
**TOTAL NO OF QUESTIONS : 100**

Question 1. Select the related word/letters/numbers from the given alternatives:

दिये गये विकल्पों में से संबंधित शब्द/अक्षरों/संख्या को चुनिए।

**Electric Current : Ampere :: Weight : ?**

विद्युत् प्रवाह : ऐम्पियर :: भार : ?

**Options:**

- 1) Scale  
स्केल
- 2) Kilogram  
किलोग्राम
- 3) Commodity  
वस्तु
- 4) Measurement  
माप

**Correct Answer:** Kilogram

किलोग्राम

**Candidate Answer:** Kilogram

किलोग्राम

Question 2. Select the related word/letters/numbers from the given alternatives:

दिये गये विकल्पों में से संबंधित शब्द/अक्षरों/संख्या को चुनिए।

ACXZ : BDWY :: CEVX : ?

**Options:**

- 1) DFUZ
- 2) DFUW
- 3) DGUW
- 4) DFUV

**Correct Answer:** DFUW

**Candidate Answer:** DFUV

Question 3. Select the related word/letters/numbers from the given alternatives:

दिये गये विकल्पों में से संबंधित शब्द/अक्षरों/संख्या को चुनिए।

37 : 65 :: 50 : ?

**Options:**

- 1) 75
- 2) 79
- 3) 82
- 4) 87

**Correct Answer:** 82

**Candidate Answer:** [ NOT ANSWERED ]

Question 4.

**For the following questions**

Find the odd word/letters/number from the given alternatives.

निम्नलिखित प्रश्न में दिए गए विकल्पों में से विषम शब्द/अक्षर/संख्या को चुनिए ?

**Options:**

1) Thermometer

थर्मामीटर

2) Barometer

बैरोमीटर

3) Diameter

डायामीटर

4) Hygrometer

हाइग्रोमीटर

**Correct Answer:** Diameter

डायामीटर

**Candidate Answer:** Diameter

डायामीटर

Question 5.

**For the following questions**

Find the odd word/letters/number from the given alternatives.

निम्नलिखित प्रश्न में दिए गए विकल्पों में से विषम शब्द/अक्षर/संख्या को चुनिए ?

**Options:**

1) JF

2) UQ

3) PL

4) XS

**Correct Answer:** XS

**Candidate Answer:** XS

Question 6.

**For the following questions**

Find the odd word/letters/number from the given alternatives.

निम्नलिखित प्रश्न में दिए गए विकल्पों में से विषम शब्द/अक्षर/संख्या को चुनिए ?

**Options:**

1) 46-52

2) 56-62

3) 66-72

4) 76-84

**Correct Answer:** 76-84

**Candidate Answer:** [ NOT ANSWERED ]

Question 7. Arrange the following words as per their order in the dictionary

निम्नलिखित शब्दों को शब्दकोश में दिए गए क्रम के अनुसार लिखिए ?

1. Embody 2. Embrace 3. Embitter 4. Emblem 5. Embroidery

**Options:**

1) 3, 4, 2, 5, 1

2) 4, 2, 5, 1, 3

3) 4, 1, 2, 5, 3

4) 3, 4, 1, 2, 5

**Correct Answer:** 3, 4, 1, 2, 5**Candidate Answer:** 3, 4, 1, 2, 5

Question 8.A series is given, with one term missing. Choose the correct alternative from the given ones that will complete the series.

निम्नलिखित प्रश्न में एक अनुक्रम दिया गया है, जिसमें एक पद लुप्त है। दिए गए विकल्पों में से वह सही विकल्प चुनिए जो अनुक्रम को पूरा करे ?  
CBA, FED, IHG, LKJ, ?

**Options:**

1) PRT

2) VUT

3) ONM

4) ZYX

**Correct Answer:** ONM**Candidate Answer:** ONM

Question 9.A series is given, with one term missing. Choose the correct alternative from the given ones that will complete the series.

निम्नलिखित प्रश्न में एक अनुक्रम दिया गया है, जिसमें एक पद लुप्त है। दिए गए विकल्पों में से वह सही विकल्प चुनिए जो अनुक्रम को पूरा करे ?  
6, 12, 36, 144, 720, 4320, ?

**Options:**

1) 30420

2) 30240

3) 31240

4) 32240

**Correct Answer:** 30240**Candidate Answer:** [ NOT ANSWERED ]

Question 10.Introducing a woman, a man said "Her mother is the only daughter of my mother-in-law". How is the man related to the woman?

एक महिला का परिचय देते हुए पुरुष ने कहा, " कि उसकी माता मेरी सास की एक मात्र पुत्री है।" पुरुष का महिला के साथ क्या संबंध है ?

**Options:**

1) Son

पुत्र

2) Brother

भाई

3) Husband

पति

4) Father

पिता

**Correct Answer:** Father

पिता

**Candidate Answer:** [ NOT ANSWERED ]

Question 11.Five children are standing in a row. O is third from M who is standing left of N, and P is on the left of Q who is fourth from N. What is the position of P from right?

पांच बच्चों एक पंक्ति में खड़े हैं। O, M से तीसरा है, जो N के बायीं ओर खड़ा है। P, Q के बायीं ओर है, जो N से चौथा है। दायीं ओर से P का स्थान कौन-सा है ?

**Options:**

1) Third

तीसरा

2) First

पहला

3) Fourth

चौथा

4) Second

दूसरा

**Correct Answer:** Second

दूसरा

**Candidate Answer:** [ NOT ANSWERED ]

Question 12. From the given alternative words, select the word which cannot be formed using the letters of the given word:

निम्नलिखित विकल्पों में से वह शब्द चुनिए जो दिए गए शब्द के अक्षरों का प्रयोग करके नहीं बनाया जा सकता ?

INTELLIGENCE

**Options:**

1) GENTLE

2) TEEN

3) GREEN

4) ENGINE

**Correct Answer:** GREEN

**Candidate Answer:** GREEN

Question 13. If "GOAT" is coded as "HPBU", then how will "FROG" be coded as?

यदि 'GOAT' को किसी कोड में 'HPBU' लिखा जा सकता है। तो 'FROG' को उसी कोड में क्या लिखा जाएगा ?

**Options:**

1) GSPH

2) PHSG

3) GSHP

4) PSHG

**Correct Answer:** GSPH

**Candidate Answer:** GSPH

Question 14. In a certain code language, '@' represents '+', '⊕' represents '-', 'a' represents '÷' and 'θ' represents 'x'. Find out the answer to the following question:

किसी कोड भाषा में @ का मतलब + है, ⊕ का मतलब - है, a का मतलब ÷ है, और θ का मतलब x है। तो निम्नलिखित प्रश्न का उत्तर दीजिए।

$8900a100⊕5θ4⊕121a11 = ?$

**Options:**

1) 58

2) 62

3) 158

4) 205

**Correct Answer:** 58

**Candidate Answer:** 58

Question 15. Some equations are solved on the basis of a certain system. On the same basis, find out the correct answer from amongst the four alternatives to the unsolved equation

कुछ समीकरण एक निश्चित प्रणाली से हल किए गए हैं। उसी आधार पर हल न किये गये प्रश्न को हल करके दिए गए विकल्पों में से सही उत्तर चुनिए ?

$1 \times 2 \times 3 = 231$

$3 \times 4 \times 5 = 453$

$5 \times 6 \times 7 = ?$

**Options:**

1) 657

2) 675

3) 756

4) 765

**Correct Answer:** 675

**Candidate Answer:** 675

Question 16. Select the missing numbers from the given alternatives

दिए गए विकल्पों में से लुप्त अंक ज्ञात कीजिए ?

4	3	6
3	5	4
2	2	3
14	16	?

**Options:**

1) 12

2) 18

3) 20

4) 30

**Correct Answer:** 30

**Candidate Answer:** [ NOT ANSWERED ]

Question 17. Rajneesh started walking towards North. He took a left turn after walking 20 metres. He again took a right turn after walking 30 metres. Which direction is he facing now?

रजनीश ने उत्तर की ओर चलना शुरू किया। वह 20 मीटर चलने के बाद बाएं मुड़ गया। 30 मीटर चलने के बाद वह फिर से दाईं ओर मुड़ गया। इस समय उसका चेहरा किस दिशा में है ?

**Options:**

1) North

उत्तर

2) East

पूर्व

3) West

पश्चिम

4) South

दक्षिण

**Correct Answer:** North

उत्तर

**Candidate Answer:** North

उत्तर

Question 18. Consider the given statement/s to be true and decide which of the given conclusions/assumptions can definitely be drawn from the given statement.

**Statements:** 1. All books are trees. 2. All trees are lions. **Conclusions:** I. All books are lions. II. All lions are books. III. All trees are books IV. Some lions are books.

निम्नलिखित प्रश्न में एक या दो वक्तव्य दिये गये हैं, जिसके आगे चार निष्कर्ष/मान्यताएं, I, II, III और IV निकाले गये हैं। आपको विचार करना है कि वक्तव्य सत्य है चाहे वह सामान्यतः ज्ञात तथ्यों से भिन्न प्रतीत होता हो। आपको निर्णय करना है कि दिए गए वक्तव्य में से कौन-सा निश्चित रूप से सही निष्कर्ष/मान्यता निकाला जा सकता है ?

वक्तव्य : 1. सभी पुस्तकें वृक्ष हैं।

2. सभी वृक्ष शेर हैं।

निष्कर्ष : I सभी पुस्तकें शेर हैं।

II सभी शेर पुस्तकें हैं।

III सभी वृक्ष पुस्तकें हैं।

IV कुछ शेर पुस्तकें हैं।

**Options:**

1) Only conclusions I and III follow

केवल निष्कर्ष I और III सही है।

2) Only conclusions I and IV follow

केवल निष्कर्ष I और IV सही है।

3) None of the conclusions follow

कोई भी निष्कर्ष सही नहीं है।

4) All conclusions follow

सभी निष्कर्ष सही है।

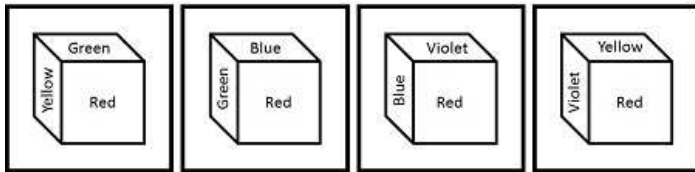
**Correct Answer:** Only conclusions I and IV follow

केवल निष्कर्ष I और IV सही है।

**Candidate Answer:** [ NOT ANSWERED ]

Question 19. In the given cube, which colour is opposite to Blue?

प्रश्न आकृति में नीले के सामने कौन-सा रंग है ?



**Options:**

1) Green

हरा

2) Red

लाल

3) Violet

बैंगनी

4) Yellow

पीला

**Correct Answer:** Yellow

पीला

**Candidate Answer:** Yellow

पीला

Question 20. Identify the relationship that best represents the relationship among classes given below:

वह आरेख बताइए जो निम्नलिखित श्रेणियों के बीच सही सम्बन्ध को दर्शाता है।

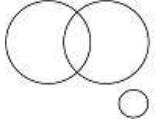
Professors, Women and Clerks

**Options:**

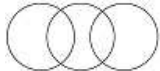
1)



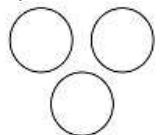
2)



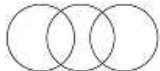
3)




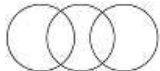
4)



**Correct Answer:**

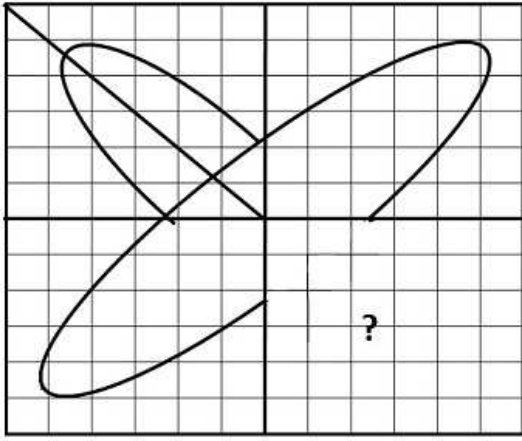


**Candidate Answer:**



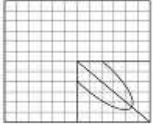
Question 21. Which answer figure will complete the pattern in the question figure?

कौन-सी उत्तर आकृति प्रश्न आकृति के प्रतिरूप को पूरा करेगी ?

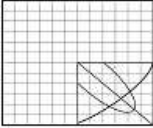


Options:

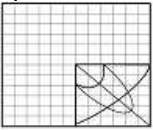
1)



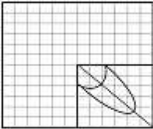
2)



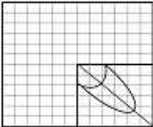
3)




4)



Correct Answer:

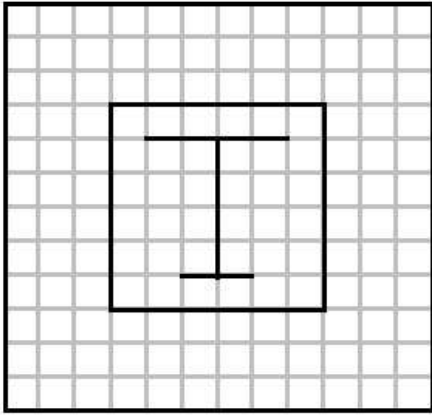


Candidate Answer:



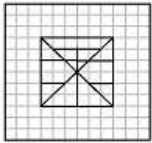
Question 22. From the given answer figures, select the one in which the question figure is hidden/embedded

दी गई उत्तर आकृतियों में से उस उत्तर आकृति को चुनिए जिसमें प्रश्न आकृति निहित है ?

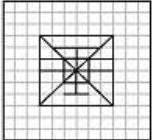


Options:

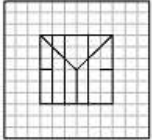
1)



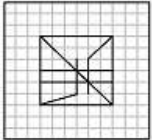
2)



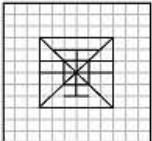
3)




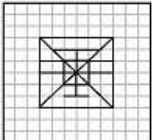
4)



Correct Answer:



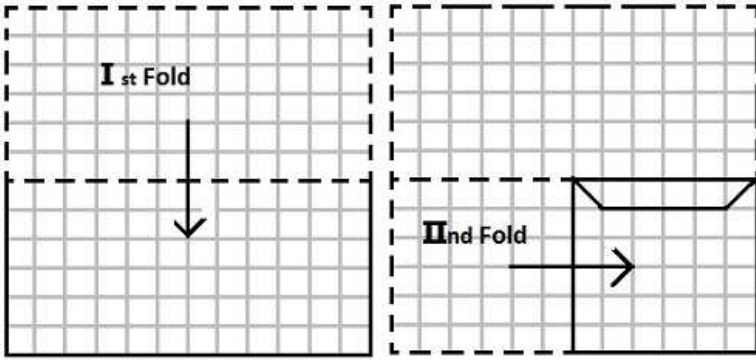
Candidate Answer:



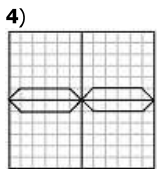
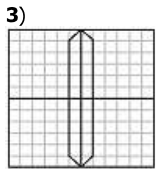
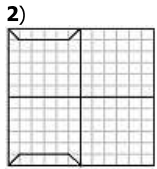
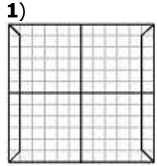


Question 23. A piece of paper is folded and cut as shown below in the question figures, indicate how it will appear when opened.

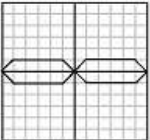
यदि किसी कागज को नीचे दिखाए प्रश्न के अनुसार मोड़कर काटा जाए तो खोलने के बाद वह किस उत्तर आकृति जैसा दिखाई देगा ?




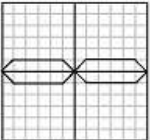
Options:



Correct Answer:

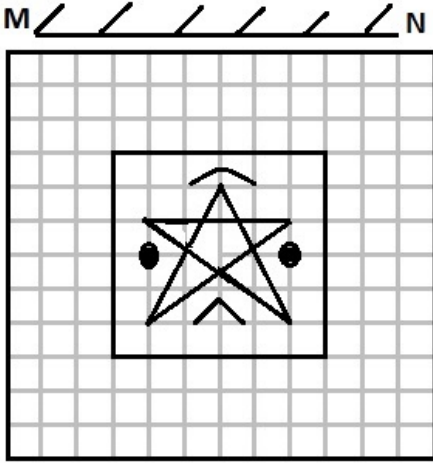


Candidate Answer:



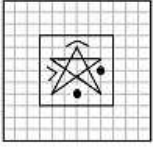
Question 24.If a mirror is placed on the line MN, then which of the answer figures is the right image of the given figure?

यदि एक दर्पण को MN रेखा पर रखा जाए तो दी गई उत्तर आकृतियों में से कौन-सी आकृति प्रश्न आकृति का सही प्रतिबिम्ब होगी ?

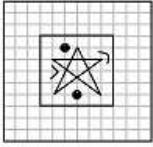


Options:

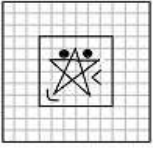
1)



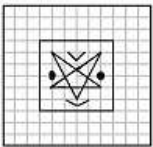
2)



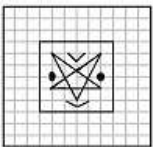
3)




4)



Correct Answer:



Candidate Answer: [ NOT ANSWERED ]



Question 25. A word is represented by only one set of numbers as given in any one of the alternatives. The sets of numbers given in the alternatives are represented by two classes of alphabets as in two matrices given below. The columns and rows of Matrix I are numbered from 0 to 4 and that of Matrix II are numbered from 5 to 9. A letter from these matrices can be represented first by its row and next by its column, e.g., 'D' can be represented by 01, 13, etc., and 'H' can be represented by 55, 67, etc.

Similarly you have to identify the set for the word 'LIKE'

निम्नलिखित प्रश्न में एक शब्द केवल एक संख्या-समूह द्वारा दर्शाया गया है, जैसा कि विकल्पों में से किसी एक में दिया गया है। विकल्पों में दिए गए संख्या - समूह अक्षरों के दो वर्गों द्वारा दर्शाए गए हैं, जैसा कि नीचे दिए गए दो आव्यूहों में हैं। आव्यूह I के स्तम्भ और पंक्ति की संख्या 0 से 4 तक दी गई है और आव्यूह II की 5 से 9 तक इन आव्यूहों से एक अक्षर को पहले उसकी पंक्ति और बाद में स्तम्भ संख्या द्वारा दर्शाया जा सकता है। उदाहरण के लिए, D को 01, 13, आदि द्वारा दर्शाया जा सकता है तथा H को 55, 67, आदि द्वारा दर्शाया जा सकता है। इसी तरह से आपको दिए शब्द 'LIKE' के लिए समूह को पहचानना है।

**MATRIX I**

	0	1	2	3	4
0	C	D	E	F	G
1	F	G	C	D	E
2	D	E	F	G	C
3	E	F	G	C	D
4	G	C	D	E	F

**MATRIX II**

	5	6	7	8	9
5	H	K	L	I	N
6	I	N	H	K	L
7	K	L	I	N	H
8	L	I	N	H	K
9	N	H	K	L	I

**Options:**

- 1) 56, 58, 03, 02
- 2) 57, 65, 62, 02
- 3) 56, 62, 03, 02
- 4) 57, 68, 40, 02

**Correct Answer:** 57, 65, 62, 02

**Candidate Answer:** [ NOT ANSWERED ]

Question 26. What is 'net neutrality'?

"नेट न्यूट्रैलिटी" क्या है ?

**Options:**

- 1) Internet Service Providers and governments should treat all data on the internet equally  
इंटरनेट सेवा प्रदाता कंपनियों (ISP) और सरकारों को इंटरनेट में पाए जाने वाले सभी डाटा के साथ समान रूप से व्यवहार करना चाहिए
- 2) Piracy in internet must be curbed  
इंटरनेट में अवैध नकल को रोकना चाहिए
- 3) Internet users must give out balanced opinions in social media sites  
इंटरनेट उपभोक्ता को सामाजिक माध्यम पर संतुलित प्रतिक्रिया / टिप्पणी देना चाहिए।
- 4) Internet should be kept free from malware and virus  
अवांछित और हानिकारक मैलवेयर और वायरस से इंटरनेट को मुक्त रखना चाहिए

**Correct Answer:** Internet Service Providers and governments should treat all data on the internet equally

इंटरनेट सेवा प्रदाता कंपनियों (ISP) और सरकारों को इंटरनेट में पाए जाने वाले सभी डाटा के साथ समान रूप से व्यवहार करना चाहिए

**Candidate Answer:** Internet Service Providers and governments should treat all data on the internet equally

इंटरनेट सेवा प्रदाता कंपनियों (ISP) और सरकारों को इंटरनेट में पाए जाने वाले सभी डाटा के साथ समान रूप से व्यवहार करना चाहिए

Question 27. Excise duty is levied on

उत्पाद शुल्क किस पर लगाया जाता है ?

**Options:**

- 1) sale of goods  
माल के बिक्री पर
- 2) production of goods  
माल के उत्पादन पर
- 3) import of goods  
माल के आयात पर
- 4) export of goods  
माल के निर्यात पर

**Correct Answer:** production of goods

माल के उत्पादन पर

**Candidate Answer:** production of goods

माल के उत्पादन पर

Question 28. Golden Revolution in India refers to growth of:

स्वर्ण क्रान्ति किसकी बढ़त को इंगित करती है?

**Options:**

1) Militancy in the north-east.

उत्तर-पूरब में उग्रवाद

2) Oilseeds production

तेल-बीज का उत्पादन

3) Horticulture

बागवानी

4) Increased importing of gold

सोने के आयात में बढ़त

**Correct Answer:** Oilseeds production

तेल-बीज का उत्पादन

**Candidate Answer:** Oilseeds production

तेल-बीज का उत्पादन

Question 29. Water is used in a hot water bag because

गरम जल-बैग में जल का उपयोग किया जाता है क्योंकि \_\_\_\_\_

**Options:**

1) It is easily available

वह आसानी से मिलता है

2) It has high specific gravity

उसका विशिष्ट गुरुत्वाकर्षण ज्यादा है

3) It has high specific heat

उसका विशिष्ट ऊष्मा ज्यादा है

4) It is a liquid substance

वह एक तरल पदार्थ है

**Correct Answer:** It has high specific heat

उसका विशिष्ट ऊष्मा ज्यादा है

**Candidate Answer:** It has high specific heat

उसका विशिष्ट ऊष्मा ज्यादा है

Question 30. What is the meaning of "Public Interest Litigation"?

जनहित याचिका का मतलब क्या है?

**Options:**

1) Anything of public interest

कुछ भी जिसमें जनहित हो

2) A case brought by victim to court, involving public interest.

पीड़ित व्यक्ति द्वारा अदालत में जनहित में लाया गया मुकदमा

3) A case brought by anyone to court involving public interest.

किसी व्यक्ति द्वारा अदालत में जनहित में लाया गया मुकदमा

4) A directive issued by Supreme Court involving public interest

सर्वोच्च न्यायालय द्वारा जनहित में जारी किया गया निर्देश

**Correct Answer:** A case brought by anyone to court involving public interest.

किसी व्यक्ति द्वारा अदालत में जनहित में लाया गया मुकदमा

**Candidate Answer:** A case brought by anyone to court involving public interest.

किसी व्यक्ति द्वारा अदालत में जनहित में लाया गया मुकदमा

Question 31. Who referred to Mahatma Gandhi as "Father of the Nation" for the first time?

महात्मा गाँधी को सबसे पहले "राष्ट्रपिता" के नाम से किसने सम्बोधित किया था?

**Options:**

1) Jawaharlal Nehru

जवाहरलाल नेहरू

2) Sardar Vallabh Bhai Patel

सरदार वल्लभ भाई पटेल

3) C. Rajgopalachari

सी. राजगोपालाचारी

4) Subhash Chandra Bose

सुभाषचन्द्र बोस

**Correct Answer:** Subhash Chandra Bose

सुभाषचन्द्र बोस

**Candidate Answer:** Subhash Chandra Bose

सुभाषचन्द्र बोस

Question 32. Which title, given by the British Government to Mahatma Gandhi, was surrendered during the non-cooperation movement?

अंग्रेज़ (ब्रिटिश) सरकार द्वारा महात्मा गाँधी को दी गई कौन सी पदवी असहयोग आंदोलन के समय लौटा दी गई थी?

**Options:**

- 1) Hind Kesari  
हिंद केसरी
- 2) Rai Bahadur  
राय बहादुर
- 3) Rt. Honourable  
राइट ऑनरबल
- 4) Kaiser-e-Hind  
कैसर-ए-हिंद

**Correct Answer:** Kaiser-e-Hind

कैसर-ए-हिंद

**Candidate Answer:** Kaiser-e-Hind

कैसर-ए-हिंद

Question 33. The temperature of a liquid is 32° F. What is its temperature in Celsius scale?

यदि एक तरल पदार्थ का तापमान 32° F है तो सेल्सियस में उसका तापमान कितना है?

**Options:**

- 1) 32° C
- 2) 0° C
- 3) 100° C
- 4) 212° C

**Correct Answer:** 0° C

**Candidate Answer:** 0° C

Question 34. The point where total mass of a body is supposed to be concentrated is known as

शरीर का वह भाग जिस पर शरीर का समस्त भार केन्द्रित होता है, वह किस नाम से जाना जाता है ?

**Options:**

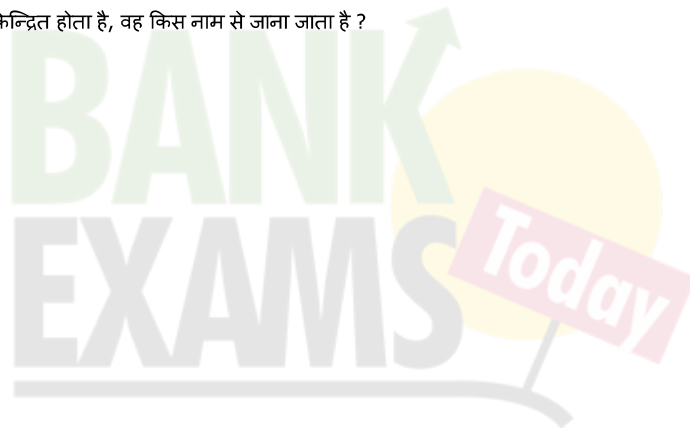
- 1) Dead centre  
डेड सेंटर
- 2) Centre of mass  
सेन्टर ऑफ मास
- 3) Centre of gravity  
सेन्टर ऑफ ग्रेविटी
- 4) Centre of motion  
सेन्टर ऑफ मोशन

**Correct Answer:** Centre of mass

सेन्टर ऑफ मास

**Candidate Answer:** Centre of mass

सेन्टर ऑफ मास



Question 35. Which part of brain is also known as "little brain"?

मस्तिष्क के कौनसे हिस्से को "लघु मस्तिष्क" के नाम से भी जाना जाता है ?

**Options:**

- 1) Cerebrum  
सेरिब्रम
- 2) Cerebellum  
सेरीबेल्लम
- 3) Thalamus  
थालामस
- 4) Hypothalamus  
हाइपोथालामस

**Correct Answer:** Cerebellum

सेरीबेल्लम

**Candidate Answer:** Cerebrum

सेरिब्रम

Question 36. Which organism is responsible for alcohol fermentation?

कौनसा जीव अल्कोहल किण्वन करता है ?

**Options:**

- 1) Chlorella  
क्लोरेल्ला
- 2) Yeast  
यीस्ट (खमीर)
- 3) Agaricus  
एगेरिकस
- 4) Puccinia  
प्युक्कीनिया

**Correct Answer:** Yeast

यीस्ट (खमीर)

**Candidate Answer:** [ NOT ANSWERED ]

Question 37. Which of the following groups of rivers have their source of origin in Tibet?

निम्नलिखित में से किन नदी समूहों का तिब्बत में जन्म होता है ?

**Options:**

- 1) Brahmaputra, Indus & Sutlej  
ब्रह्मपुत्र, सिंधु और सतलज
- 2) Ganga, Sutlej & Yamuna  
गंगा, सतलज और यमुना
- 3) Brahmaputra, Ganga & Sutlej  
ब्रह्मपुत्र, गंगा और सतलज
- 4) Chenab, Ravi & Sutlej  
चिनाब, रावी और सतलज

**Correct Answer:** Brahmaputra, Indus & Sutlej

ब्रह्मपुत्र, सिंधु और सतलज

**Candidate Answer:** Brahmaputra, Indus & Sutlej

ब्रह्मपुत्र, सिंधु और सतलज

Question 38. The most ideal region for the cultivation of cotton in India is

कपास की खेती के लिए भारत में सबसे उत्तम प्रदेश कौनसा है?

**Options:**

- 1) The Brahmaputra Valley  
ब्रह्मपुत्र घाटी
- 2) The Deccan Plateau  
दक्कन का पठार
- 3) The Indo-Gangetic Valley  
सिन्धु-गंगा घाटी
- 4) The Rann of Kutch  
रान ऑफ कच्छ

**Correct Answer:** The Deccan Plateau

दक्कन का पठार

**Candidate Answer:** The Deccan Plateau

दक्कन का पठार

Question 39. Where do the electrical charges reside in a charged conductor?

किसी आवेशित संवाहक पदार्थ में विद्युत शक्ति कहाँ रहती है?

**Options:**

- 1) at the core  
केंद्रीय भाग में
- 2) throughout the body  
पूरे शरीर में
- 3) depended upon the nature of the body  
शरीर की प्रकृति पर निर्भर करती है
- 4) outer surface of the body  
बाहरी सतह पर

**Correct Answer:** outer surface of the body

बाहरी सतह पर

**Candidate Answer:** [ NOT ANSWERED ]

Question 40. The colour of the ocean appears to be blue because the sunlight falling on it is

समुद्र का रंग नीला दिखता है क्योंकि उसके ऊपर गिरने वाली सूर्य की किरण का \_\_\_\_\_ होता है ।

**Options:**

- 1) reflected  
परावर्तन
- 2) refracted  
दिशा-परिवर्तन
- 3) diffracted  
विवर्तन
- 4) scattered  
प्रकीर्णन

**Correct Answer:** scattered

प्रकीर्णन

**Candidate Answer:** scattered

प्रकीर्णन

Question 41. In which mode can the computers that are associated send frames directly to each other?

किस दशा (मोड) में संबंधित कंप्यूटर एक दूसरे को फ्रेम सीधे भेज सकते हैं ?

**Options:**

- 1) Adhoc mode  
एडहॉक मोड
- 2) Infrastructure mode  
इन्फ्रास्ट्रक्चर मोड
- 3) Structured mode  
स्ट्रक्चर्ड मोड
- 4) Anonymous mode  
एनॉनिमस मोड

**Correct Answer:** Adhoc mode

एडहॉक मोड

**Candidate Answer:** [ NOT ANSWERED ]

Question 42. What was the immediate cause of the Mutiny of 1857?

1857 की क्रांति का तात्कालिक कारण क्या था ?

**Options:**

- 1) The discontentment of the soldiers  
जवानों में असंतुष्टता
- 2) The use of greased cartridges in the new Enfield Rifle  
नई एनफील्ड राइफल में चरबी लगायी गोलियों का उपयोग
- 3) The social conditions of India  
भारत की सामाजिक अवस्था
- 4) The introduction of railways and telegraphs  
रेलवे और टेलीग्राफ की शुरुआत

**Correct Answer:** The use of greased cartridges in the new Enfield Rifle

नई एनफील्ड राइफल में चरबी लगायी गोलियों का उपयोग

**Candidate Answer:** The use of greased cartridges in the new Enfield Rifle

नई एनफील्ड राइफल में चरबी लगायी गोलियों का उपयोग

Question 43. Who introduced the "Doctrine of Lapse" to expand British territories in India?

भारत में ब्रिटिश साम्राज्य को फैलाने के उद्देश्य से किसने "डॉक्ट्रीन ऑफ लाप्स" सिद्धान्त लागू किया था?

**Options:**

- 1) Lord Hastings  
लॉर्ड हॉस्टिंग्स
- 2) Lord Wellesley  
लॉर्ड वेलेसली
- 3) Lord William Bentinck  
लॉर्ड विलियम बेंटिक
- 4) Lord Dalhousie  
लॉर्ड डलहौजी

**Correct Answer:** Lord Dalhousie

लॉर्ड डलहौजी

**Candidate Answer:** Lord Wellesley

लॉर्ड वेलेसली

Question 44. HRIDAY scheme launched by Urban Development Ministry aims at

शहरी विकास मंत्रालय द्वारा "हृदय" योजना शुरू करने का उद्देश्य क्या है?

**Options:**

- 1) Education of girl child  
बच्चियों की शिक्षा
- 2) Development of smart cities  
स्मार्ट शहरों का विकास
- 3) Urban sewage treatment  
नगरीय मल प्रशोधन
- 4) Development of heritage sites  
सांस्कृतिक धरोहरों एवं स्थानों का विकास

**Correct Answer:** Development of heritage sites  
सांस्कृतिक धरोहरों एवं स्थानों का विकास

**Candidate Answer:** Development of heritage sites  
सांस्कृतिक धरोहरों एवं स्थानों का विकास

Question 45. Global warming is expected to result in

"ग्लोबल वार्मिंग" से निम्न में से क्या परिणाम अपेक्षित है ?

**Options:**

- 1) Increase in sea level  
समुद्री स्तर में वृद्धि
- 2) Change in crop pattern  
फसलों में बदलाव
- 3) Change in coastal line  
तट रेखा में बदलाव
- 4) All of these  
सभी विकल्प सही हैं

**Correct Answer:** All of these  
सभी विकल्प सही हैं

**Candidate Answer:** Increase in sea level  
समुद्री स्तर में वृद्धि

Question 46. Who appoints and dismisses the gazetted officials of the Union Government?

संघीय सरकार के राजपत्रित अधिकारियों को निम्नलिखित में से कौन नियुक्त और बर्खास्त कर सकता है ?

**Options:**

- 1) The President of India  
भारत के राष्ट्रपति
- 2) The Prime Minister of India  
भारत के प्रधान मंत्री
- 3) The Home Minister of India  
भारत के गृह मंत्री
- 4) The Finance Minister of India  
भारत के वित्त मंत्री

**Correct Answer:** The President of India  
भारत के राष्ट्रपति

**Candidate Answer:** The President of India  
भारत के राष्ट्रपति

Question 47. The industry having the largest investment in Indian Economy is?

भारतीय अर्थव्यवस्था में निम्नलिखित में से कौनसे उद्योग में सबसे ज्यादा निवेश किया गया है ?

**Options:**

- 1) Tea  
चाय
- 2) Cement  
सीमेंट
- 3) Steel  
इस्पात
- 4) Jute  
पटसन

**Correct Answer:** Steel  
इस्पात

**Candidate Answer:** Steel  
इस्पात

Question 48. Ajanta Ellora Caves are situated near which of the following cities?

अजन्ता ऐलोरा की गुफाएँ निम्नलिखित में से कौन से शहर के पास स्थित हैं ?



**Options:**

- 1) Mount Abu  
माउन्ट आबु
- 2) Aurangabad  
औरंगाबाद
- 3) Bijapur  
बिजापुर
- 4) Madurai  
मदुरई

**Correct Answer:** Aurangabad

औरंगाबाद

**Candidate Answer:** Aurangabad

औरंगाबाद

Question 49. Which of the following is a name of US Parliament?

अमेरिकी संसद का नाम क्या है ?

**Options:**

- 1) Diet  
डाइट
- 2) Senate  
सीनेट
- 3) Congress  
कांग्रेस
- 4) House of Commons  
हाउस ऑफ कॉमन्स

**Correct Answer:** Congress

कांग्रेस

**Candidate Answer:** Congress

कांग्रेस

Question 50. Charles Correa is a renowned Indian

चार्ल्स कोरिया एक भारतीय ख्यातिप्राप्त \_\_\_\_\_ है।

**Options:**

- 1) Freedom fighter  
स्वतंत्रता सेनानी
- 2) Painter  
चित्रकार
- 3) Architect, urban planner  
वास्तुकार, नगर योजना विशेषज्ञ (प्लानर)
- 4) Award winning doctor  
पुरस्कृत डॉक्टर

**Correct Answer:** Architect, urban planner

वास्तुकार, नगर योजना विशेषज्ञ (प्लानर)

**Candidate Answer:** Architect, urban planner

वास्तुकार, नगर योजना विशेषज्ञ (प्लानर)

Question 51. A father can do job as fast as 2 sons working together. If one son does the job in 3 hours and the other in 6 hours, the number of hours taken by the father, to do the job alone is

एक पिता उतनी जल्दी किसी काम को कर सकता है जितनी जल्दी उसके दो बेटे मिलकर कर सकते हैं। यदि एक बेटा 3 घण्टे में काम कर सकता है और दूसरा 6 घण्टे में कर सकता है तो उस काम को करने में पिता को कितना समय लगेगा ?

**Options:**

- 1) 1
- 2) 2
- 3) 3
- 4) 4

**Correct Answer:** 2

**Candidate Answer:** 2

Question 52. The perimeter of a rhombus is 240 m and the distance between any two parallel sides is 20 m. The area of the rhombus in sq.m. is

एक समचतुर्भुज का परिमाप 240 मी. है और किन्हीं दो समांतर भुजाओं के बीच की दूरी 20 मी. है। समचतुर्भुज का क्षेत्रफल कितने वर्गमीटर है ?

**Options:**

- 1) 600
- 2) 1200
- 3) 2400
- 4) 4800

**Correct Answer:** 1200**Candidate Answer:** [ NOT ANSWERED ]

Question 53. A man sold an article for Rs. 450, after allowing a discount of  $16\frac{2}{3}\%$  on the printed price. What is that printed price?

एक व्यक्ति ने मुद्रित मूल्य पर  $16\frac{2}{3}\%$  की छूट देने के बाद कोई वस्तु Rs. 450 में बेची। मुद्रित मूल्य कितना है ?

**Options:**

- 1) Rs.525
- 2) Rs.530
- 3) Rs.535
- 4) Rs.540

**Correct Answer:** Rs.540**Candidate Answer:** [ NOT ANSWERED ]

Question 54. A sum of Rs. 770 has been divided among A, B, C in such a way that A receives  $\frac{2}{9}$ th of what B and C together receive. Then A's share is

Rs. 770 को A, B, C में इस प्रकार विभाजित किया गया है कि जितना धन B और C को मिलाकर मिला उसका  $\frac{2}{9}$  वाँ हिस्सा A को मिला। A का हिस्सा कितना है ?

**Options:**

- 1) Rs.140
- 2) Rs.154
- 3) Rs.165
- 4) Rs.170

**Correct Answer:** Rs.140**Candidate Answer:** [ NOT ANSWERED ]

Question 55. A man bought 4 dozen eggs at ₹ 24 per dozen and 2 dozen eggs at ₹ 32 per dozen. To gain 20% on the whole, he should sell the eggs at

एक आदमी ने 4 दर्जन अण्डे ₹ 24 प्रति दर्जन तथा 2 दर्जन अण्डे ₹ 32 प्रति दर्जन के भाव से खरीदे। कुल अण्डों पर 20% का लाभ प्राप्त करने के लिए वह अण्डों को किस भाव पर बेचेगा ?

**Options:**

- 1) ₹ 16 per dozen  
₹ 16 प्रति दर्जन
- 2) ₹ 21 per dozen  
₹ 21 प्रति दर्जन
- 3) ₹ 32 per dozen  
₹ 32 प्रति दर्जन
- 4) ₹ 35 per dozen  
₹ 35 प्रति दर्जन

**Correct Answer:** ₹ 32 per dozen

₹ 32 प्रति दर्जन

**Candidate Answer:** [ NOT ANSWERED ]

Question 56. P's salary is 25% higher than Q, what percentage is Q's salary lower than that of P?

P का वेतन Q के वेतन से 25% अधिक है। Q का वेतन P के वेतन से कितना % कम है ?

**Options:**

- 1) 20
- 2) 29
- 3) 31
- 4)  $33\frac{1}{3}$

**Correct Answer:** 20**Candidate Answer:** [ NOT ANSWERED ]

Question 57. A and B start running at the same time and from the same point around a circle. If A can complete one round in 40 seconds and B in 50 seconds, how many seconds will they take to reach the starting point simultaneously?

A और B एक ही समय पर और एक ही बिन्दु से वृत्त के चारों ओर दौड़ना शुरू करते हैं। यदि A एक चक्कर 40 सेकण्ड में लगाए और B 50 सेकण्ड में लगाए, तो उन्हें प्रारम्भिक बिंदु पर एक साथ पहुँचने में कितना समय लगेगा ?

**Options:**

1) 10

2) 200

3) 90

4) 2000

**Correct Answer:** 200

**Candidate Answer:** [ NOT ANSWERED ]

Question 58.

If  $x - \frac{1}{3x} = \frac{1}{3}$  the value of  $3x(x - \frac{1}{3x})$  is

यदि  $x - \frac{1}{3x} = \frac{1}{3}$  हो तो  $3x(x - \frac{1}{3x})$  का मान क्या है ?

**Options:**

1) -1

2) 1

3) -2

4) 2

**Correct Answer:** 1

**Candidate Answer:** [ NOT ANSWERED ]

Question 59.

If  $P = 3 + \frac{1}{p}$ , the value of  $p^4 + \frac{1}{p^4}$  is:

यदि  $P = 3 + \frac{1}{p}$  हो तो  $p^4 + \frac{1}{p^4}$  का मान क्या है ?

**Options:**

1) 81

2) 27

3) 120

4) 119

**Correct Answer:** 119

**Candidate Answer:** [ NOT ANSWERED ]

Question 60.  $\Delta ABC$  is an isosceles triangle with  $AB = AC = 15$  cm and altitude from A on BC is 12 cm. Length of side BC is

$\Delta ABC$  एक समद्विबाहु त्रिभुज है जिसका  $AB = AC = 15$  से.मी. और BC पर A से शीर्ष लम्ब 12 से.मी. है। भुजा BC की लम्बाई कितनी है ?

**Options:**

1) 9 cm

9 से.मी.

2) 12 cm

12 से.मी.

3) 18 cm

18 से.मी.

4) 20 cm

20 से.मी.

**Correct Answer:** 18 cm

18 से.मी.

**Candidate Answer:** [ NOT ANSWERED ]

Question 61. The mid points of AB and AC of a triangle ABC are respectively X & Y. If  $BC + XY = 12$  units, then the value of  $BC - XY$  is:

एक त्रिभुज ABC के AB और AC के मध्य बिन्दु क्रमशः X और Y हैं। यदि  $BC + XY = 12$  यूनिट हो तो  $BC - XY$  का मान कितना है ?

**Options:**

- 1) 2 units  
2 यूनिट
- 2) 6 units  
6 यूनिट
- 3) 8 units  
8 यूनिट
- 4) 4 units  
4 यूनिट

**Correct Answer:** 4 units

4 यूनिट

**Candidate Answer:** [ NOT ANSWERED ]

Question 62.

*Which of the following relations is correct for  $0 < \theta < 90^\circ$ ?* $0 < \theta < 90^\circ$  के लिए निम्नलिखित में से कौन-सा संबंध सही है ?**Options:**

- 1)  $\sin\theta = \sin^2\theta$
- 2)  $\sin\theta < \sin^2\theta$
- 3)  $\sin\theta > \sin^2\theta$
- 4)  $\sin\theta = \operatorname{cosec}\theta$

**Correct Answer:**  $\sin\theta > \sin^2\theta$ **Candidate Answer:**  $\sin\theta = \sin^2\theta$ 

Question 63. The difference between two numbers is 9 and the difference between their squares is 207. The numbers are

दो संख्याओं के बीच अंतर 9 है और उनके वर्गों के बीच अंतर 207 है। संख्याएँ क्या हैं ?

**Options:**

- 1) 17, 8
- 2) 16, 7
- 3) 15, 6
- 4) 23, 14

**Correct Answer:** 16, 7**Candidate Answer:** 16, 7

Question 64. The average of 20 numbers is calculated as 35. It is discovered later on that while calculating the average, one number, namely 85, was read as 45. The correct average is

20 संख्याओं का औसत 35 परिकल्पित किया गया है। बाद में यह देखा गया कि औसत का परिकल्पन करते समय एक संख्या 85 को गलती से 45 पढ़ा गया था। सही औसत क्या है ?

**Options:**

- 1) 36
- 2) 36.5
- 3) 37
- 4) 37.5

**Correct Answer:** 37**Candidate Answer:** 37Question 65. If  $x^2 - xy + y^2 = 2$  and  $x^4 + x^2y^2 + y^4 = 6$ , then the value of  $x^2 + xy + y^2$  is:यदि  $x^2 - xy + y^2 = 2$  और  $x^4 + x^2y^2 + y^4 = 6$  हो तो  $x^2 + xy + y^2$  का मान क्या है ?**Options:**

- 1) 1
- 2) 12
- 3) 3
- 4) 36

**Correct Answer:** 3**Candidate Answer:** [ NOT ANSWERED ]

Question 66.If  $a^2 + 13b^2 + c^2 - 4ab - 6bc = 0$ , then a:b:c is

यदि  $a^2 + 13b^2 + c^2 - 4ab - 6bc = 0$ , तो a:b:c का मान क्या है ?

**Options:**

1) 1:2:3

2) 2:3:1

3) 2:1:3

4) 1:3:2

**Correct Answer:** 2:1:3

**Candidate Answer:** [ NOT ANSWERED ]

Question 67.The circum-centre of a triangle ABC is O. If  $\angle BAC = 85^\circ$ ,  $\angle BCA = 75^\circ$ , then  $\angle OAC$  is of

एक त्रिभुज ABC का परिकेन्द्र O है। यदि  $\angle BAC = 85^\circ$ ,  $\angle BCA = 75^\circ$ , तो  $\angle OAC$  कितना होगा ?

**Options:**

1)  $70^\circ$

2)  $72^\circ$

3)  $75^\circ$

4)  $74^\circ$

**Correct Answer:**  $70^\circ$

**Candidate Answer:** [ NOT ANSWERED ]

Question 68.Radius of the incircle of an equilateral  $\Delta ABC$  of sides  $2\sqrt{3}$  units is x cm. The value of x is

$2\sqrt{3}$  यूनिट वाले एक समबाहु  $\Delta ABC$  के अंत वृत्त की त्रिज्या x से.मी. है तो x का मान क्या है ?

**Options:**

1)  $\frac{1}{3}$

2)  $\frac{1}{2}$

3) 1

4)  $\sqrt{3}$

**Correct Answer:** 1

**Candidate Answer:** [ NOT ANSWERED ]

Question 69.

If  $\tan 3\theta \cdot \tan 7\theta = 1$ , then the value of  $\tan(\theta + 36^\circ)$  is

यदि  $\tan 3\theta \cdot \tan 7\theta = 1$ , हो तो  $\tan(\theta + 36^\circ)$  का मान क्या है ?

**Options:**

1)  $\frac{1}{\sqrt{3}}$

2) 0

3) 1

4)  $\sqrt{3}$

**Correct Answer:** 1

**Candidate Answer:** 1

Question 70.If the angle of elevation of a cloud from a point 200 m above a lake is  $30^\circ$  and the angle of depression of its reflection in the lake is  $60^\circ$ . Then the height of the cloud above the lake is

यदि एक झील के 200 मी ऊपर के बिंदु से बादल का उन्नयन कोण  $30^\circ$  और झील में उसके परावर्तन का अवनति कोण  $60^\circ$  हो, तो झील के ऊपर बादल की ऊँचाई कितनी है ?

**Options:**

1) 100 m

100 मी.

2) 200 m

200 मी.

3) 300 m

300 मी.

4) 400 m

400 मी.

**Correct Answer:** 400 m

400 मी.

**Candidate Answer:** 100 m

100 मी.

Question 71. The difference between the simple interest and compound interest (compounded annually) on Rs. 40,000 for 3 years at 8% per annum is

8% प्रतिवर्ष की दर पर Rs. 40,000 का 3 वर्ष के साधारण ब्याज और चक्रवृद्धि ब्याज (जिसे प्रतिवर्ष संयोजित किया जाता हो) का अंतर कितना है ?

**Options:**

1) Rs.684.32

2) Rs.788.48

3) Rs.784.58


4) Rs.4000

**Correct Answer:** Rs.788.48

**Candidate Answer:** [ NOT ANSWERED ]

Question 72. The pie-chart shows Distribution of Special Children Population during the year 1994-96. Study the pie-chart and answer the following questions.

निम्नलिखित पाई-चार्ट में वर्ष 1994-96 में विशेष बच्चों की जनसंख्या का वितरण दर्शाया गया है। पाई-चार्ट का अध्ययन कीजिए और निम्नलिखित प्रश्नों का उत्तर दीजिए ।



Find the approximate percentage distribution of children with auditory disorder.

श्रवण बाधा वाले बच्चों का अनुमानित प्रतिशत वितरण ज्ञात कीजिए ?

**Options:**

1) 43.7%

2) 42.7%

3) 41.7%

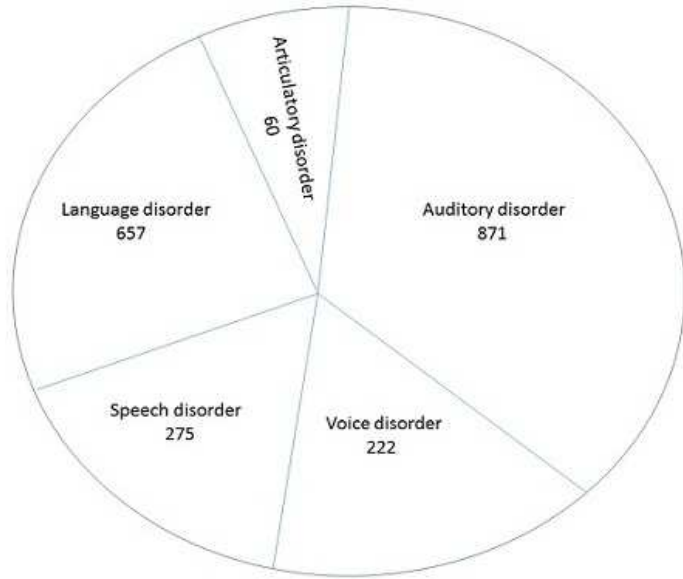
4) 40.7%

**Correct Answer:** 41.7%

**Candidate Answer:** [ NOT ANSWERED ]

Question 73. The pie-chart shows Distribution of Special Children Population during the year 1994-96. Study the pie-chart and answer the following questions.

निम्नलिखित पाई-चार्ट में वर्ष 1994-96 में विशेष बच्चों की जनसंख्या का वितरण दर्शाया गया है। पाई-चार्ट का अध्ययन कीजिए और निम्नलिखित प्रश्नों का उत्तर दीजिए ।



What is the average number of cases in different types of special children during the year 1994-96.

वर्ष 1994-96 में विभिन्न प्रकार के विशेष बच्चों की औसत संख्या कितनी है?

**Options:**

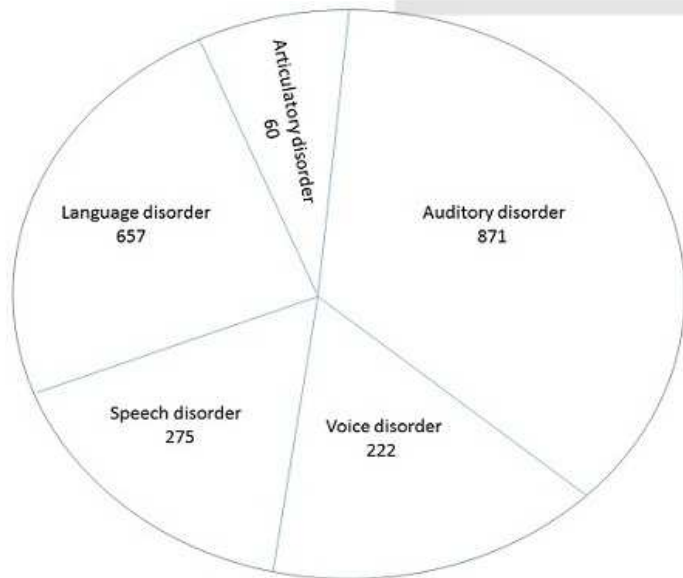
- 1) 417
- 2) 413
- 3) 433
- 4) 465

**Correct Answer:** 417

**Candidate Answer:** [ NOT ANSWERED ]

Question 74. The pie-chart shows Distribution of Special Children Population during the year 1994-96. Study the pie-chart and answer the following questions.

निम्नलिखित पाई-चार्ट में वर्ष 1994-96 में विशेष बच्चों की जनसंख्या का वितरण दर्शाया गया है। पाई-चार्ट का अध्ययन कीजिए और निम्नलिखित प्रश्नों का उत्तर दीजिए ।



Find the ratio between articulatory disorder and speech disorder cases.

उच्चारण बाधा और वाक् बाधा वाले बच्चों के बीच अनुपात ज्ञात कीजिए ?

**Options:**

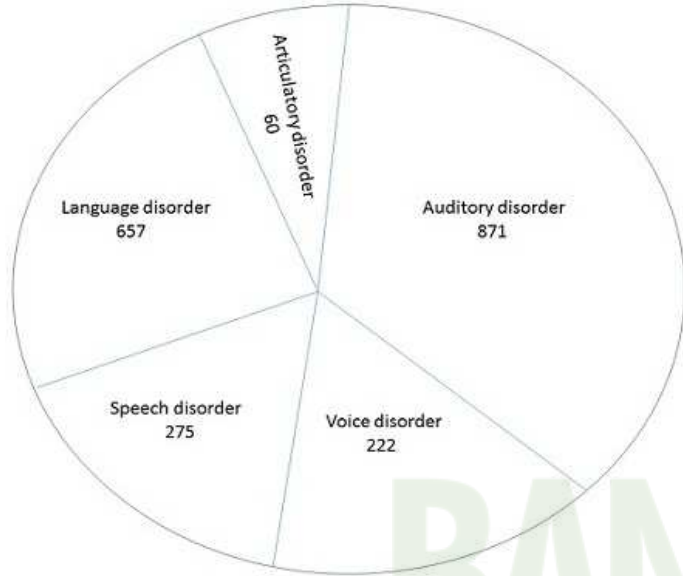
- 1) 21:55
- 2) 55:21
- 3) 55:12
- 4) 12:55

**Correct Answer:** 12:55

**Candidate Answer:** [ NOT ANSWERED ]

Question 75. The pie-chart shows Distribution of Special Children Population during the year 1994-96. Study the pie-chart and answer the following questions.

निम्नलिखित पाई-चार्ट में वर्ष 1994-96 में विशेष बच्चों की जनसंख्या का वितरण दर्शाया गया है। पाई-चार्ट का अध्ययन कीजिए और निम्नलिखित प्रश्नों का उत्तर दीजिए ।



What is the ratio between language disorder and the average of the remaining disorder cases.

भाषा बाधा और बाकी बाधा वाले बच्चों के औसत का अनुपात कितना है?

**Options:**

- 1) 219:119
- 2) 119:219
- 3) 919:419
- 4) 729:529

**Correct Answer:** 219:119

**Candidate Answer:** [ NOT ANSWERED ]

Question 76. In the following question, out of the four alternatives, choose the word which best expresses the meaning of the given word and click the button corresponding to it.

COPIOUS

**Options:**

- 1) VAST
- 2) IDENTICAL
- 3) PLENTIFUL
- 4) MESSY

**Correct Answer:** PLENTIFUL

**Candidate Answer:** VAST

Question 77. In the following question, out of the four alternatives, choose the word which is opposite in meaning to the given word and click the button corresponding to it.

EXTRANEIOUS

**Options:**

- 1) UNUSUAL
- 2) DISPIRITED
- 3) RELEVANT
- 4) INTRUSIVE

**Correct Answer:** RELEVANT

**Candidate Answer:** UNUSUAL

Question 78. Four words are given, out of which only one word is spelt correctly. Choose the correctly spelt word and click the button corresponding to it.



**Options:**

- 1) discripancy
- 2) discrepancy
- 3) discrepancy
- 4) descripancy

**Correct Answer:** discrepancy**Candidate Answer:** discripancy

Question 79. In the following questions, one part of the sentence may have an error. Find out which part of the sentence has an error and click the button corresponding to it. If the sentence is free from error, click the "No error" option.

The Statesman has(A)/the largest circulation of any (B)/English dailies.(C)/No Error(D)

**Options:**

- 1) A
- 2) B
- 3) C
- 4) D

**Correct Answer:** B**Candidate Answer:** B

Question 80. In the following questions, one part of the sentence may have an error. Find out which part of the sentence has an error and click the button corresponding to it. If the sentence is free from error, click the "No error" option.

A period of six years(A)/ have elapsed(B)/ since I last saw her.(C)/No Error(D)

**Options:**

- 1) A
- 2) B
- 3) C
- 4) D

**Correct Answer:** B**Candidate Answer:** A

Question 81. In the following questions, one part of the sentence may have an error. Find out which part of the sentence has an error and click the button corresponding to it. If the sentence is free from error, click the "No error" option.

For several years now(A)/my newspaper agent has been spelling(B)/my name in correctly.(C)/No Error(D)

**Options:**

- 1) A
- 2) B
- 3) C
- 4) D

**Correct Answer:** D**Candidate Answer:** A

Question 82. The sentences given with blanks are to be filled with an appropriate word(s). Four alternatives are suggested for each question. For each question, choose the correct alternative and click the button corresponding to it.

One of the reasons the impressionists caused such a scandal was \_\_\_\_\_ their colours were too bright.

**Options:**

- 1) because of which
- 2) due to
- 3) because
- 4) of

**Correct Answer:** because**Candidate Answer:** of

Question 83. The sentences given with blanks are to be filled with an appropriate word(s). Four alternatives are suggested for each question. For each question, choose the correct alternative and click the button corresponding to it.

She must sometimes \_\_\_\_\_ to run away.

**Options:**

- 1) has wanted
- 2) have wanted
- 3) having want
- 4) has want

**Correct Answer:** have wanted**Candidate Answer:** has wanted

Question 84. The sentences given with blanks are to be filled with an appropriate word(s). Four alternatives are suggested for each question. For each question, choose the correct alternative and click the button corresponding to it.

The bank decided to \_\_\_\_\_ them the money as they were reliable clients.

**Options:**

- 1) let
- 2) lend
- 3) borrow
- 4) lease

**Correct Answer:** lend**Candidate Answer:** lend

Question 85. In each of the questions, four alternatives are given for the Idiom/Phrase. Choose the alternative which best expresses the meaning of the Idiom/Phrase and click the button corresponding to it.

Smooth ruffled feathers

**Options:**

- 1) Comb untidy hair
- 2) Make people feel less offended
- 3) Touse someone's hair
- 4) Stroke a pet animal

**Correct Answer:** Make people feel less offended

**Candidate Answer:** [ NOT ANSWERED ]

Question 86. In each of the questions, four alternatives are given for the Idiom/Phrase. Choose the alternative which best expresses the meaning of the Idiom/Phrase and click the button corresponding to it.

Assume airs

**Options:**

- 1) Take tight
- 2) Remain calm
- 3) Act innocent
- 4) Pretend superiority

**Correct Answer:** Pretend superiority

**Candidate Answer:** Act innocent

Question 87. In each of the questions, four alternatives are given for the Idiom/Phrase. Choose the alternative which best expresses the meaning of the Idiom/Phrase and click the button corresponding to it.

Play truant

**Options:**

- 1) Play a tyrant
- 2) Stay away from duty
- 3) Be responsible
- 4) Be alert

**Correct Answer:** Stay away from duty

**Candidate Answer:** [ NOT ANSWERED ]

Question 88. Out of the four alternatives, choose the one which can be substituted for the given words/sentences and click the button corresponding to it.

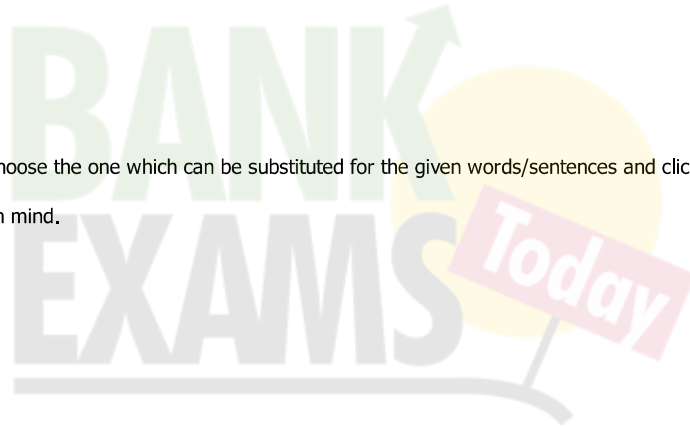
One who studies the working of the human mind.

**Options:**

- 1) Anthropologist
- 2) Psychologist
- 3) Neurologist
- 4) Ethnologist

**Correct Answer:** Psychologist

**Candidate Answer:** Psychologist



Question 89. Out of the four alternatives, choose the one which can be substituted for the given words/sentences and click the button corresponding to it.

Place given to soldiers to live in

**Options:**

- 1) Barracks
- 2) Trench
- 3) Garage
- 4) Quay

**Correct Answer:** Barracks

**Candidate Answer:** Barracks

Question 90. Out of the four alternatives, choose the one which can be substituted for the given words/sentences and click the button corresponding to it.

A person of South African Dutch descent

**Options:**

- 1) Boar
- 2) Boer
- 3) Boor
- 4) Bore

**Correct Answer:** Boer

**Candidate Answer:** Boer

Question 91. A sentence/a part of the sentence is underlined. Four alternatives are given to the underlined part which will improve the sentence. Choose the correct alternative and click the button corresponding to it. In case no improvement is needed, click the button corresponding to "No improvement".

She took the cycle which he bought yesterday.

**Options:**

- 1) that he bought yesterday.
- 2) that he had bought yesterday
- 3) that he has bought yesterday
- 4) No Improvement

**Correct Answer:** that he had bought yesterday

**Candidate Answer:** [ NOT ANSWERED ]

Question 92.A sentence/a part of the sentence is underlined. Four alternatives are given to the underlined part which will improve the sentence. Choose the correct alternative and click the button corresponding to it. In case no improvement is needed, click the button corresponding to "No improvement".

I must say to a feeling of uneasiness.

**Options:**

- 1) confess
- 2) connive
- 3) utter
- 4) No Improvement

**Correct Answer:** confess

**Candidate Answer:** confess

Question 93.A sentence/a part of the sentence is underlined. Four alternatives are given to the underlined part which will improve the sentence. Choose the correct alternative and click the button corresponding to it. In case no improvement is needed, click the button corresponding to "No improvement".

The police booked a case against the taxi driver for wrong parking.

**Options:**

- 1) restricted
- 2) wrote
- 3) filed
- 4) No Improvement

**Correct Answer:** filed

**Candidate Answer:** filed

Question 94.A sentence/a part of the sentence is underlined. Four alternatives are given to the underlined part which will improve the sentence. Choose the correct alternative and click the button corresponding to it. In case no improvement is needed, click the button corresponding to "No improvement".

One of our students originates from Leh.

**Options:**

- 1) comes
- 2) origins
- 3) belongs
- 4) No Improvement

**Correct Answer:** comes

**Candidate Answer:** comes

Question 95.A sentence/a part of the sentence is underlined. Four alternatives are given to the underlined part which will improve the sentence. Choose the correct alternative and click the button corresponding to it. In case no improvement is needed, click the button corresponding to "No improvement".

Scarcely had he left the place when his friend came.

**Options:**

- 1) He had scarcely leave
- 2) He had left scarcely
- 3) He scarcely had left
- 4) No Improvement

**Correct Answer:** No Improvement

**Candidate Answer:** He scarcely had left

Question 96.A passage is given with 5 questions following it. Read the passage carefully and choose the best answer to each question out of the four alternatives and click the button corresponding to it.

He waited a moment in surprise, wondering why she did not come nearer, and then, maddened by hunger, he dived at the fish. With a loud scream he fell outwards and downwards into space. His mother had soared upwards. As he passed beneath her, he heard the swish of her wings. Then a monstrous terror seized him and his heart stood still. He could hear nothing. But it only lasted a moment. The next moment, he felt his wings spread outwards. The wind rushed against his breast feathers, then under his stomach and against his wings. He could feel the tips of his wings cutting through the air. He was not falling headlong now. He was soaring gradually downwards and outwards.

He was no longer afraid. He just felt a bit dizzy. Then, he flapped his wings once and he soared upwards. he uttered a joyous scream and flapped them again. He soared higher. He raised his breast and banked against the wind. His mother swooped past him, her wings making a loud noise. He answered her with another scream.

The young seagull dived at the fish

**Options:**

- 1) maddened by anger
- 2) maddened by want
- 3) out of spite
- 4) out of loneliness

**Correct Answer:** maddened by want

**Candidate Answer:** [ NOT ANSWERED ]

Question 97. A passage is given with 5 questions following it. Read the passage carefully and choose the best answer to each question out of the four alternatives and click the button corresponding to it.

He waited a moment in surprise, wondering why she did not come nearer, and then, maddened by hunger, he dived at the fish. With a loud scream he fell outwards and downwards into space. His mother had soared upwards. As he passed beneath her, he heard the swish of her wings. Then a monstrous terror seized him and his heart stood still. He could hear nothing. But it only lasted a moment. The next moment, he felt his wings spread outwards. The wind rushed against his breast feathers, then under his stomach and against his wings. He could feel the tips of his wings cutting through the air. He was not falling headlong now. He was soaring gradually downwards and outwards.

He was no longer afraid. He just felt a bit dizzy. Then, he flapped his wings once and he soared upwards. He uttered a joyous scream and flapped them again. He soared higher. He raised his breast and banked against the wind. His mother swooped past him, her wings making a loud noise. He answered her with another scream.

His heart stood still because he was seized by \_\_\_\_\_

**Options:**

- 1) a monstrous fury
- 2) courage
- 3) a monstrous terror
- 4) joy

**Correct Answer:** a monstrous terror

**Candidate Answer:** [ NOT ANSWERED ]

Question 98. A passage is given with 5 questions following it. Read the passage carefully and choose the best answer to each question out of the four alternatives and click the button corresponding to it.

He waited a moment in surprise, wondering why she did not come nearer, and then, maddened by hunger, he dived at the fish. With a loud scream he fell outwards and downwards into space. His mother had soared upwards. As he passed beneath her, he heard the swish of her wings. Then a monstrous terror seized him and his heart stood still. He could hear nothing. But it only lasted a moment. The next moment, he felt his wings spread outwards. The wind rushed against his breast feathers, then under his stomach and against his wings. He could feel the tips of his wings cutting through the air. He was not falling headlong now. He was soaring gradually downwards and outwards.

He was no longer afraid. He just felt a bit dizzy. Then, he flapped his wings once and he soared upwards. He uttered a joyous scream and flapped them again. He soared higher. He raised his breast and banked against the wind. His mother swooped past him, her wings making a loud noise. He answered her with another scream.

He was not falling headlong but

**Options:**

- 1) he was afraid
- 2) he was soaring downwards and outwards
- 3) his stomach was full
- 4) he was joining his father

**Correct Answer:** he was soaring downwards and outwards

**Candidate Answer:** [ NOT ANSWERED ]

Question 99. A passage is given with 5 questions following it. Read the passage carefully and choose the best answer to each question out of the four alternatives and click the button corresponding to it.

He waited a moment in surprise, wondering why she did not come nearer, and then, maddened by hunger, he dived at the fish. With a loud scream he fell outwards and downwards into space. His mother had soared upwards. As he passed beneath her, he heard the swish of her wings. Then a monstrous terror seized him and his heart stood still. He could hear nothing. But it only lasted a moment. The next moment, he felt his wings spread outwards. The wind rushed against his breast feathers, then under his stomach and against his wings. He could feel the tips of his wings cutting through the air. He was not falling headlong now. He was soaring gradually downwards and outwards.

He was no longer afraid. He just felt a bit dizzy. Then, he flapped his wings once and he soared upwards. He uttered a joyous scream and flapped them again. He soared higher. He raised his breast and banked against the wind. His mother swooped past him, her wings making a loud noise. He answered her with another scream.

The seagull just felt dizzy

**Options:**

- 1) and was filled with fear
- 2) and was no longer afraid
- 3) and did not flap his wings anymore
- 4) and dived lower

**Correct Answer:** and was no longer afraid

**Candidate Answer:** [ NOT ANSWERED ]

Question 100. A passage is given with 5 questions following it. Read the passage carefully and choose the best answer to each question out of the four alternatives and click the button corresponding to it.

He waited a moment in surprise, wondering why she did not come nearer, and then, maddened by hunger, he dived at the fish. With a loud scream he fell outwards and downwards into space. His mother had soared upwards. As he passed beneath her, he heard the swish of her wings. Then a monstrous terror seized him and his heart stood still. He could hear nothing. But it only lasted a moment. The next moment, he felt his wings spread outwards. The wind rushed against his breast feathers, then under his stomach and against his wings. He could feel the tips of his wings cutting through the air. He was not falling headlong now. He was soaring gradually downwards and outwards.

He was no longer afraid. He just felt a bit dizzy. Then, he flapped his wings once and he soared upwards. He uttered a joyous scream and flapped them again. He soared higher. He raised his breast and banked against the wind. His mother swooped past him, her wings making a loud noise. He answered her with another scream.

What did the young seagull do when his mother swooped past him?

**Options:**

- 1) Let out a joyous scream
- 2) Screamed at her in anger
- 3) Made a loud noise
- 4) Flapped anxiously

**Correct Answer:** Let out a joyous scream

**Candidate Answer:** [ NOT ANSWERED ]

